



Determine if the shape is translating (slide), rotating (turn) or reflecting (flip).

Answers

1)



2)



3)



4)



5)



6)



7)



8)



9)



10)



11)



12)



13)



14)



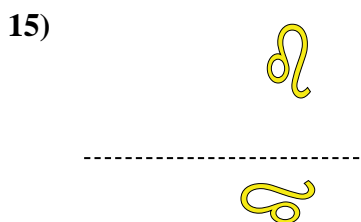
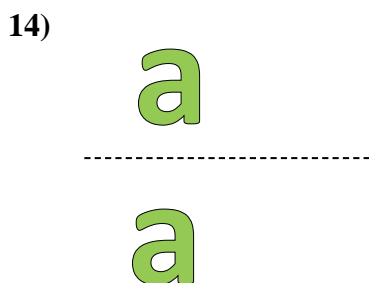


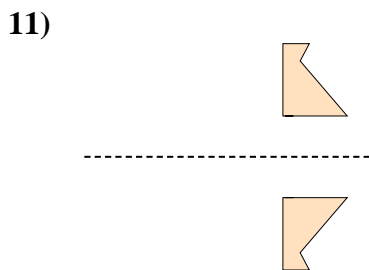
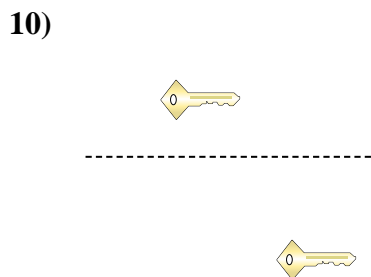
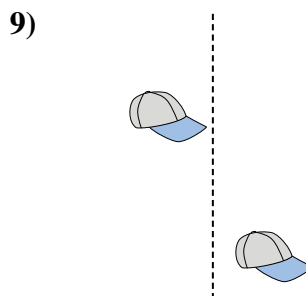
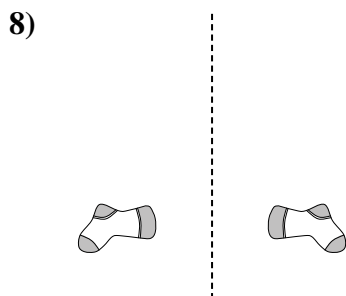
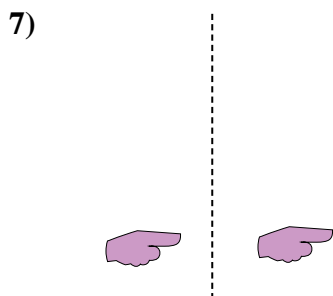
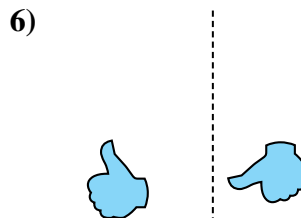

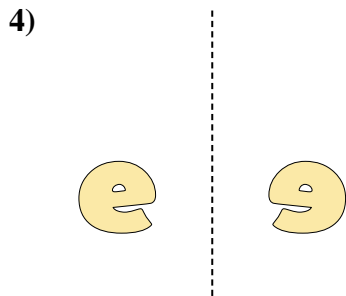
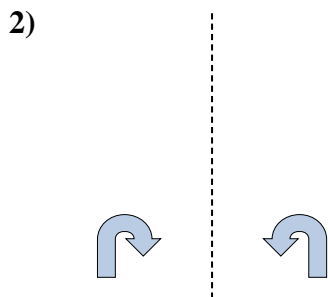

15)



1. _____
2. _____
3. _____
4. _____
5. _____
6. _____
7. _____
8. _____
9. _____
10. _____
11. _____
12. _____
13. _____
14. _____
15. _____



Determine if the shape is translating (slide), rotating (turn) or reflecting (flip).



Answers

1. rotating

2. reflecting

3. reflecting

4. reflecting

5. translating

6. rotating

7. translating

8. reflecting

9. translating

10. translating

11. reflecting

12. rotating

13. rotating

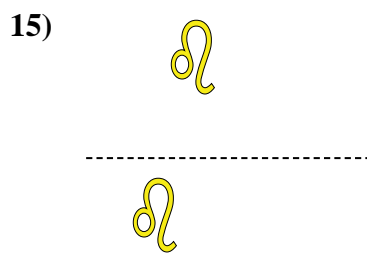
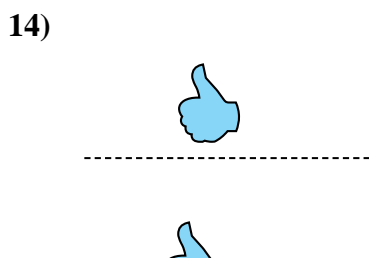
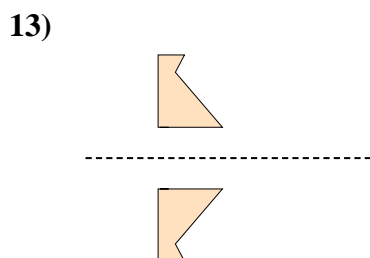
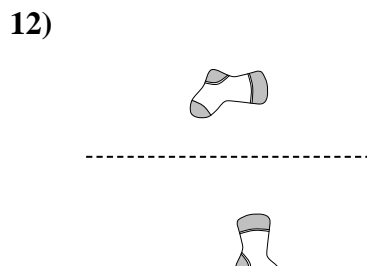
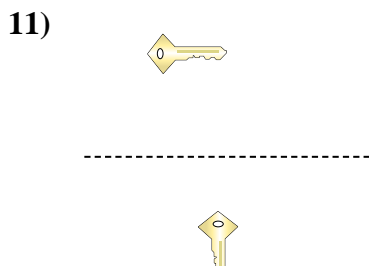
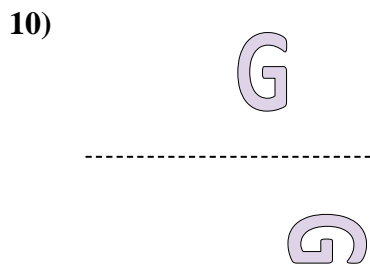
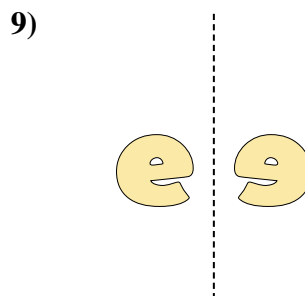
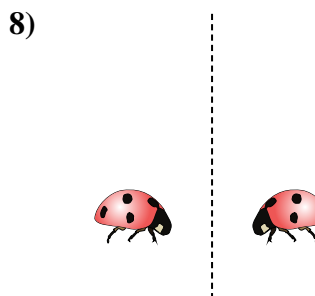
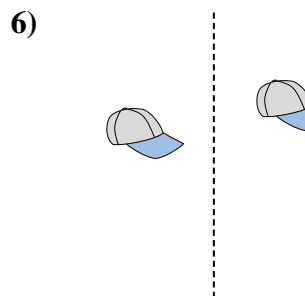
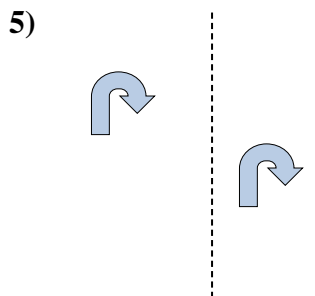

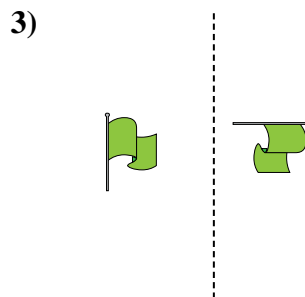
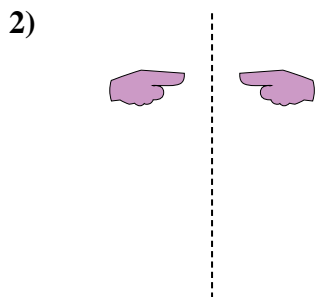

14. translating

15. rotating



Determine if the shape is translating (slide), rotating (turn) or reflecting (flip).

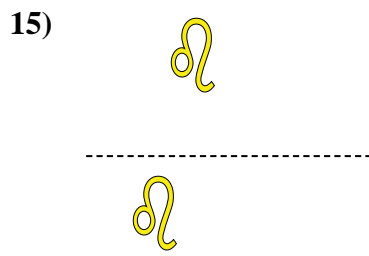
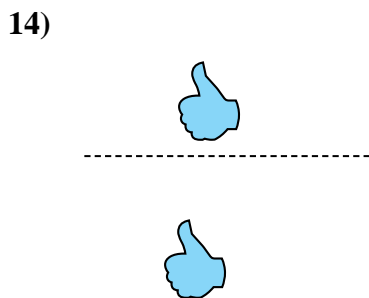
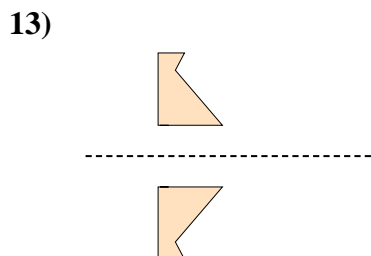
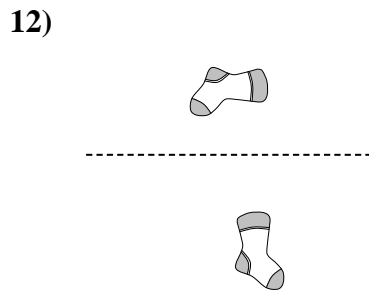
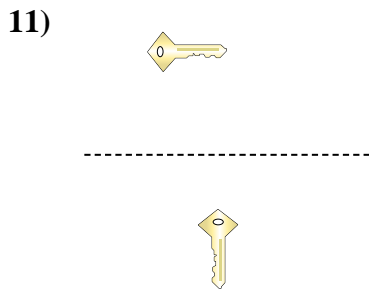
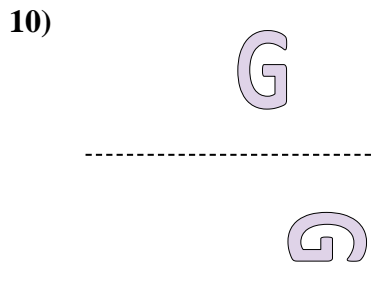
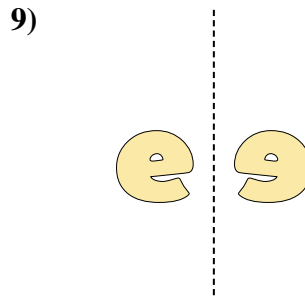
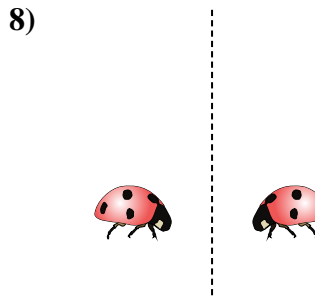
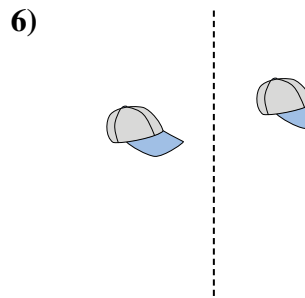
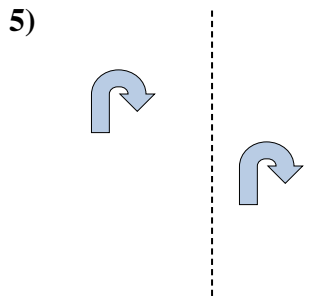

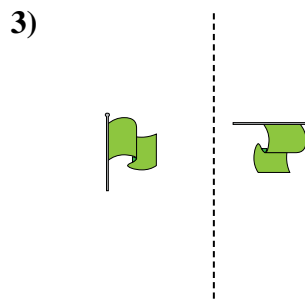
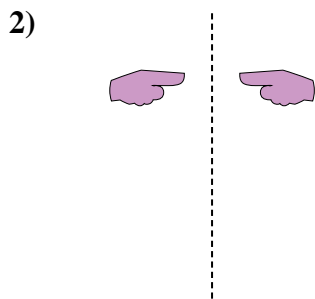

Answers



1. _____
2. _____
3. _____
4. _____
5. _____
6. _____
7. _____
8. _____
9. _____
10. _____
11. _____
12. _____
13. _____
14. _____
15. _____



Determine if the shape is translating (slide), rotating (turn) or reflecting (flip).



Answers

1. rotating

2. reflecting

3. rotating

4. reflecting

5. translating

6. translating

7. translating

8. reflecting

9. reflecting

10. rotating

11. rotating

12. rotating

13. reflecting

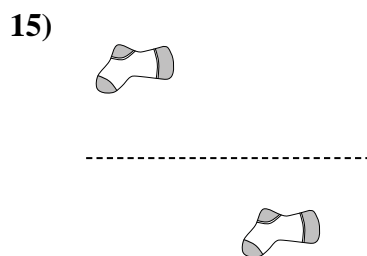
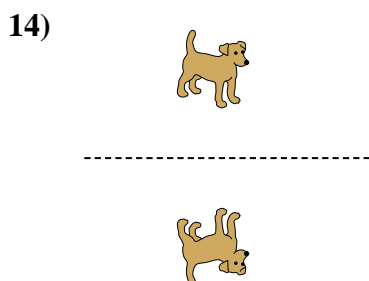
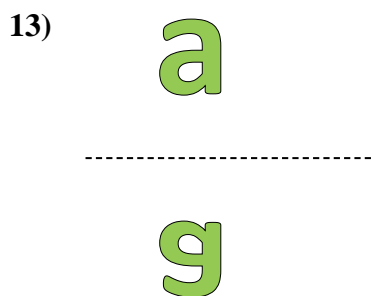
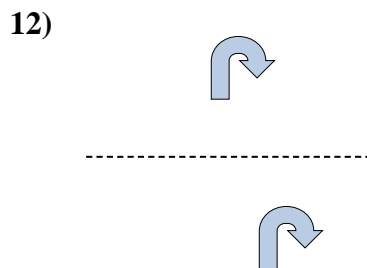
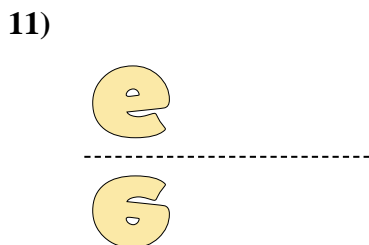
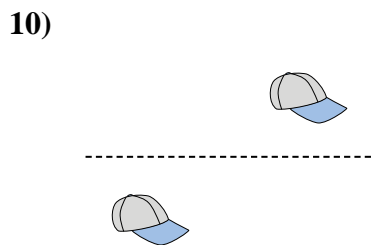

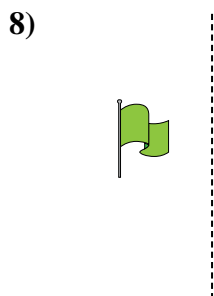

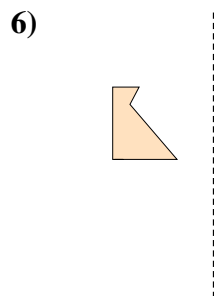




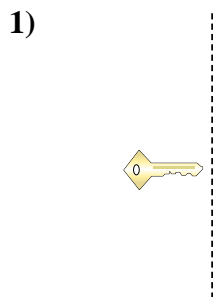
14. translating

15. translating



Determine if the shape is translating (slide), rotating (turn) or reflecting (flip).

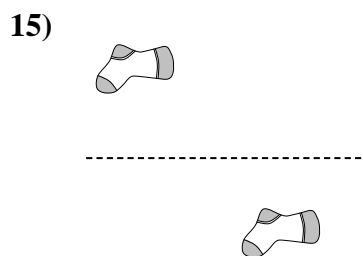
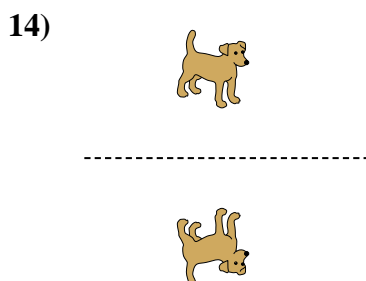
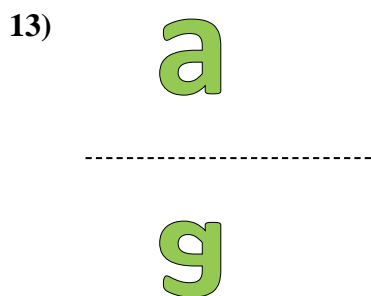
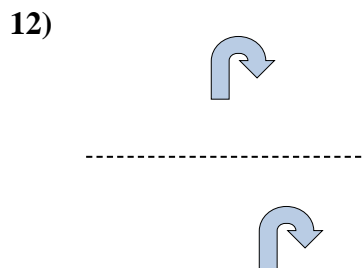
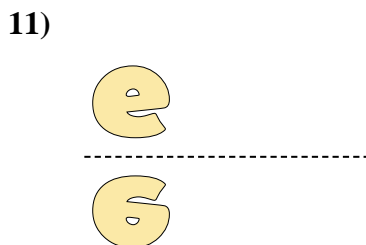
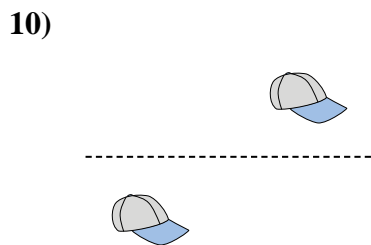
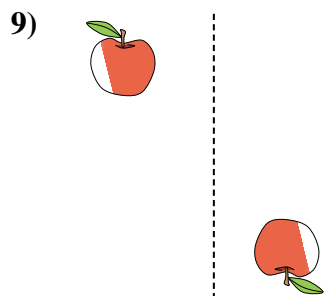
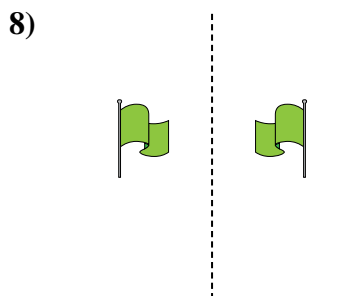

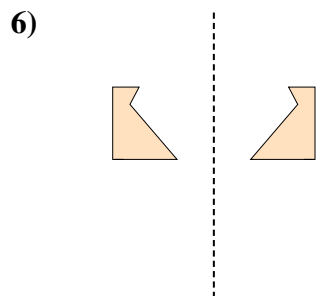
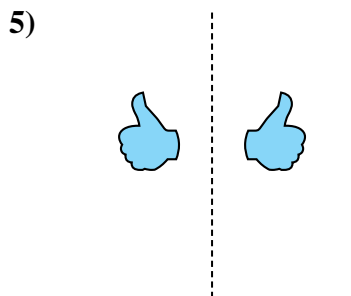

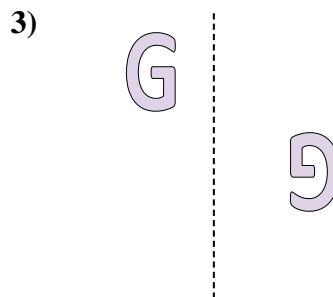

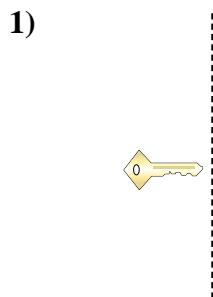
Answers



1. _____
2. _____
3. _____
4. _____
5. _____
6. _____
7. _____
8. _____
9. _____
10. _____
11. _____
12. _____
13. _____
14. _____
15. _____



Determine if the shape is translating (slide), rotating (turn) or reflecting (flip).



Answers

1. rotating

2. translating

3. rotating

4. rotating

5. reflecting

6. reflecting

7. translating

8. reflecting

9. rotating

10. translating

11. reflecting

12. translating

13. reflecting

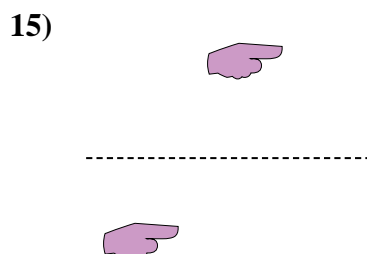
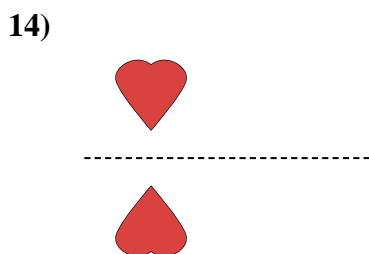
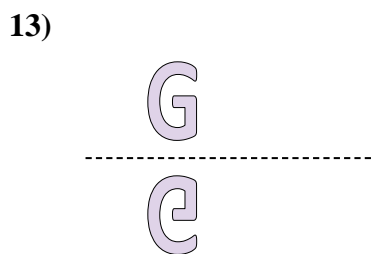

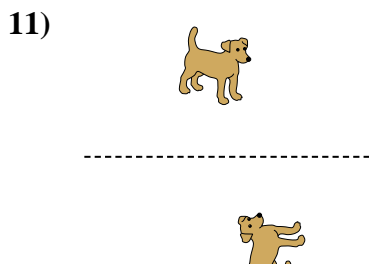
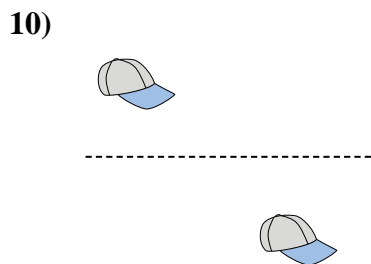
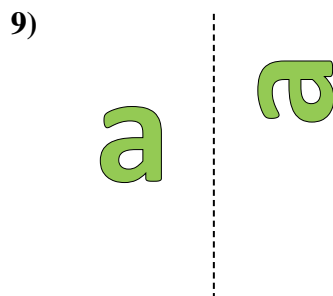
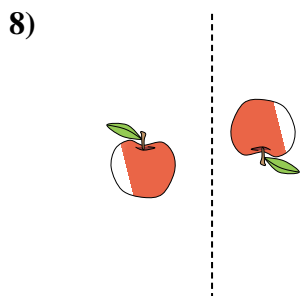
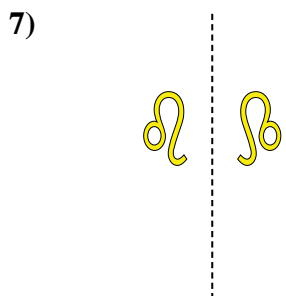
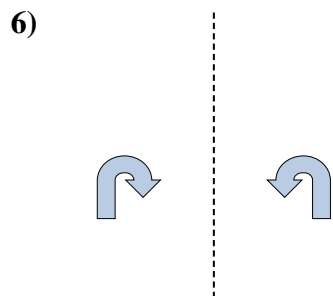
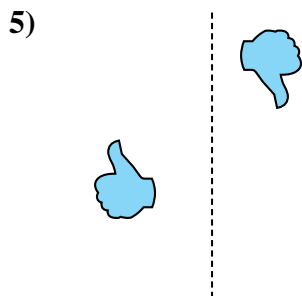
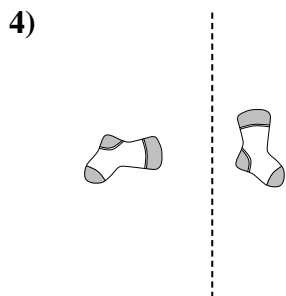
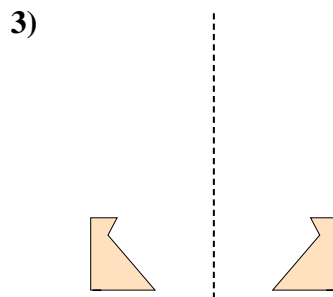
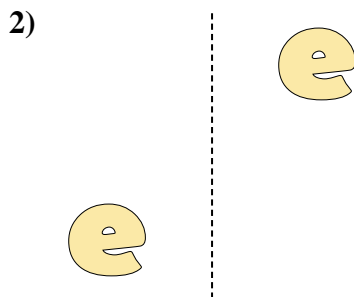
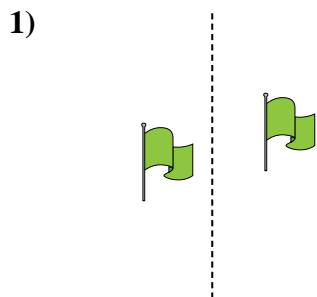
14. reflecting

15. translating



Determine if the shape is translating (slide), rotating (turn) or reflecting (flip).

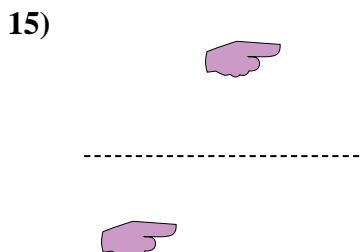
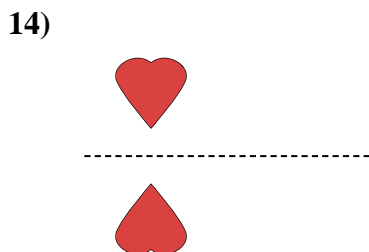
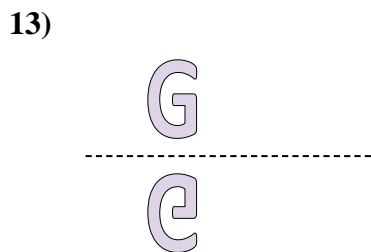
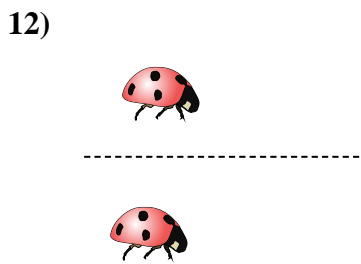
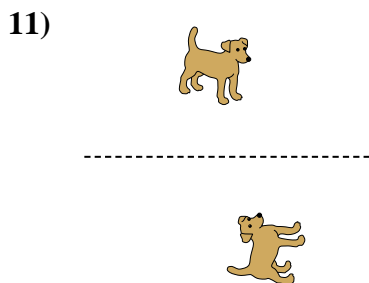
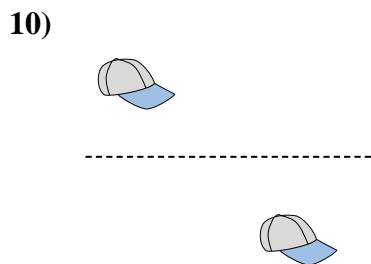
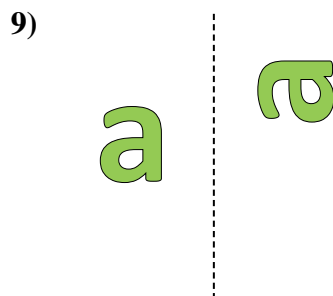

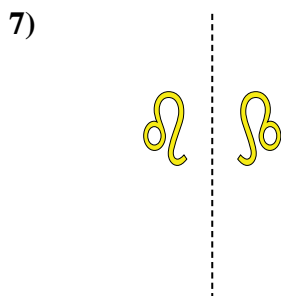
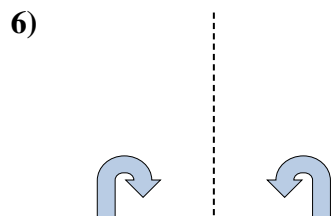
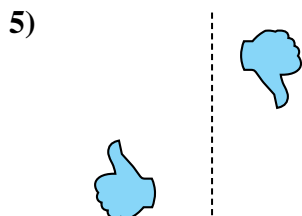
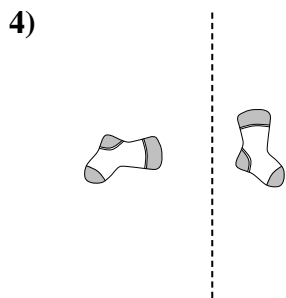
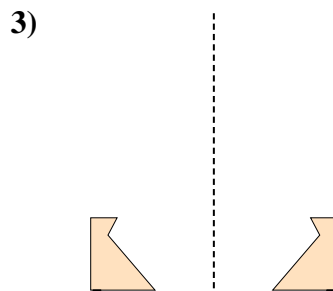

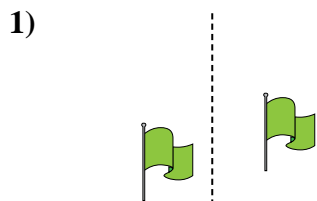
Answers



1. _____
2. _____
3. _____
4. _____
5. _____
6. _____
7. _____
8. _____
9. _____
10. _____
11. _____
12. _____
13. _____
14. _____
15. _____



Determine if the shape is translating (slide), rotating (turn) or reflecting (flip).



Answers

1. translating

2. translating

3. reflecting

4. rotating

5. rotating

6. reflecting

7. reflecting

8. rotating

9. rotating

10. translating

11. rotating

12. translating

13. reflecting

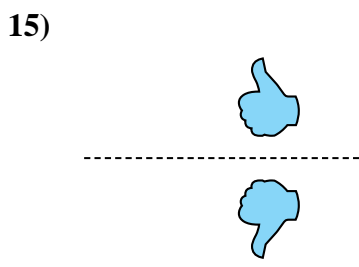
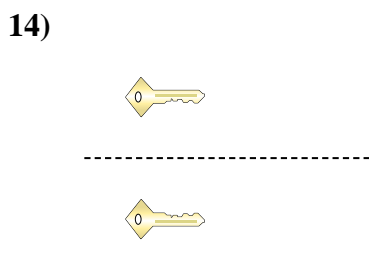
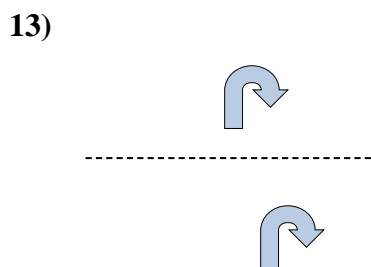
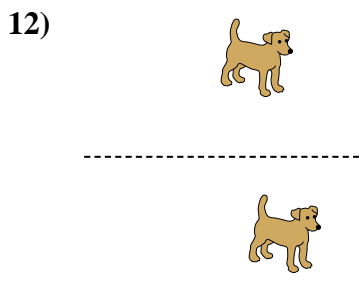
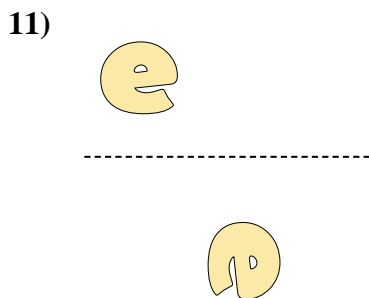
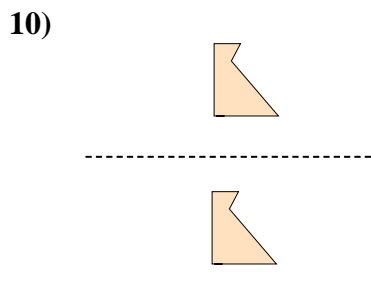
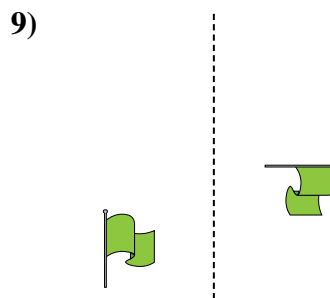
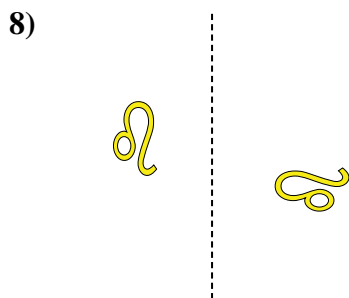
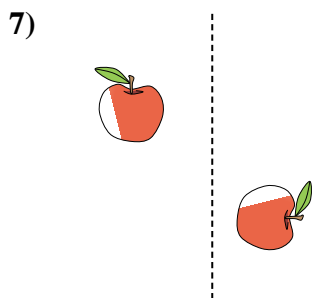
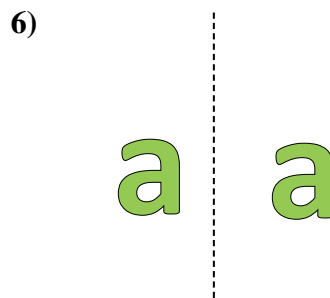
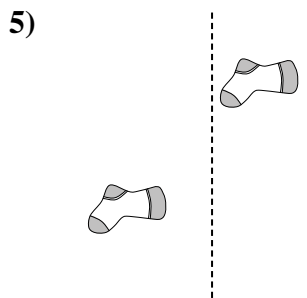
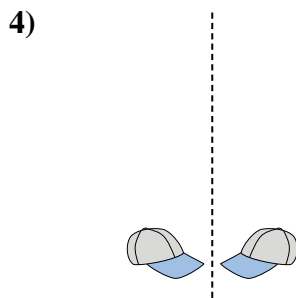
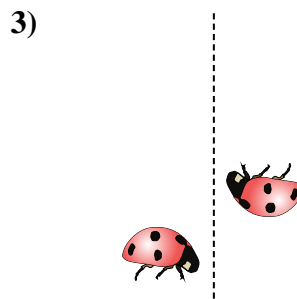
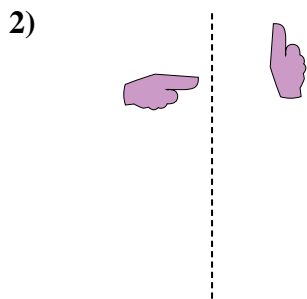
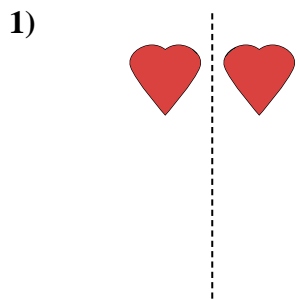
14. reflecting

15. translating



Determine if the shape is translating (slide), rotating (turn) or reflecting (flip).

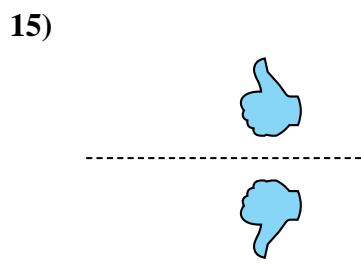
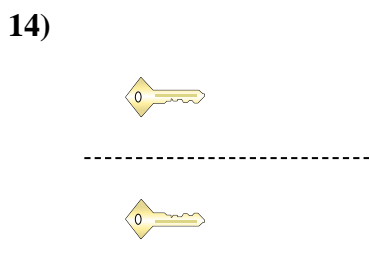
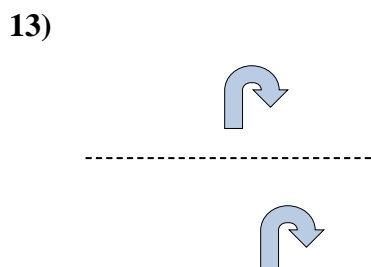
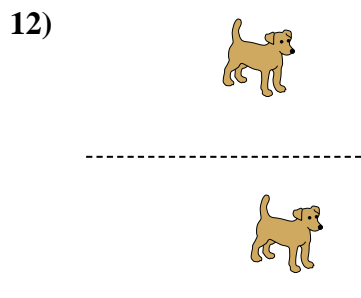
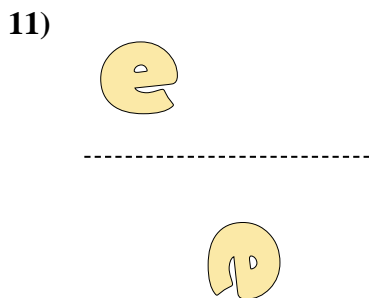
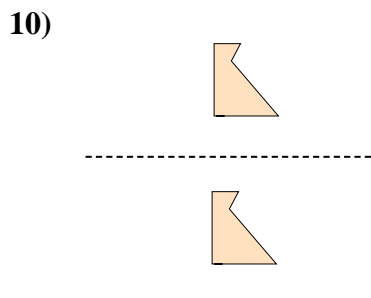
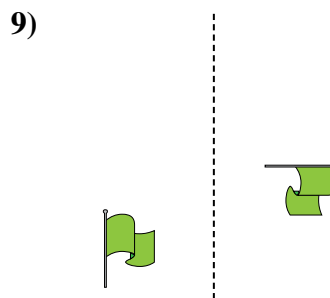
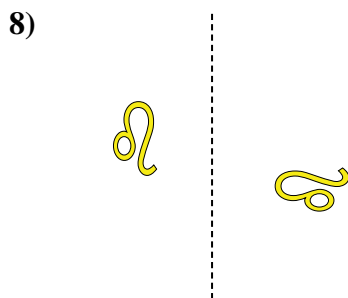
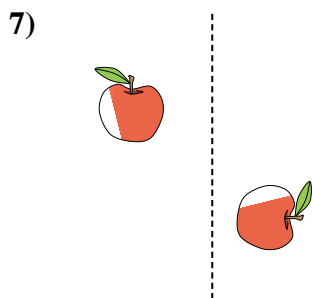
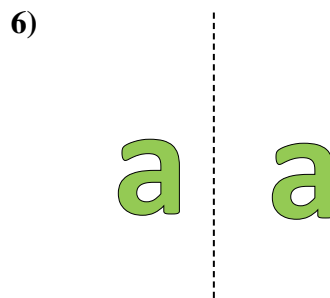
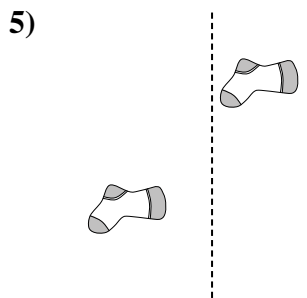
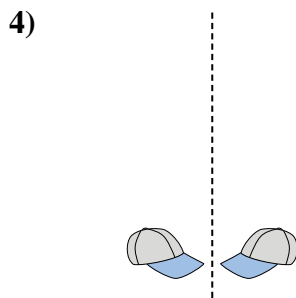
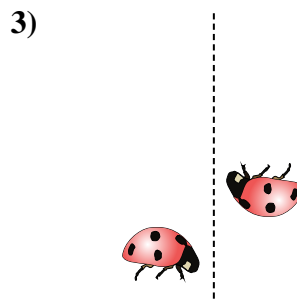
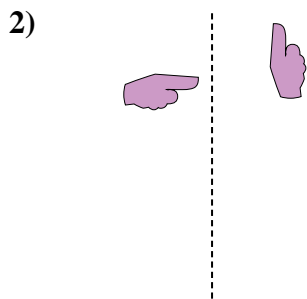
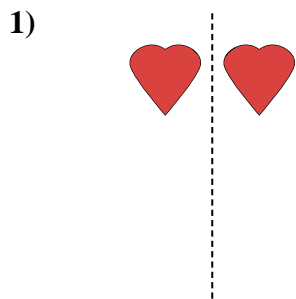
Answers



1. _____
2. _____
3. _____
4. _____
5. _____
6. _____
7. _____
8. _____
9. _____
10. _____
11. _____
12. _____
13. _____
14. _____
15. _____



Determine if the shape is translating (slide), rotating (turn) or reflecting (flip).



Answers


1. reflecting
2. rotating
3. rotating
4. reflecting
5. translating
6. translating
7. rotating
8. rotating
9. rotating
10. translating
11. rotating
12. translating
13. translating
14. reflecting
15. reflecting



Determine if the shape is translating (slide), rotating (turn) or reflecting (flip).

Answers

1)



2)



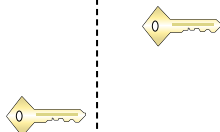
3)



4)



5)




6)




7)



8)



9)



10)



11)



12)



13)



14)



15)




1. _____
2. _____
3. _____
4. _____
5. _____
6. _____
7. _____
8. _____
9. _____
10. _____
11. _____
12. _____
13. _____
14. _____
15. _____



Determine if the shape is translating (slide), rotating (turn) or reflecting (flip).

1)



2)



3)



4)



5)



6)



7)



8)



9)



10)



11)



12)



13)



14)



15)



Answers

1. **reflecting**

2. **translating**

3. **rotating**

4. **translating**

5. **translating**

6. **rotating**

7. **reflecting**

8. **reflecting**

9. **translating**

10. **translating**

11. **translating**

12. **reflecting**

13. **rotating**

14. **rotating**

15. **rotating**



Determine if the shape is translating (slide), rotating (turn) or reflecting (flip).

Answers

1)



2)



3)



4)



5)



6)



7)



8)



9)



10)



11)



12)



13)



14)



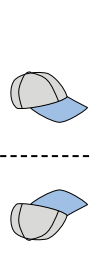
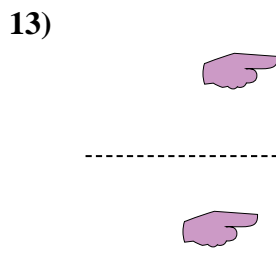
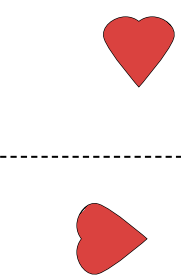
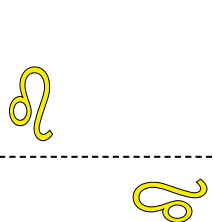
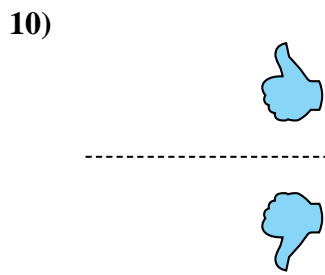
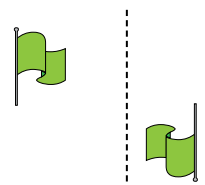
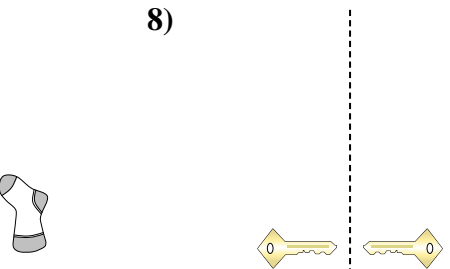
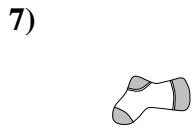
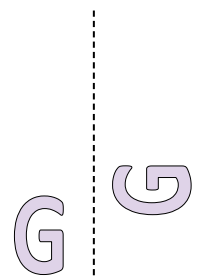
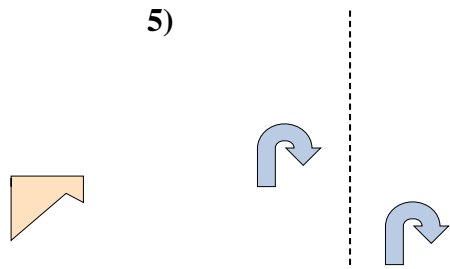
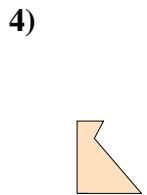


15)



1. _____
2. _____
3. _____
4. _____
5. _____
6. _____
7. _____
8. _____
9. _____
10. _____
11. _____
12. _____
13. _____
14. _____
15. _____



Determine if the shape is translating (slide), rotating (turn) or reflecting (flip).



Answers

1. translating

2. translating

3. reflecting

4. rotating

5. translating

6. rotating

7. rotating

8. reflecting

9. rotating

10. reflecting

11. rotating

12. rotating

13. translating

14. reflecting


15. reflecting



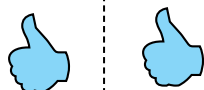
Determine if the shape is translating (slide), rotating (turn) or reflecting (flip).

Answers

1)



2)



3)



1. _____

2. _____

3. _____

4. _____

4)



5)



6)



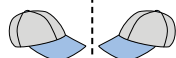
5. _____

6. _____


7. _____

8. _____

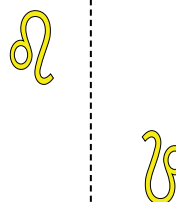
7)



8)



9)



9. _____

10. _____

11. _____

12. _____

10)



11)



12)



13. _____

14. _____



15. _____

13)



14)




15)



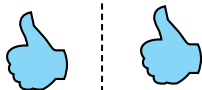


Determine if the shape is translating (slide), rotating (turn) or reflecting (flip).

1)



2)



3)



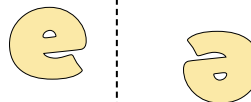
4)



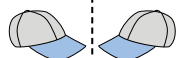
5)




6)



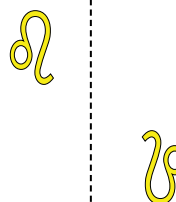
7)



8)



9)



10)



11)



12)



13)



14)



15)



Answers

1. rotating

2. translating

3. reflecting

4. reflecting

5. reflecting

6. rotating

7. reflecting

8. translating

9. rotating

10. translating

11. reflecting

12. translating

13. rotating

14. rotating


15. translating



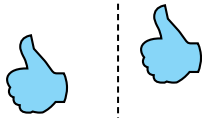
Determine if the shape is translating (slide), rotating (turn) or reflecting (flip).

Answers

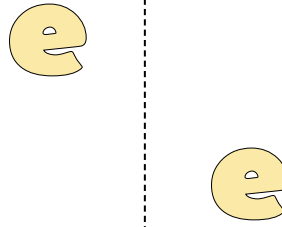
1)



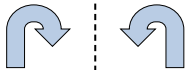
2)



3)




4)



5)



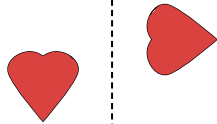
6)



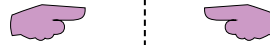
7)



8)




9)




10)



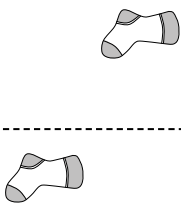
11)



12)



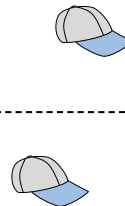
13)



14)



15)

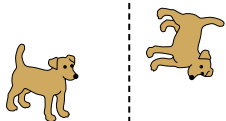


1. _____
2. _____
3. _____
4. _____
5. _____
6. _____
7. _____
8. _____
9. _____
10. _____
11. _____
12. _____
13. _____
14. _____
15. _____

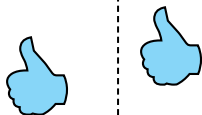


Determine if the shape is translating (slide), rotating (turn) or reflecting (flip).

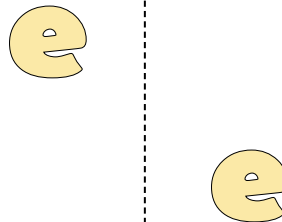
1)



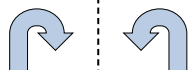
2)



3)




4)



5)



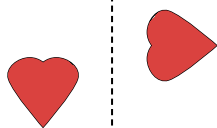
6)



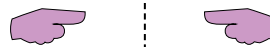
7)



8)




9)



10)



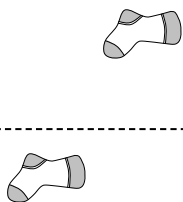
11)



12)



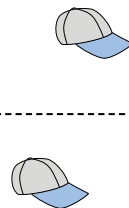
13)



14)



15)



Answers

1. rotating

2. translating

3. translating

4. reflecting

5. translating

6. rotating

7. rotating

8. rotating

9. reflecting

10. reflecting

11. reflecting

12. reflecting

13. translating

14. translating

15. translating



Determine if the shape is translating (slide), rotating (turn) or reflecting (flip).

Answers

1)



2)



3)



1. _____

2. _____

3. _____

4. _____

5. _____

6. _____

7. _____

8. _____

9. _____

10. _____

11. _____

12. _____

13. _____

14. _____

15. _____

4)



5)



6)



7)



8)



9)



10)



11)



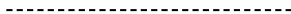
12)



13)



14)



15)





Determine if the shape is translating (slide), rotating (turn) or reflecting (flip).

1)



2)



3)



4)



5)



6)



7)



8)



9)



10)



11)



12)



13)



14)



15)



Answers

1. translating

2. rotating

3. translating

4. reflecting

5. rotating

6. translating

7. reflecting

8. translating

9. reflecting

10. translating

11. translating

12. rotating

13. rotating

14. rotating

15. reflecting