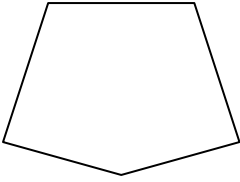





Determine if the shape shown is a regular shape or an irregular shape.

Answers


1)



2)



3)



1. \_\_\_\_\_

2. \_\_\_\_\_

3. \_\_\_\_\_

4. \_\_\_\_\_

5. \_\_\_\_\_

6. \_\_\_\_\_

7. \_\_\_\_\_

8. \_\_\_\_\_

9. \_\_\_\_\_

10. \_\_\_\_\_

11. \_\_\_\_\_


12. \_\_\_\_\_

13. \_\_\_\_\_

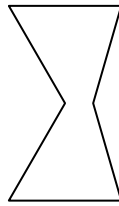
14. \_\_\_\_\_

15. \_\_\_\_\_

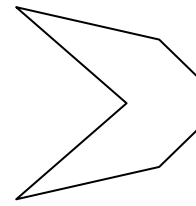
4)



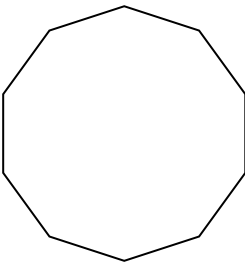
5)



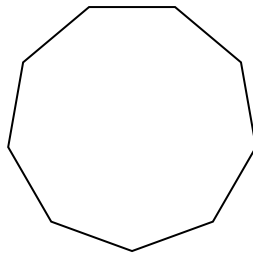
6)



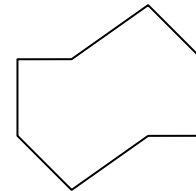
7)



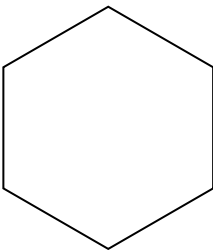
8)



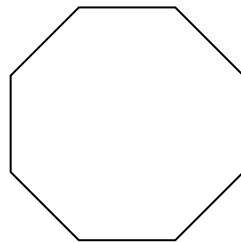
9)



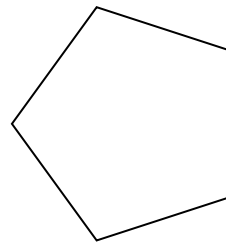
10)




11)



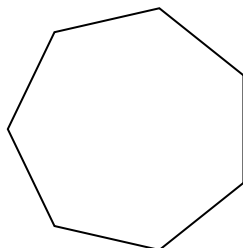
12)




13)



14)



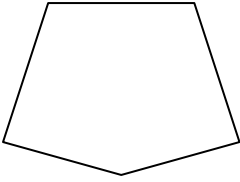
15)






Determine if the shape shown is a regular shape or an irregular shape.


1)




2)



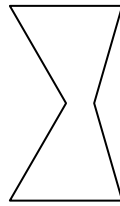
3)



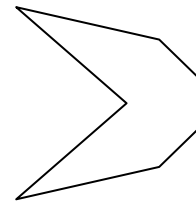
4)



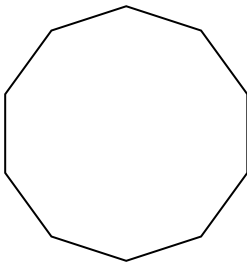
5)



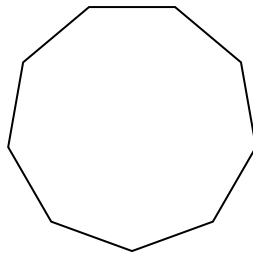
6)



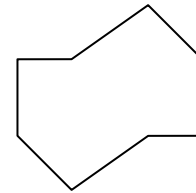
7)



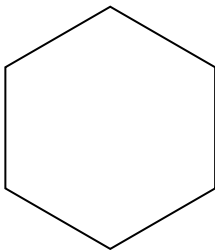
8)



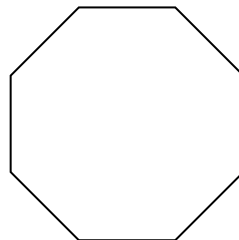
9)



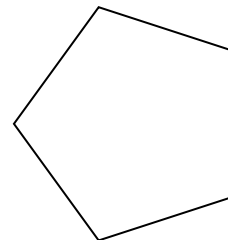
10)




11)



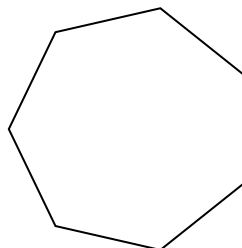
12)




13)



14)



15)



Answers

1. Irregular

2. Irregular

3. Regular

4. Irregular

5. Irregular

6. Irregular

7. Regular

8. Regular

9. Irregular

10. Regular

11. Regular

12. Regular

13. Irregular

14. Regular


15. Irregular



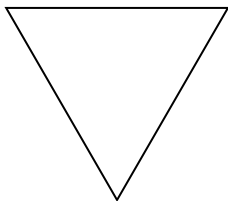
Determine if the shape shown is a regular shape or an irregular shape.

Answers

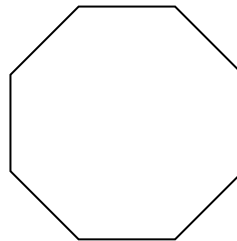
1)



2)



3)



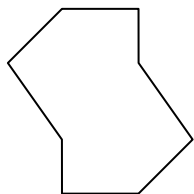
1. \_\_\_\_\_

2. \_\_\_\_\_

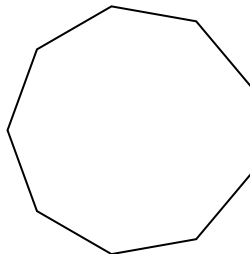
3. \_\_\_\_\_

4. \_\_\_\_\_

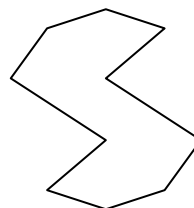
4)



5)



6)




5. \_\_\_\_\_

6. \_\_\_\_\_


7. \_\_\_\_\_

8. \_\_\_\_\_

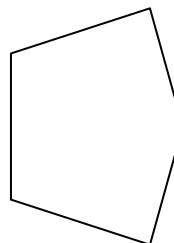
7)



8)



9)




9. \_\_\_\_\_

10. \_\_\_\_\_

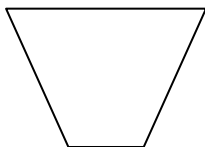
11. \_\_\_\_\_

12. \_\_\_\_\_

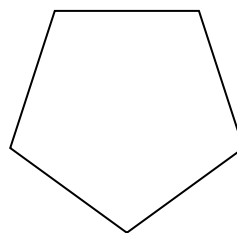
10)



11)



12)

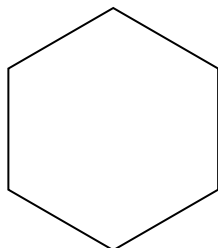


13. \_\_\_\_\_

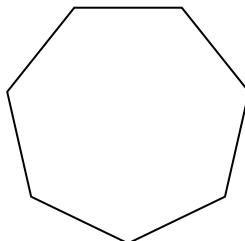
14. \_\_\_\_\_

15. \_\_\_\_\_

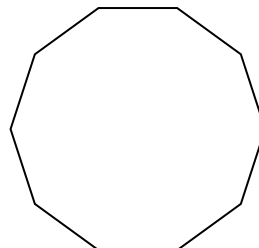
13)



14)




15)



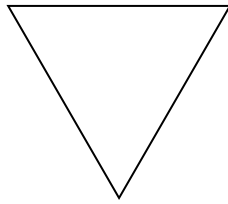


Determine if the shape shown is a regular shape or an irregular shape.

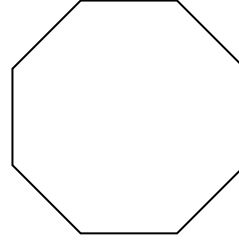
1)



2)



3)



Answers

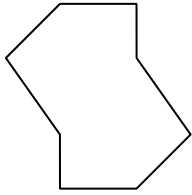
1. Regular

2. Regular

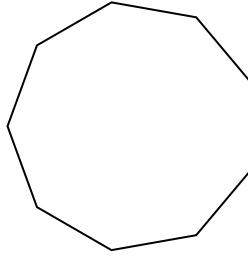
3. Regular

4. Irregular

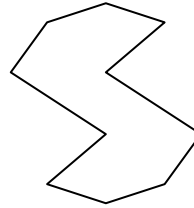
4)



5)




6)




5. Regular

6. Irregular

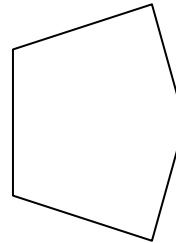
7)



8)



9)




7. Irregular

8. Irregular

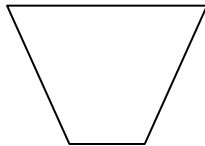
9. Irregular

10. Irregular

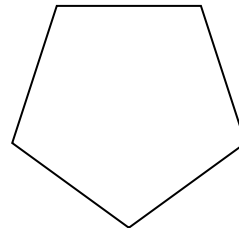
10)



11)



12)



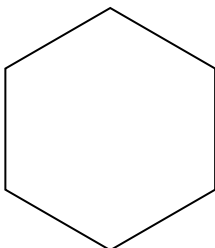
11. Irregular

12. Regular

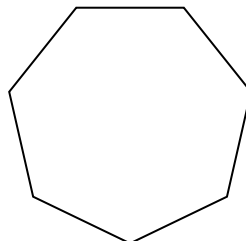
13. Regular

14. Regular

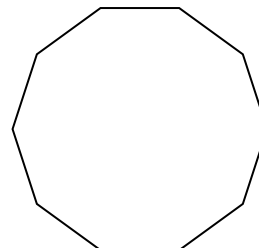
13)



14)



15)

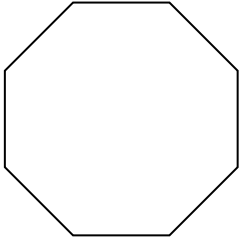


15. Regular

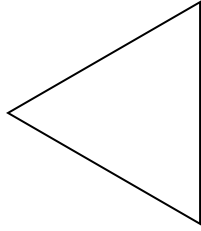


Determine if the shape shown is a regular shape or an irregular shape.

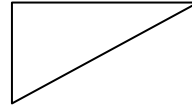
1)



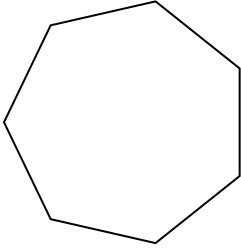
2)



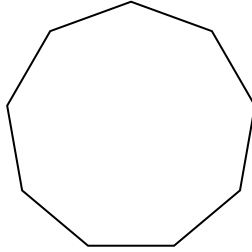
3)



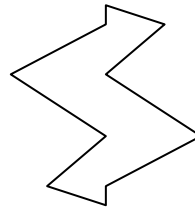
4)



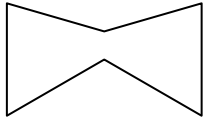
5)



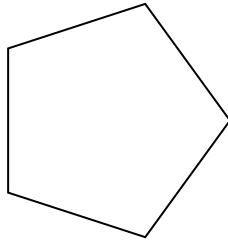
6)




7)




8)



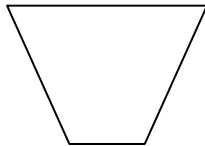
9)




10)




11)




12)



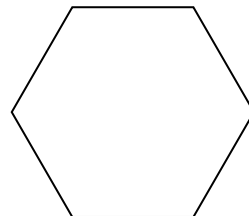
13)



14)



15)



Answers

1. \_\_\_\_\_

2. \_\_\_\_\_

3. \_\_\_\_\_

4. \_\_\_\_\_

5. \_\_\_\_\_

6. \_\_\_\_\_

7. \_\_\_\_\_

8. \_\_\_\_\_

9. \_\_\_\_\_

10. \_\_\_\_\_

11. \_\_\_\_\_

12. \_\_\_\_\_

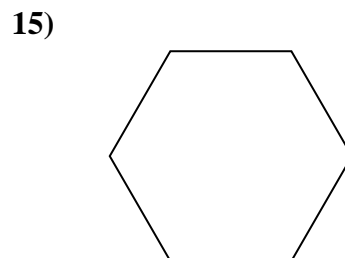
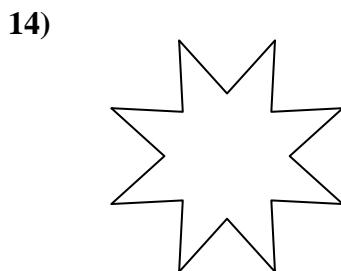
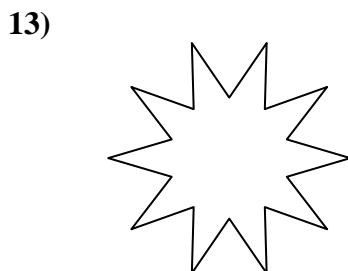
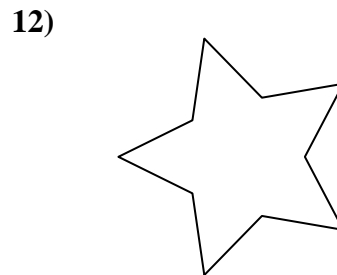
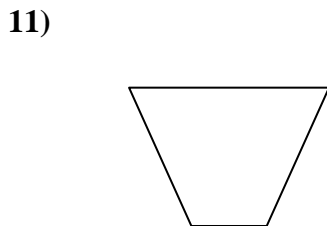
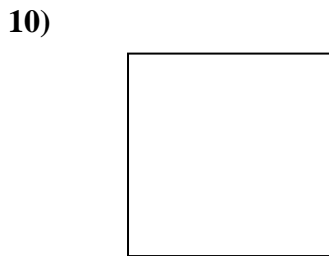
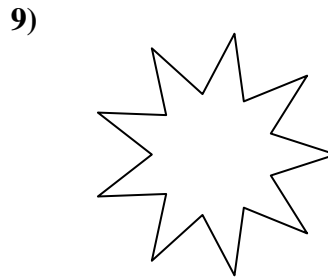
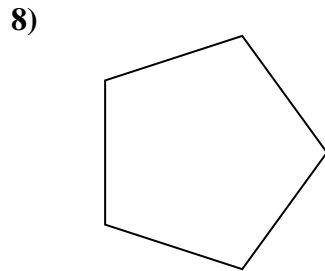
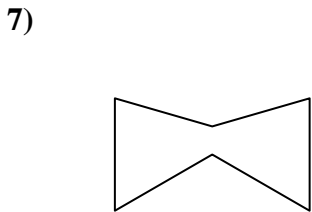
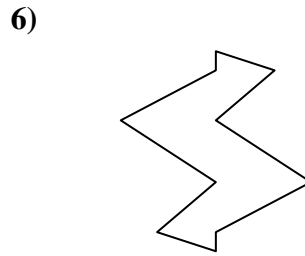
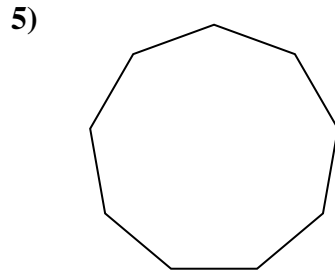
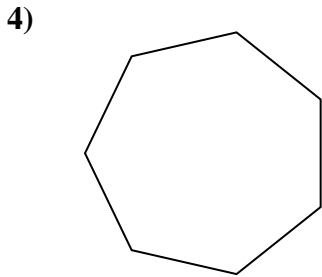
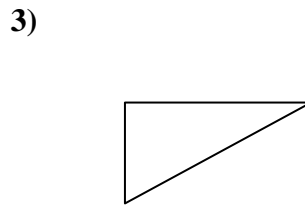
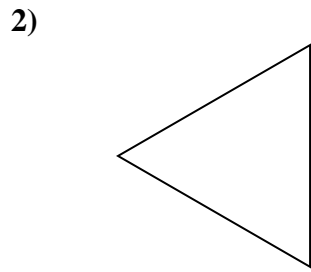
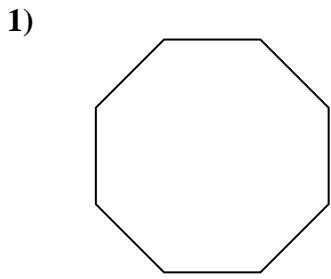
13. \_\_\_\_\_

14. \_\_\_\_\_

15. \_\_\_\_\_



Determine if the shape shown is a regular shape or an irregular shape.



Answers

1. Regular

2. Regular

3. Irregular

4. Regular

5. Regular

6. Irregular

7. Irregular

8. Regular

9. Irregular

10. Regular

11. Irregular

12. Irregular

13. Irregular

14. Irregular

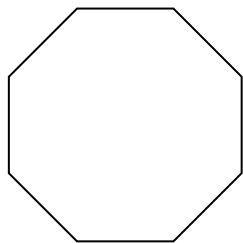
15. Regular




Determine if the shape shown is a regular shape or an irregular shape.

**Answers**

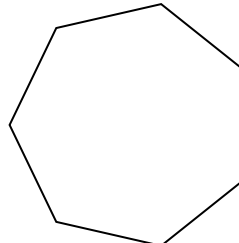
1)



2)



3)




1. \_\_\_\_\_

2. \_\_\_\_\_

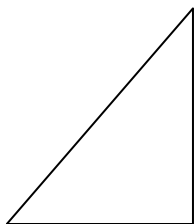
3. \_\_\_\_\_

4. \_\_\_\_\_

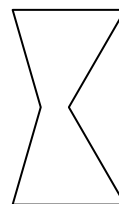
4)



5)



6)



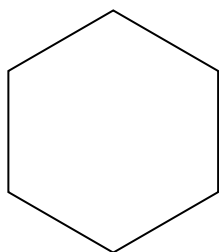
5. \_\_\_\_\_

6. \_\_\_\_\_

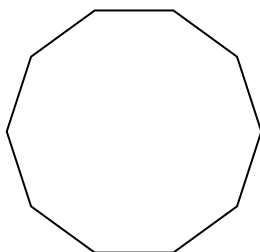
7. \_\_\_\_\_

8. \_\_\_\_\_


7)



8)



9)

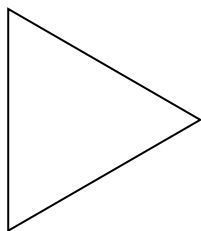


9. \_\_\_\_\_


10. \_\_\_\_\_

11. \_\_\_\_\_


10)



11)



12)




12. \_\_\_\_\_

13. \_\_\_\_\_

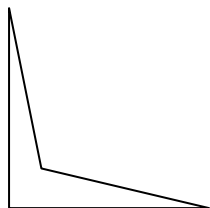
14. \_\_\_\_\_

15. \_\_\_\_\_

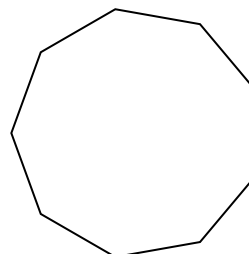
13)



14)



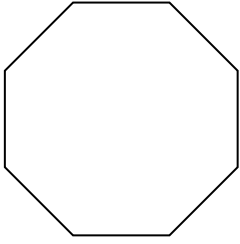
15)






Determine if the shape shown is a regular shape or an irregular shape.

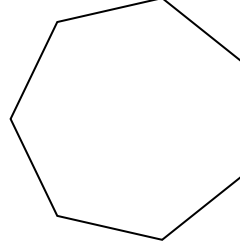
1)




2)




3)



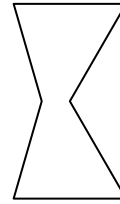
4)



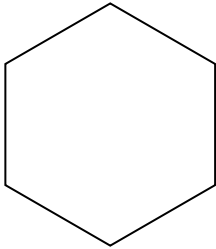
5)



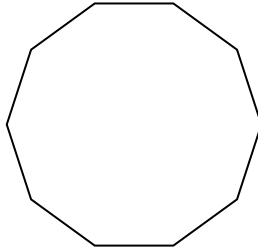
6)




7)



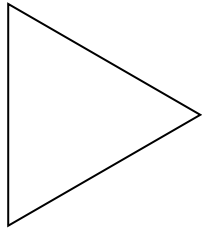
8)




9)



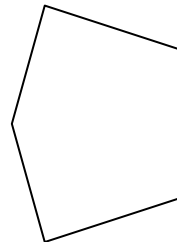
10)




11)



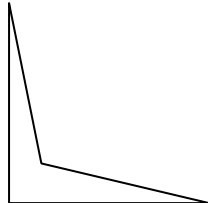
12)



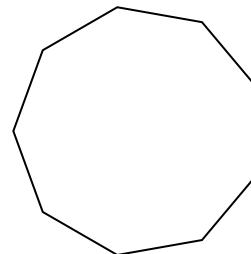
13)



14)



15)



Answers

1. Regular

2. Irregular

3. Regular

4. Irregular

5. Irregular

6. Irregular

7. Regular

8. Regular

9. Irregular

10. Regular

11. Regular

12. Irregular

13. Irregular

14. Irregular

15. Regular

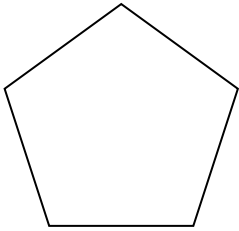




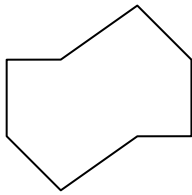
Determine if the shape shown is a regular shape or an irregular shape.

Answers


1)



2)



3)



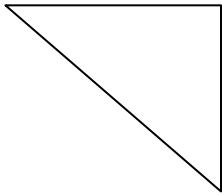
1. \_\_\_\_\_

2. \_\_\_\_\_

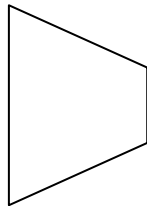
3. \_\_\_\_\_

4. \_\_\_\_\_

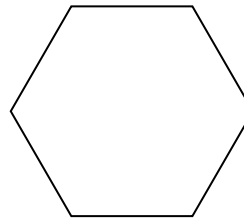
4)



5)



6)




5. \_\_\_\_\_

6. \_\_\_\_\_


7. \_\_\_\_\_

8. \_\_\_\_\_

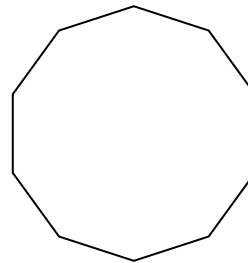
7)



8)



9)



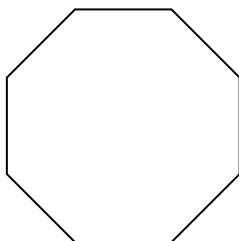
9. \_\_\_\_\_

10. \_\_\_\_\_


11. \_\_\_\_\_

12. \_\_\_\_\_

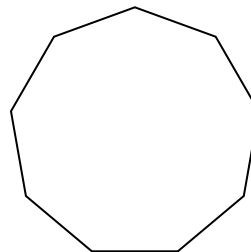
10)



11)



12)

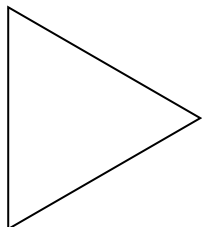


13. \_\_\_\_\_


14. \_\_\_\_\_

15. \_\_\_\_\_

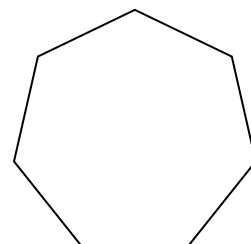
13)



14)



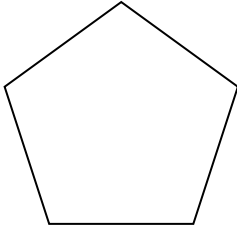
15)



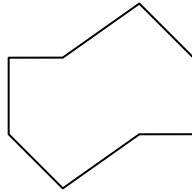


Determine if the shape shown is a regular shape or an irregular shape.


1)



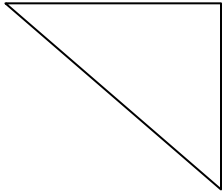
2)



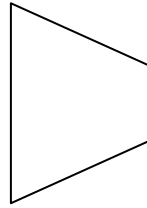
3)



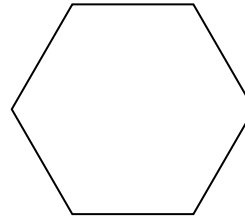
4)




5)




6)



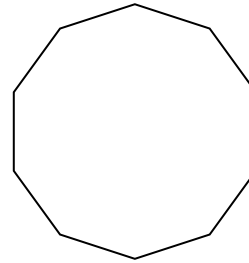
7)



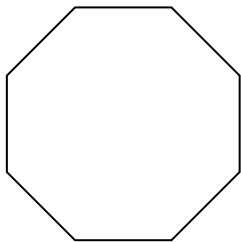
8)




9)



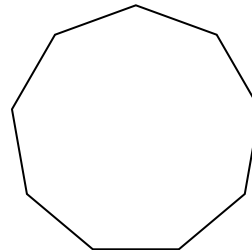
10)



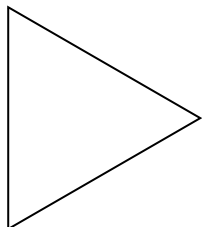
11)




12)



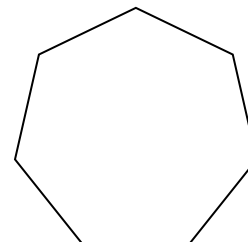
13)



14)



15)



Answers

1. Regular

2. Irregular

3. Regular

4. Irregular

5. Irregular

6. Regular

7. Irregular

8. Irregular

9. Regular

10. Regular

11. Irregular

12. Regular

13. Regular

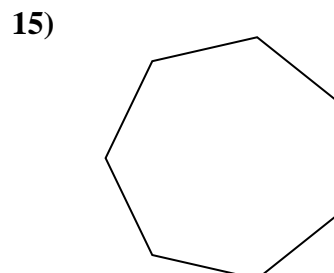
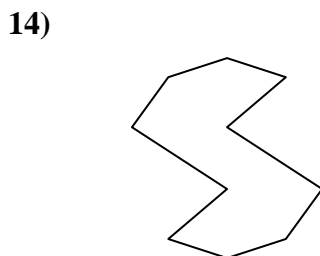
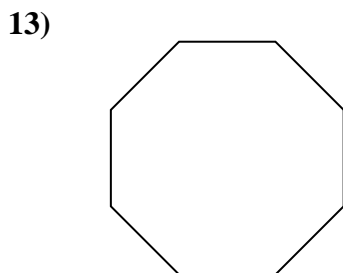
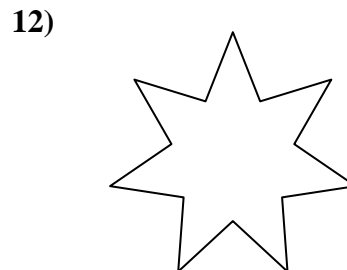
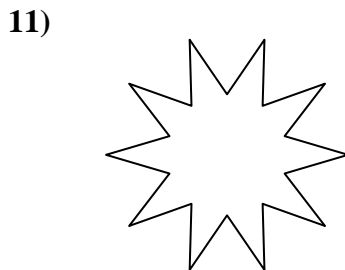
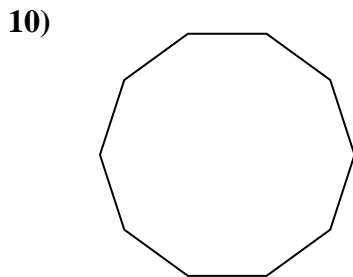
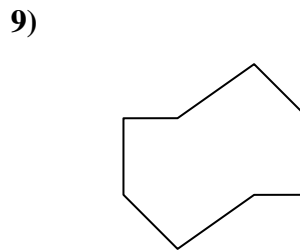
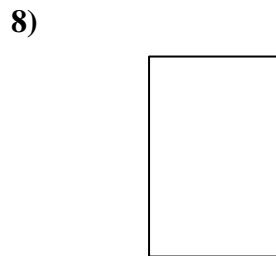
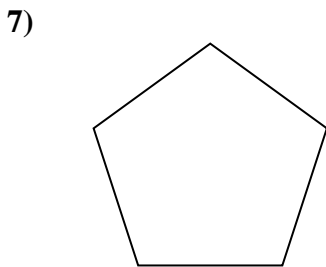
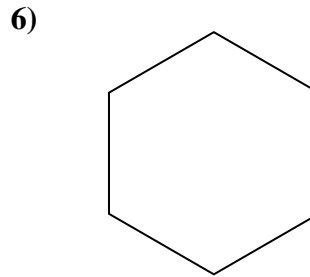

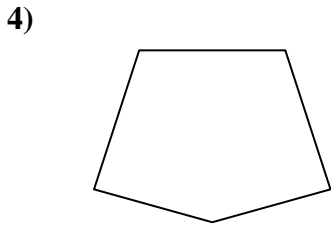
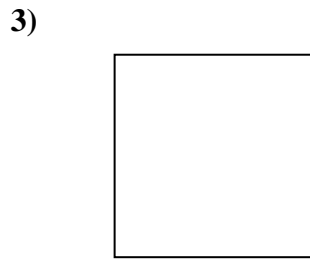
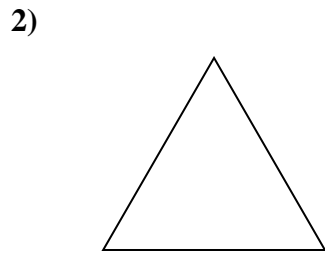
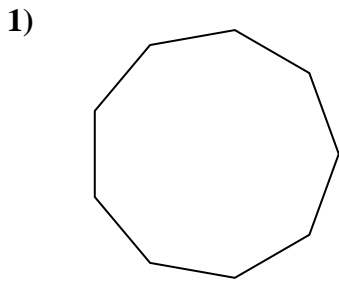
14. Irregular

15. Regular



Determine if the shape shown is a regular shape or an irregular shape.

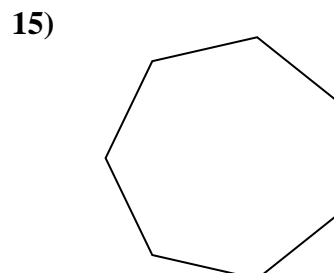
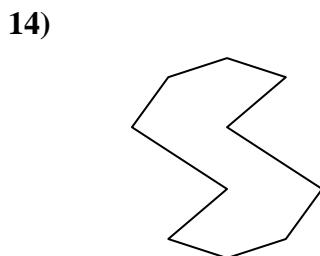
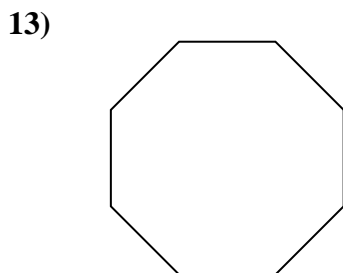

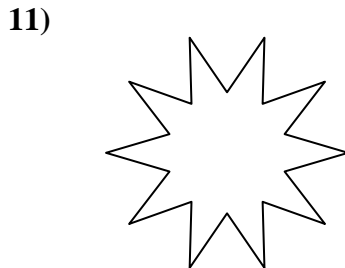
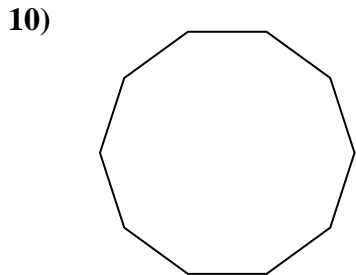
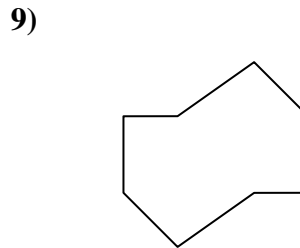
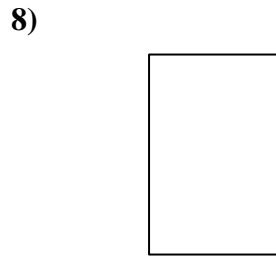
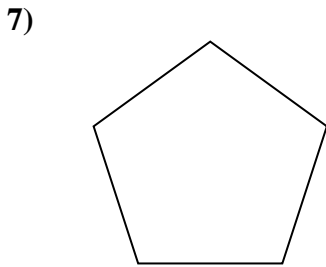
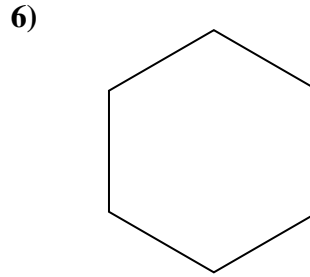
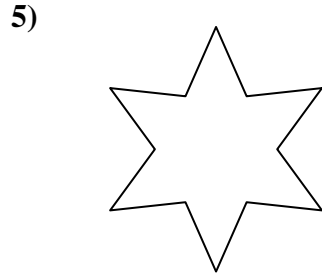
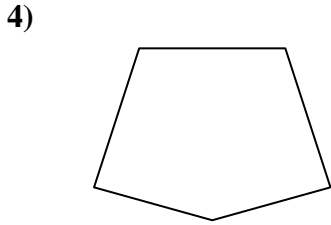
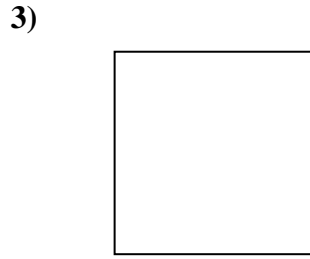
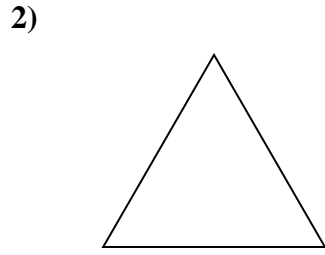
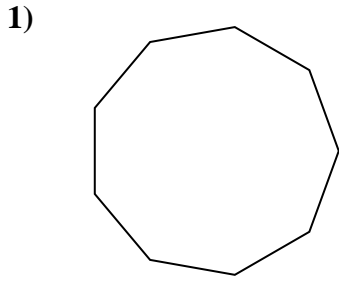
Answers



1. \_\_\_\_\_
2. \_\_\_\_\_
3. \_\_\_\_\_
4. \_\_\_\_\_
5. \_\_\_\_\_
6. \_\_\_\_\_
7. \_\_\_\_\_
8. \_\_\_\_\_
9. \_\_\_\_\_
10. \_\_\_\_\_
11. \_\_\_\_\_
12. \_\_\_\_\_
13. \_\_\_\_\_
14. \_\_\_\_\_
15. \_\_\_\_\_



Determine if the shape shown is a regular shape or an irregular shape.



Answers

1. Regular

2. Regular

3. Regular

4. Irregular

5. Irregular

6. Regular

7. Regular

8. Irregular

9. Irregular

10. Regular

11. Irregular

12. Irregular

13. Regular

14. Irregular

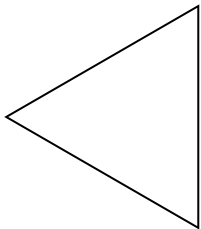
15. Regular



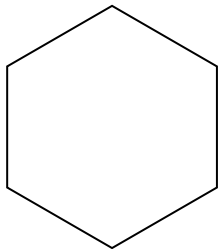
Determine if the shape shown is a regular shape or an irregular shape.

Answers


1)



2)

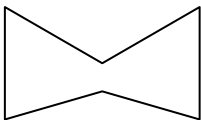


3)




1. \_\_\_\_\_

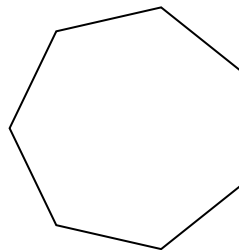
4)



5)



6)



2. \_\_\_\_\_

3. \_\_\_\_\_

4. \_\_\_\_\_

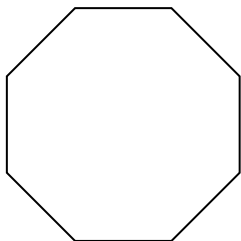
5. \_\_\_\_\_

6. \_\_\_\_\_


7. \_\_\_\_\_

8. \_\_\_\_\_

7)



8)



9)



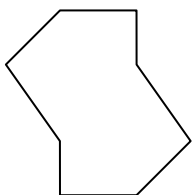
9. \_\_\_\_\_

10. \_\_\_\_\_

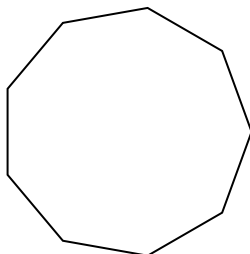
11. \_\_\_\_\_

12. \_\_\_\_\_

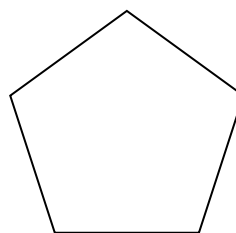
10)



11)



12)




13. \_\_\_\_\_


14. \_\_\_\_\_

15. \_\_\_\_\_

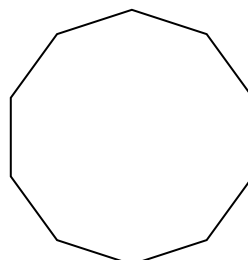
13)



14)



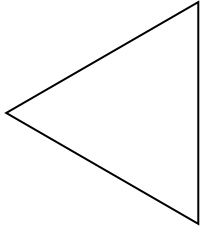
15)



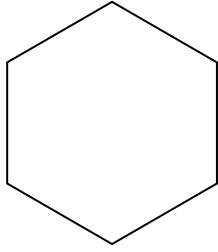


Determine if the shape shown is a regular shape or an irregular shape.


1)



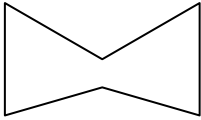
2)




3)



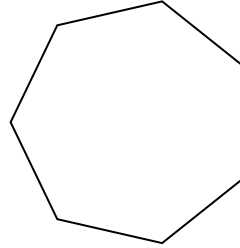
4)



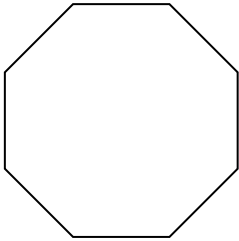
5)




6)



7)



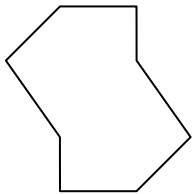
8)



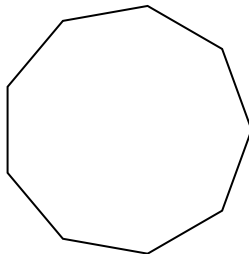
9)



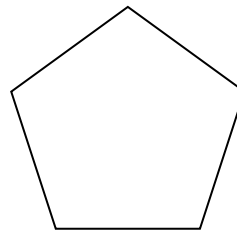
10)




11)




12)



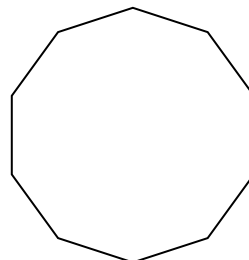
13)



14)



15)



Answers

1. Regular

2. Regular

3. Irregular

4. Irregular

5. Irregular

6. Regular

7. Regular

8. Regular

9. Irregular

10. Irregular

11. Regular

12. Regular

13. Irregular

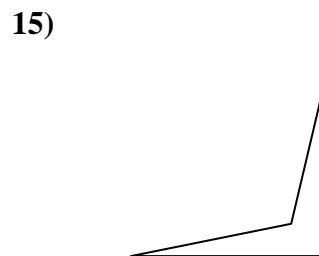
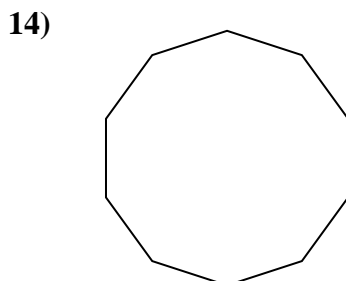
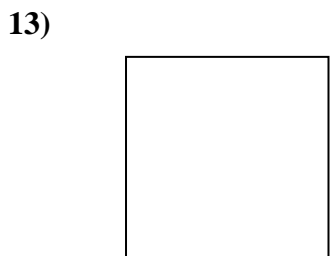
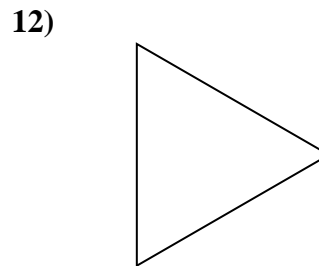
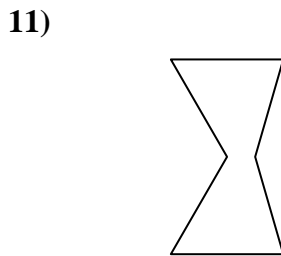
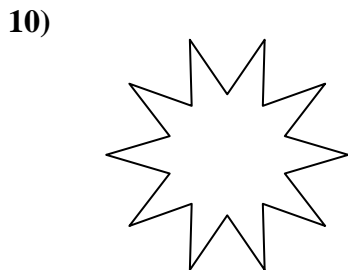
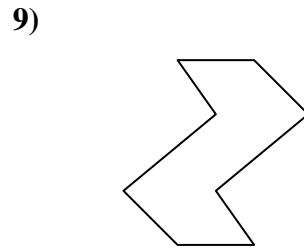
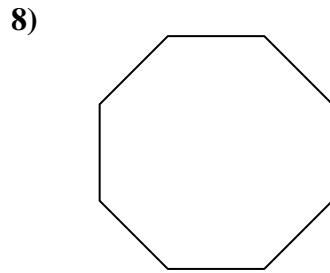
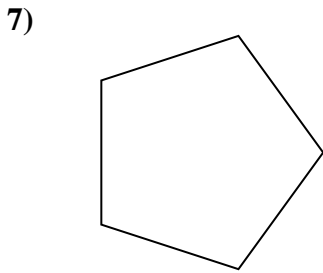
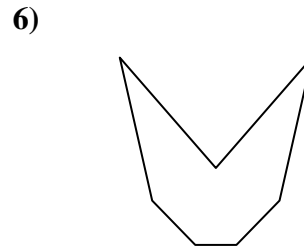
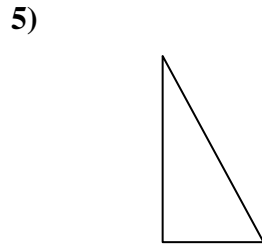
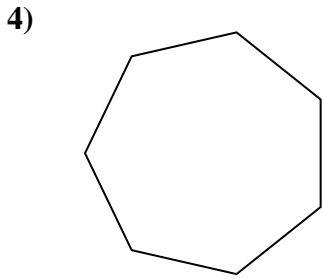
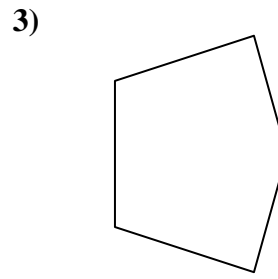
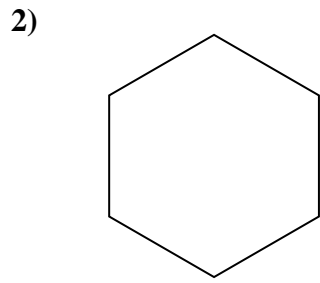
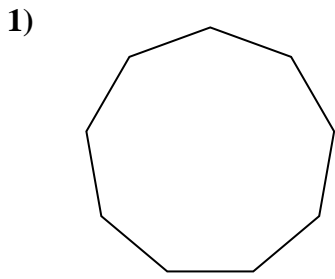
14. Irregular

15. Regular



Determine if the shape shown is a regular shape or an irregular shape.

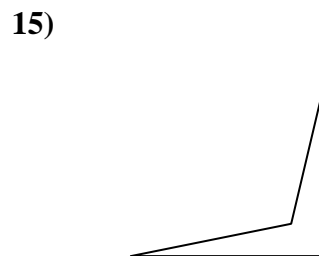
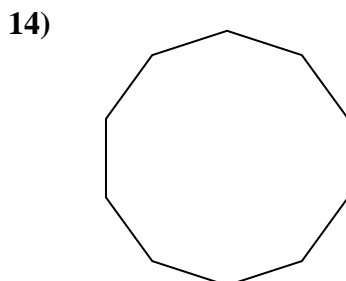
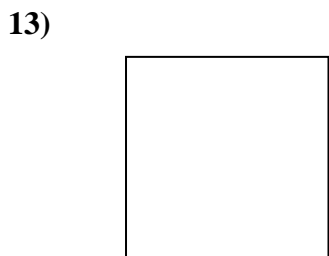
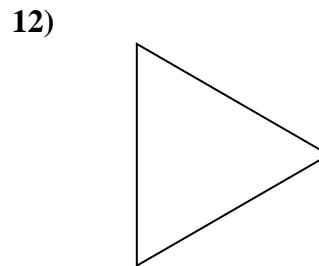
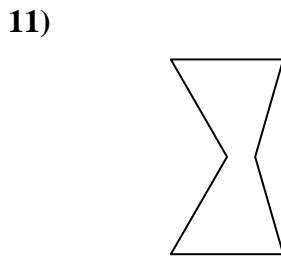
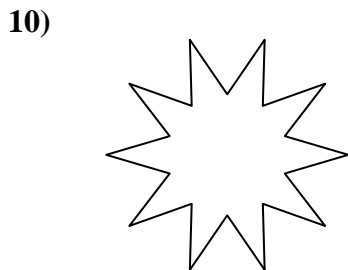
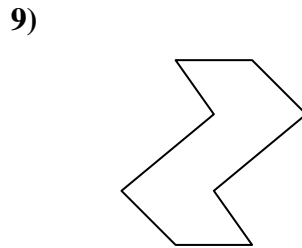
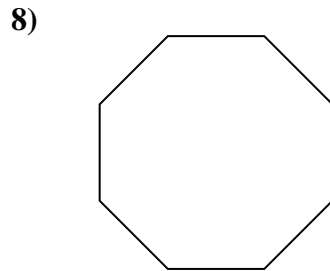
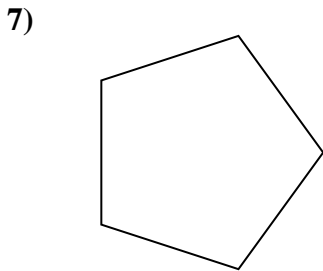
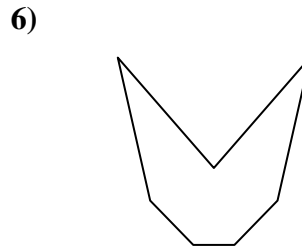
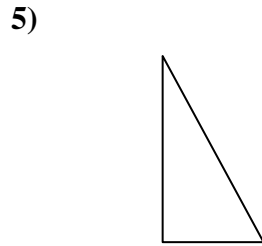
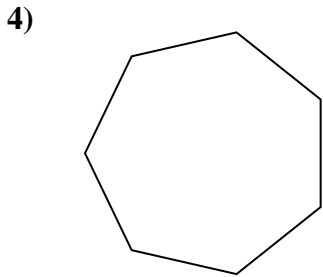
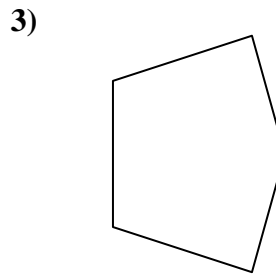
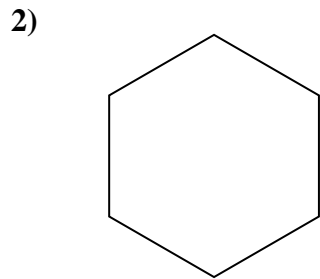
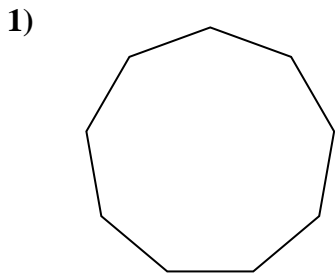
Answers



1. \_\_\_\_\_
2. \_\_\_\_\_
3. \_\_\_\_\_
4. \_\_\_\_\_
5. \_\_\_\_\_
6. \_\_\_\_\_
7. \_\_\_\_\_
8. \_\_\_\_\_
9. \_\_\_\_\_
10. \_\_\_\_\_
11. \_\_\_\_\_
12. \_\_\_\_\_
13. \_\_\_\_\_
14. \_\_\_\_\_
15. \_\_\_\_\_



Determine if the shape shown is a regular shape or an irregular shape.



Answers

1. Regular

2. Regular

3. Irregular

4. Regular

5. Irregular

6. Irregular

7. Regular

8. Regular

9. Irregular

10. Irregular

11. Irregular

12. Regular

13. Regular

14. Regular

15. Irregular

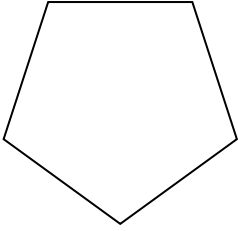




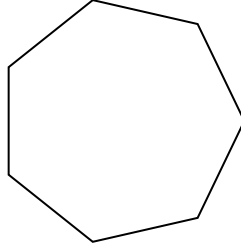
Determine if the shape shown is a regular shape or an irregular shape.

Answers

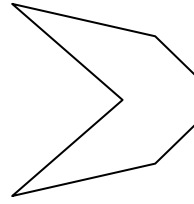
1)



2)




3)

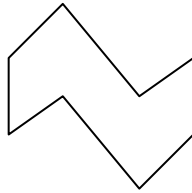


1. \_\_\_\_\_

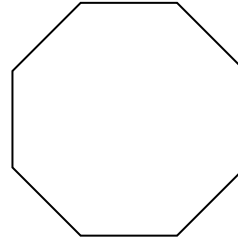
4)



5)

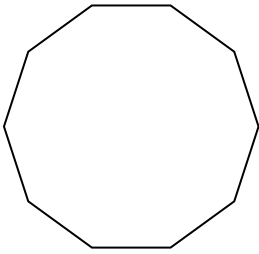


6)

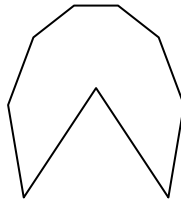


2. \_\_\_\_\_

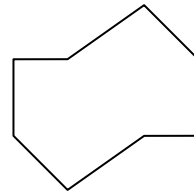
7)



8)

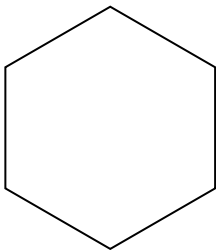


9)

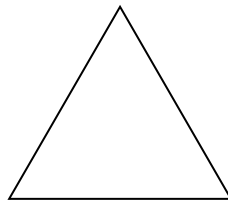


3. \_\_\_\_\_

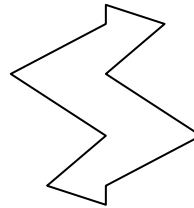
10)



11)




12)

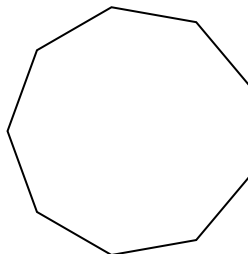


4. \_\_\_\_\_


13)



14)



15)



5. \_\_\_\_\_

6. \_\_\_\_\_

7. \_\_\_\_\_

8. \_\_\_\_\_

9. \_\_\_\_\_

10. \_\_\_\_\_

11. \_\_\_\_\_

12. \_\_\_\_\_


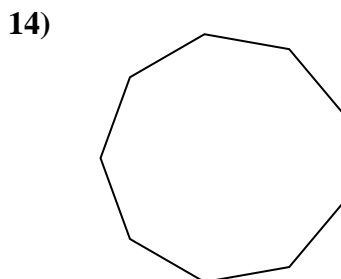
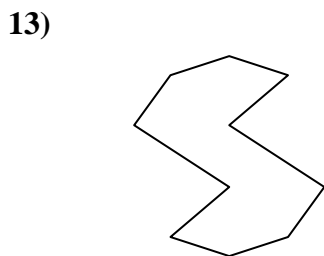
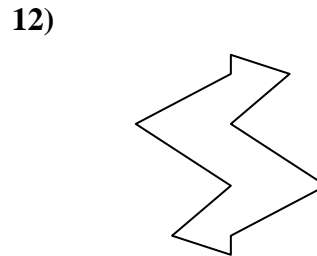
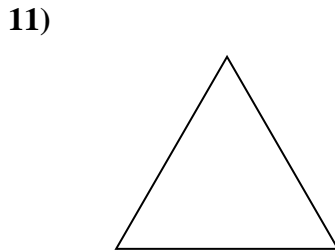
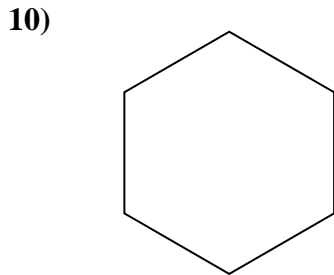
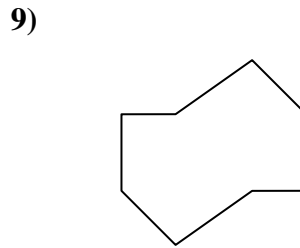
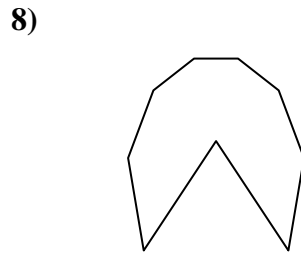
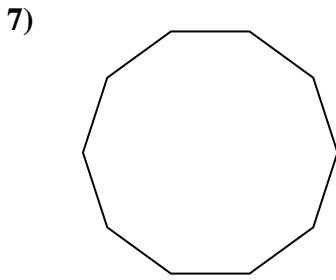
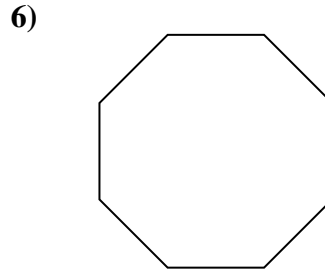
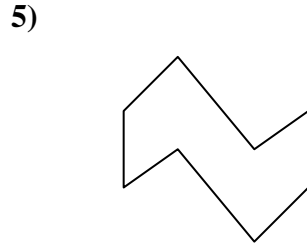
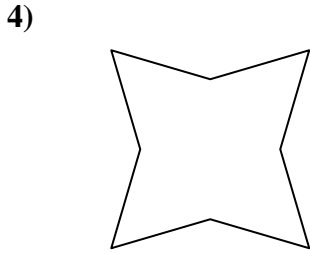
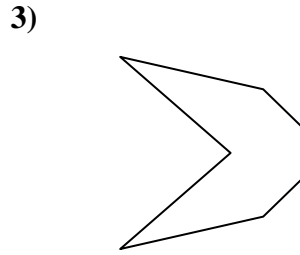
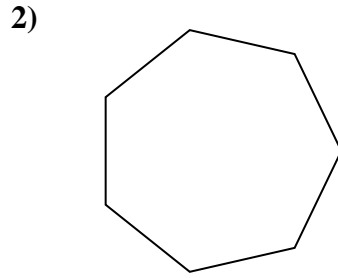
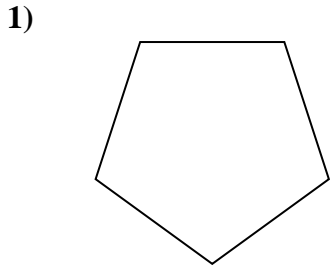
13. \_\_\_\_\_

14. \_\_\_\_\_

15. \_\_\_\_\_



Determine if the shape shown is a regular shape or an irregular shape.



Answers

1. Regular

2. Regular

3. Irregular

4. Irregular

5. Irregular

6. Regular

7. Regular

8. Irregular

9. Irregular

10. Regular

11. Regular

12. Irregular

13. Irregular

14. Regular

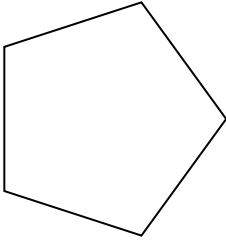
15. Irregular



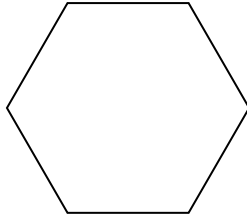
Determine if the shape shown is a regular shape or an irregular shape.

Answers

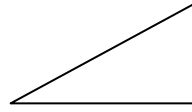
1)



2)



3)



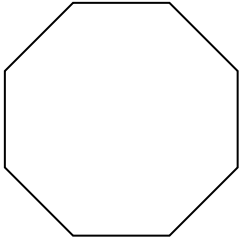
1. \_\_\_\_\_

2. \_\_\_\_\_

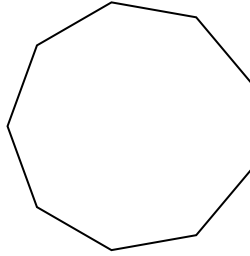
3. \_\_\_\_\_

4. \_\_\_\_\_

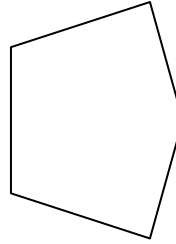
4)



5)



6)



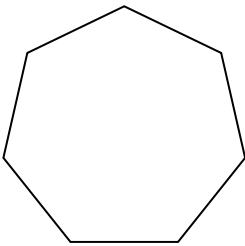
5. \_\_\_\_\_

6. \_\_\_\_\_

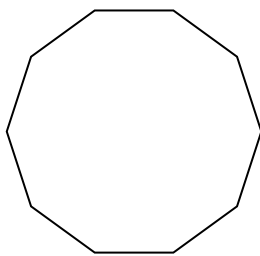
7. \_\_\_\_\_

8. \_\_\_\_\_

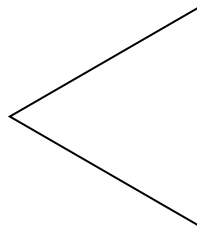
7)



8)



9)




9. \_\_\_\_\_

10. \_\_\_\_\_


11. \_\_\_\_\_

12. \_\_\_\_\_

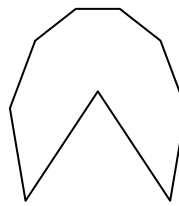
10)



11)



12)




13. \_\_\_\_\_


14. \_\_\_\_\_

15. \_\_\_\_\_

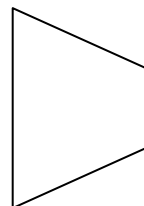
13)



14)



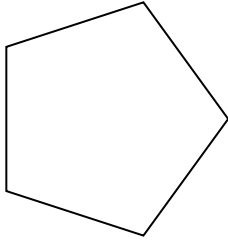
15)



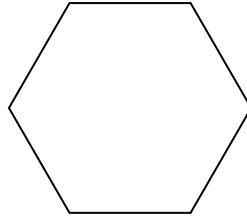


Determine if the shape shown is a regular shape or an irregular shape.

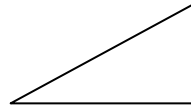
1)



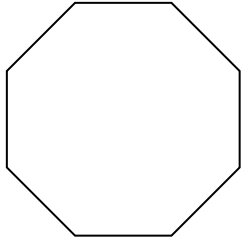
2)



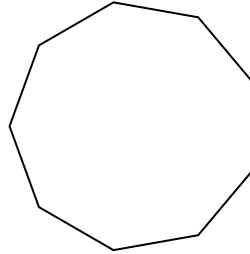
3)



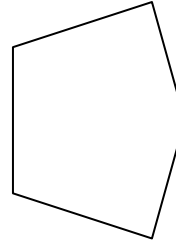
4)



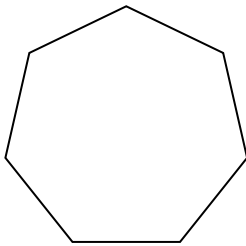
5)



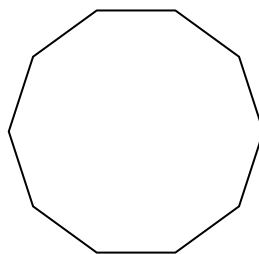
6)



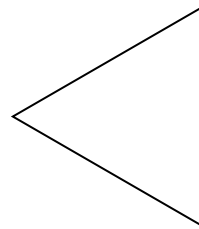
7)




8)




9)



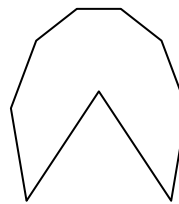
10)




11)




12)



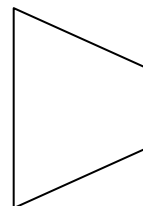
13)



14)



15)



Answers

1. Regular

2. Regular

3. Irregular

4. Regular

5. Regular

6. Irregular

7. Regular

8. Regular

9. Regular

10. Irregular

11. Regular

12. Irregular

13. Irregular

14. Irregular

15. Irregular