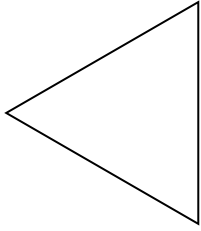




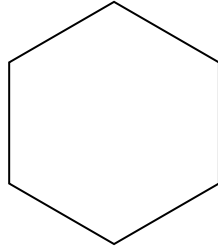
Determine if the shape shown is a regular shape or an irregular shape.

Answers


1)



2)

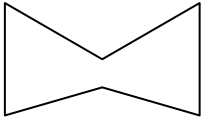


3)




1. \_\_\_\_\_

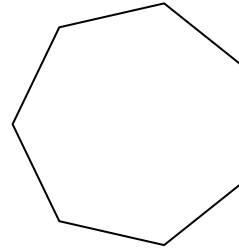
4)



5)



6)



2. \_\_\_\_\_

3. \_\_\_\_\_

4. \_\_\_\_\_

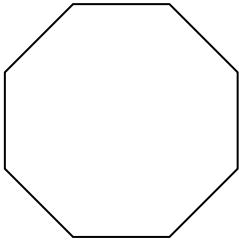
5. \_\_\_\_\_

6. \_\_\_\_\_


7. \_\_\_\_\_

8. \_\_\_\_\_

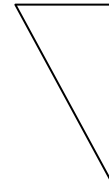
7)



8)



9)



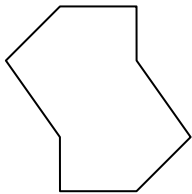
9. \_\_\_\_\_

10. \_\_\_\_\_

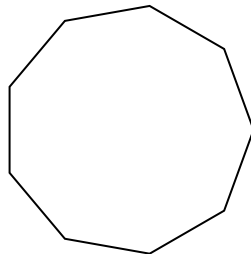
11. \_\_\_\_\_

12. \_\_\_\_\_

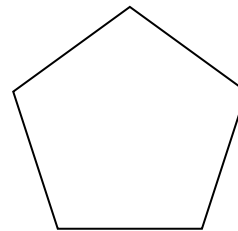
10)



11)



12)




13. \_\_\_\_\_


14. \_\_\_\_\_

15. \_\_\_\_\_

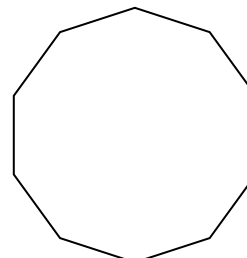
13)



14)



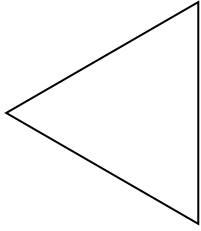
15)



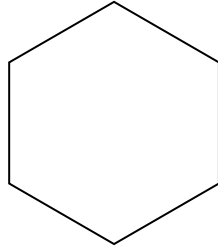


Determine if the shape shown is a regular shape or an irregular shape.


1)



2)



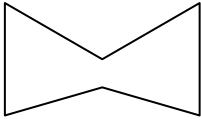
3)




Answers

1. Regular

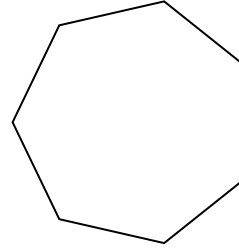
4)



5)



6)



2. Regular

3. Irregular

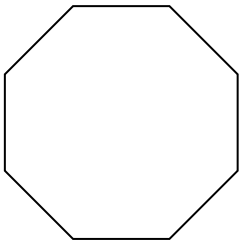
4. Irregular

5. Irregular


6. Regular

7. Regular

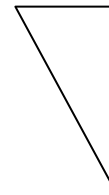
7)



8)



9)



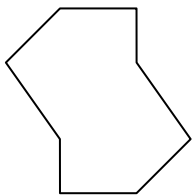
8. Regular

9. Irregular

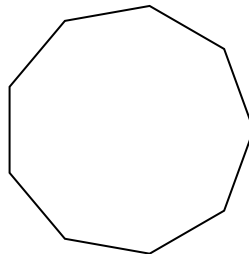
10. Irregular

11. Regular

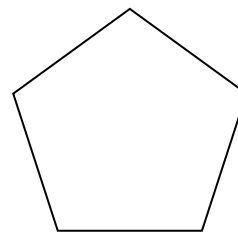
10)



11)



12)




12. Regular


13. Irregular

14. Irregular

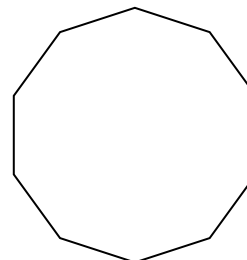
13)



14)



15)



15. Regular