



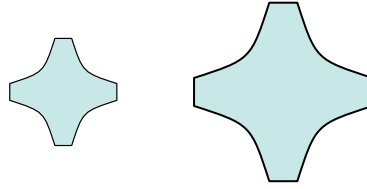
Determine if the shapes shown are 'similar', 'congruent' or 'neither'.

Answers

1)

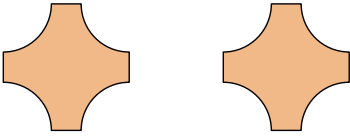


2)

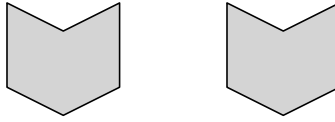


1. _____

3)



4)



2. _____

5)

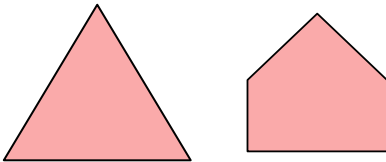


6)




3. _____

7)

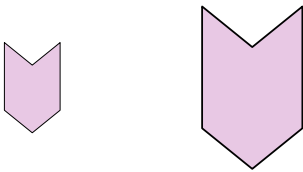


8)

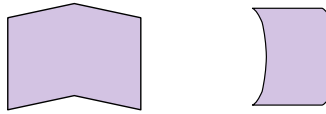


4. _____

9)

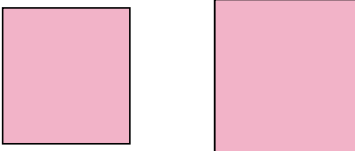


10)

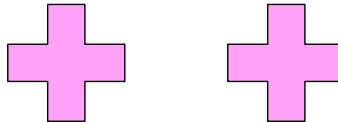


5. _____

11)



12)

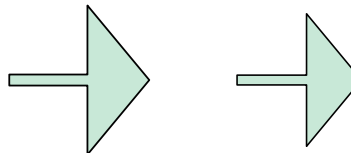


6. _____

13)

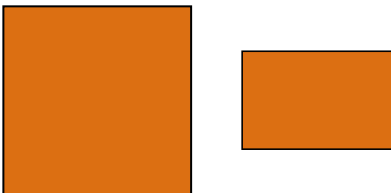


14)

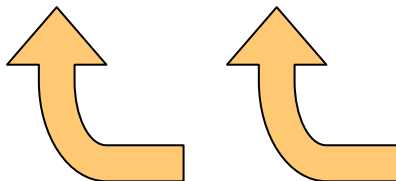


7. _____

15)



16)



8. _____

9. _____

10. _____

11. _____

12. _____

13. _____

14. _____

15. _____

16. _____

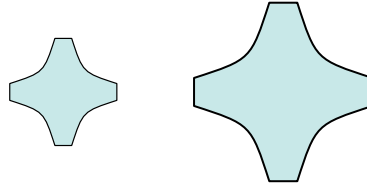


Determine if the shapes shown are 'similar', 'congruent' or 'neither'.

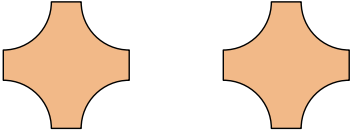
1)



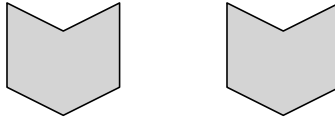
2)



3)



4)



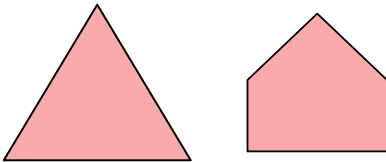
5)




6)



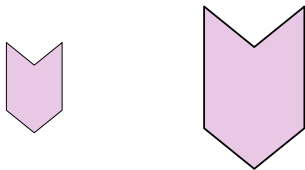
7)



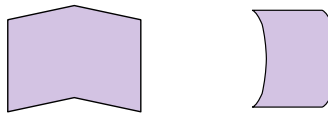
8)



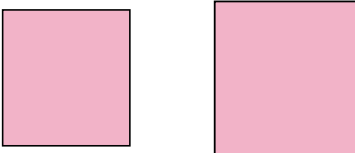
9)



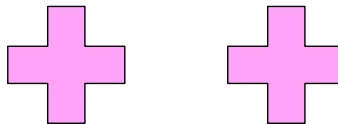
10)



11)



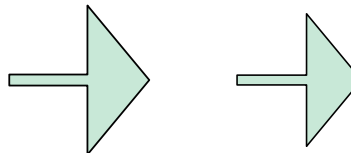
12)



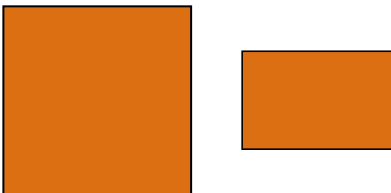
13)



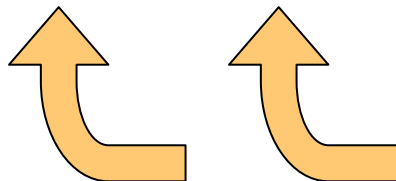
14)



15)



16)



Answers

1. congruent

2. similar

3. congruent

4. congruent

5. neither

6. neither

7. neither

8. neither

9. similar

10. neither

11. similar

12. congruent

13. congruent

14. similar

15. neither

16. congruent