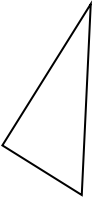




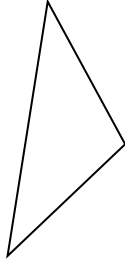
Determine if the figure shown is a 'Triangle', 'Square', 'Rectangle', 'Hexagon' or 'Other'.

Answers

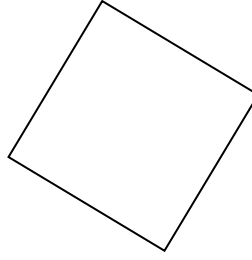
1)



2)



3)



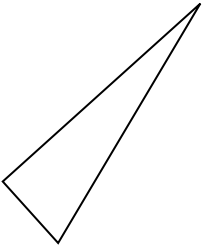
1. _____

2. _____

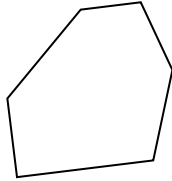
3. _____

4. _____

4)



5)



6)



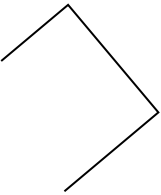
5. _____

6. _____


7. _____

8. _____

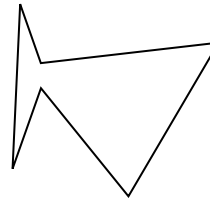
7)



8)



9)




9. _____

10. _____

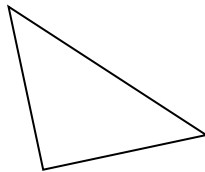
11. _____

12. _____

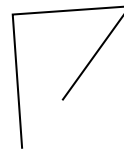
10)



11)



12)

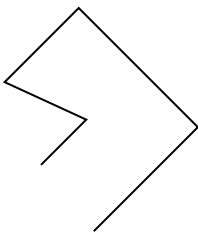


13. _____

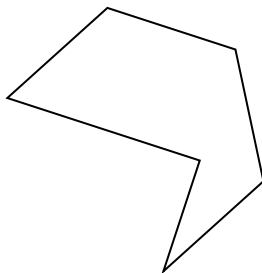
14. _____

15. _____

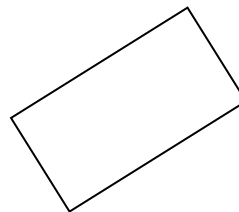
13)



14)

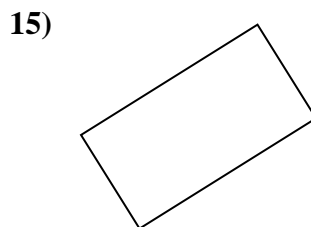
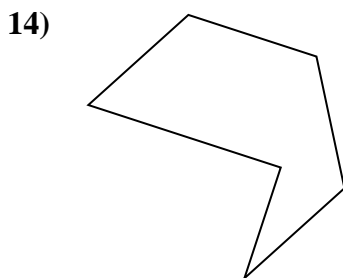
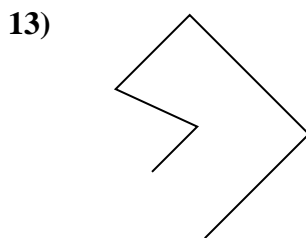
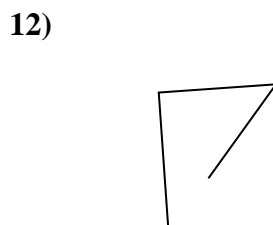
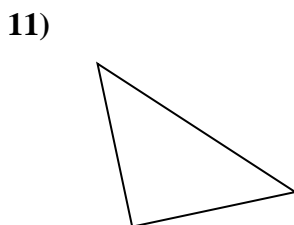
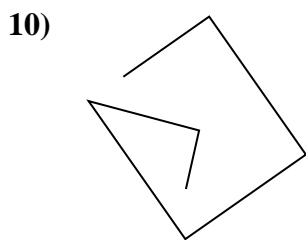
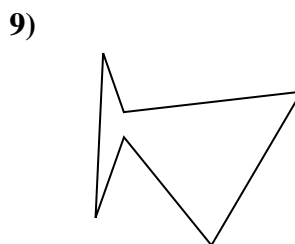
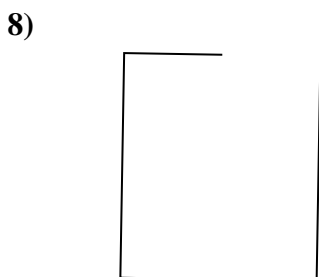
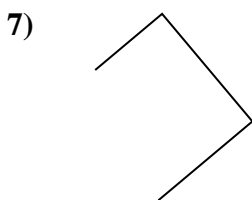
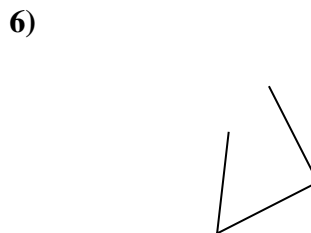
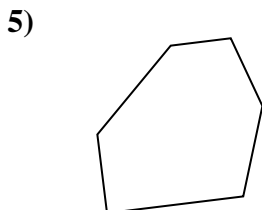
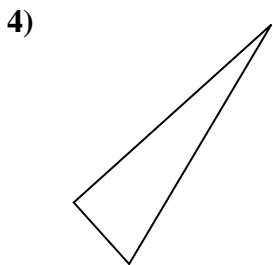
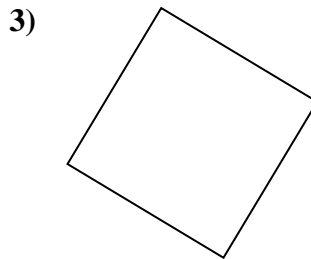
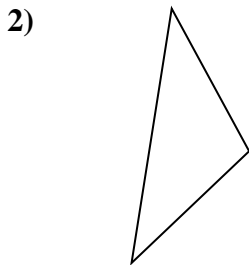
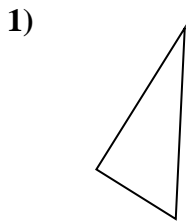


15)





Determine if the figure shown is a 'Triangle', 'Square', 'Rectangle', 'Hexagon' or 'Other'.



Answers

1. triangle

2. triangle

3. square

4. triangle

5. hexagon

6. other

7. other

8. other

9. hexagon

10. other

11. triangle

12. other

13. other

14. hexagon

15. rectangle