

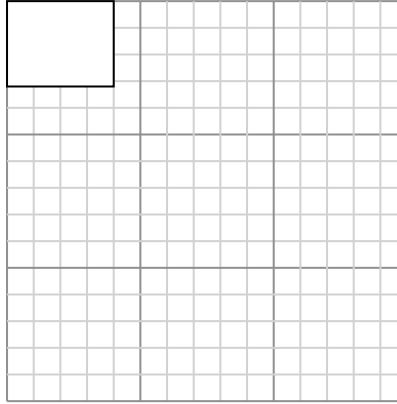
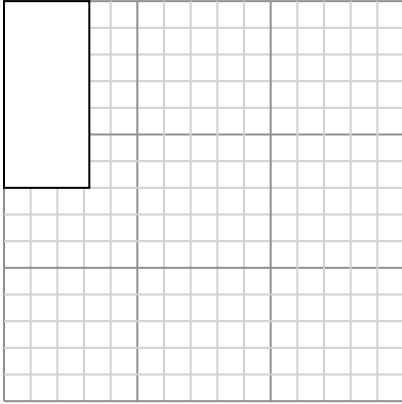


Draw each rectangle to the scale shown and determine the new dimensions.

Answers

- 1) The rectangle below has the dimensions:
 3.2×7

- 2) The rectangle below has the dimensions:
 4×3.2

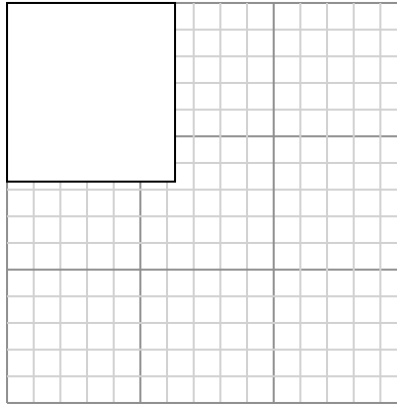
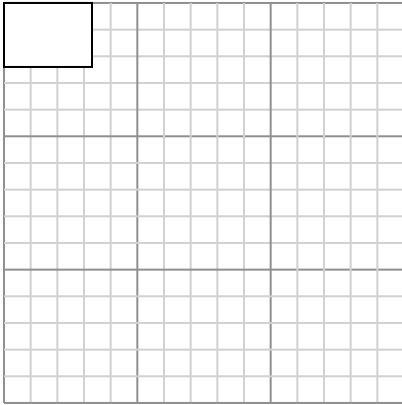


Create another rectangle that is scaled to 4 times the size of the current rectangle.

Create another rectangle that is scaled to 9 times the size of the current rectangle.

- 3) The rectangle below has the dimensions:
 3.3×2.4

- 4) The rectangle below has the dimensions:
 6.3×6.7

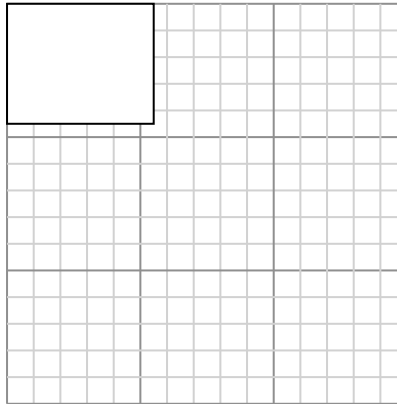



Create another rectangle that is scaled to 9 times the size of the current rectangle.

Create another rectangle that is scaled to 4 times the size of the current rectangle.

- 5) The rectangle below has the dimensions:
 4.4×2

- 6) The rectangle below has the dimensions:
 5.5×4.5



Create another rectangle that is scaled to 9 times the size of the current rectangle.

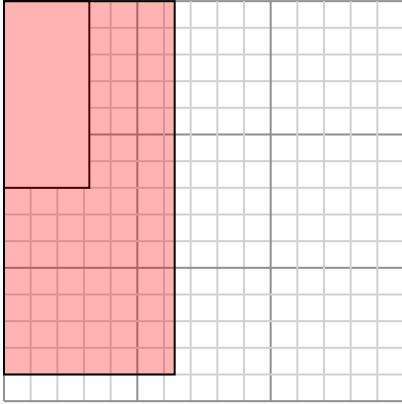
Create another rectangle that is scaled to 4 times the size of the current rectangle.

1. _____
2. _____
3. _____
4. _____
5. _____
6. _____



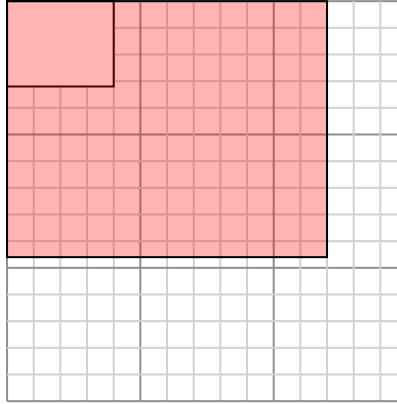
Draw each rectangle to the scale shown and determine the new dimensions.

- 1) The rectangle below has the dimensions:
 3.2×7



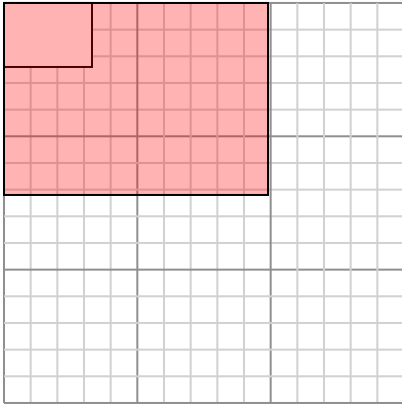
Create another rectangle that is scaled to 4 times the size of the current rectangle.

- 2) The rectangle below has the dimensions:
 4×3.2



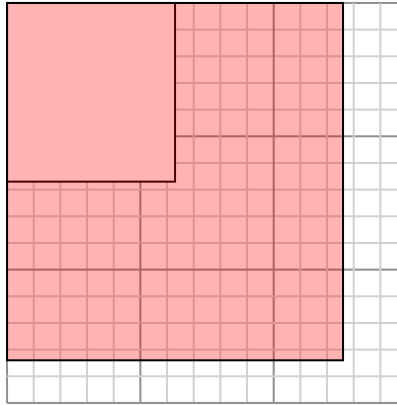
Create another rectangle that is scaled to 9 times the size of the current rectangle.

- 3) The rectangle below has the dimensions:
 3.3×2.4



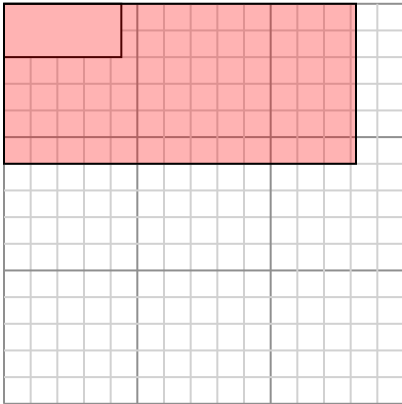
Create another rectangle that is scaled to 9 times the size of the current rectangle.

- 4) The rectangle below has the dimensions:
 6.3×6.7



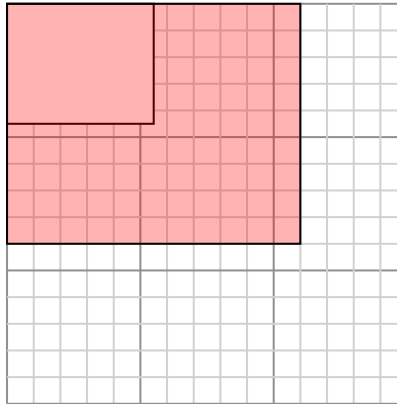
Create another rectangle that is scaled to 4 times the size of the current rectangle.

- 5) The rectangle below has the dimensions:
 4.4×2



Create another rectangle that is scaled to 9 times the size of the current rectangle.

- 6) The rectangle below has the dimensions:
 5.5×4.5



Create another rectangle that is scaled to 4 times the size of the current rectangle.

Answers

1. **6.4×14**

2. **12×9.6**

3. **9.9×7.2**

4. **12.6×13.4**

5. **13.2×6**

6. **11×9**