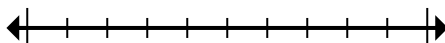




Mark the location (approximate) on the numberline and then solve.

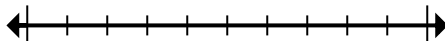
Answers

1) Round 45,381,768 to the nearest hundred thousand.



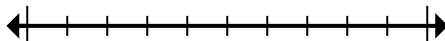
1. _____

2) Round 79,869 to the nearest ten thousand.



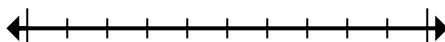
2. _____

3) Round 101,525 to the nearest ten thousand.



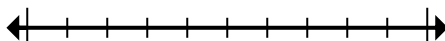
3. _____

4) Round 37,018 to the nearest thousand.



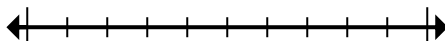
4. _____

5) Round 4,376 to the nearest thousand.



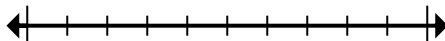
5. _____

6) Round 360,946 to the nearest thousand.



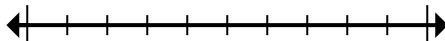
6. _____

7) Round 9,545,950 to the nearest hundred.



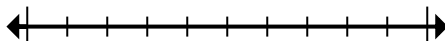
7. _____

8) Round 49,898,085 to the nearest hundred thousand.



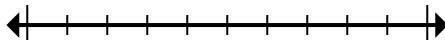
8. _____

9) Round 1,552 to the nearest thousand.



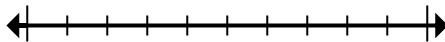
9. _____

10) Round 57,392 to the nearest ten thousand.



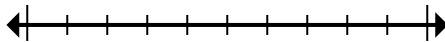
10. _____

11) Round 544,862 to the nearest hundred thousand.



11. _____

12) Round 3,268,593 to the nearest hundred.

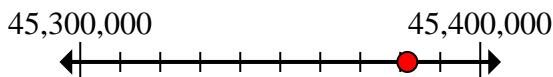


12. _____

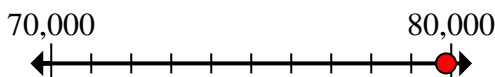


Mark the location (approximate) on the numberline and then solve.

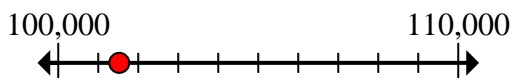
- 1) Round 45,381,768 to the nearest hundred thousand.



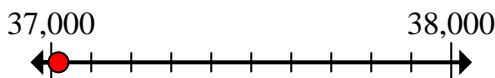
- 2) Round 79,869 to the nearest ten thousand.



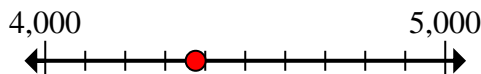
- 3) Round 101,525 to the nearest ten thousand.



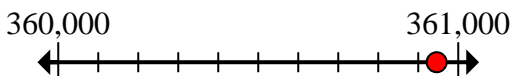
- 4) Round 37,018 to the nearest thousand.



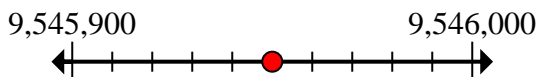
- 5) Round 4,376 to the nearest thousand.



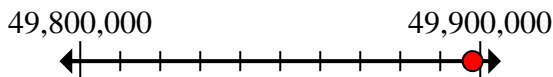
- 6) Round 360,946 to the nearest thousand.



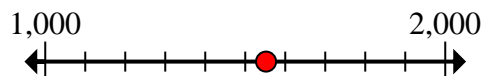
- 7) Round 9,545,950 to the nearest hundred.



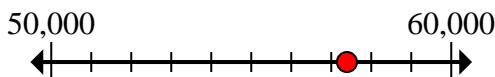
- 8) Round 49,898,085 to the nearest hundred thousand.



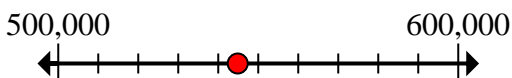
- 9) Round 1,552 to the nearest thousand.



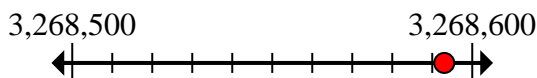
- 10) Round 57,392 to the nearest ten thousand.



- 11) Round 544,862 to the nearest hundred thousand.



- 12) Round 3,268,593 to the nearest hundred.

**Answers**1. **45,400,000**2. **80,000**3. **100,000**4. **37,000**5. **4,000**6. **361,000**7. **9,546,000**8. **49,900,000**9. **2,000**10. **60,000**11. **500,000**12. **3,268,600**



Mark the location (approximate) on the numberline and then solve.

Answers

60,000	4,000	3,268,600	2,000
49,900,000	9,546,000	361,000	45,400,000
37,000	500,000	100,000	80,000

1) Round 45,381,768 to the nearest hundred thousand.



2) Round 79,869 to the nearest ten thousand.



3) Round 101,525 to the nearest ten thousand.



4) Round 37,018 to the nearest thousand.



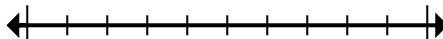
5) Round 4,376 to the nearest thousand.



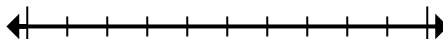
6) Round 360,946 to the nearest thousand.



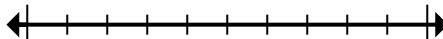
7) Round 9,545,950 to the nearest hundred.



8) Round 49,898,085 to the nearest hundred thousand.



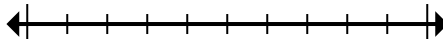
9) Round 1,552 to the nearest thousand.



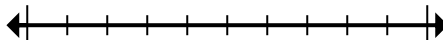
10) Round 57,392 to the nearest ten thousand.



11) Round 544,862 to the nearest hundred thousand.



12) Round 3,268,593 to the nearest hundred.



1. _____
2. _____
3. _____
4. _____
5. _____
6. _____
7. _____
8. _____
9. _____
10. _____
11. _____
12. _____