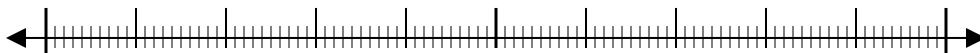




Use the numberlines to round each number to the nearest 100.

Ex)

22,128



Ex.

22,100

1)

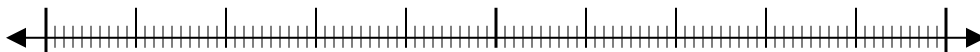
7,798



1. \_\_\_\_\_

2)

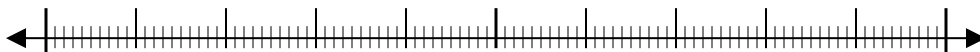
73,791



2. \_\_\_\_\_

3)

48,807



3. \_\_\_\_\_

4)

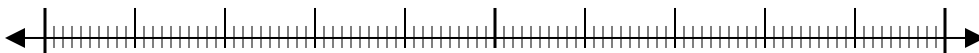
1,381



4. \_\_\_\_\_

5)

746



5. \_\_\_\_\_

6)

140



6. \_\_\_\_\_

7)

904



7. \_\_\_\_\_

8)

93,445



8. \_\_\_\_\_

9)

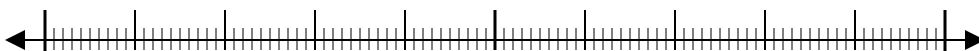
4,176



9. \_\_\_\_\_

10)

369

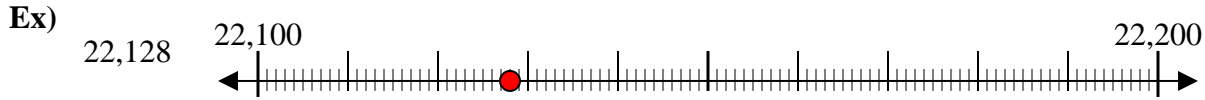


10. \_\_\_\_\_

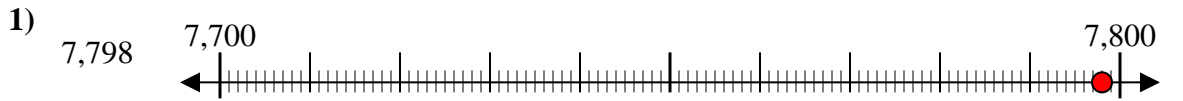
Answers



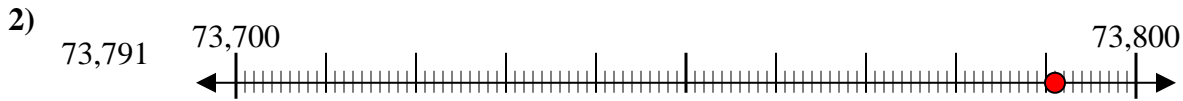
Use the numberlines to round each number to the nearest 100.



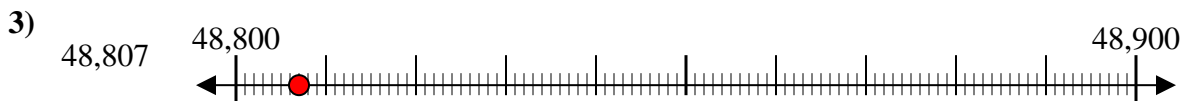
Answers  
Ex. 22,100



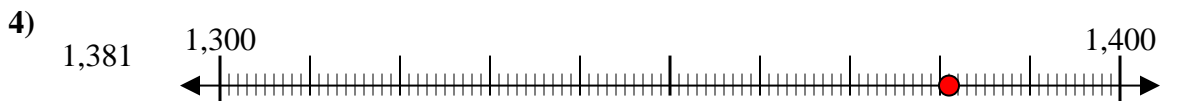
1. 7,800



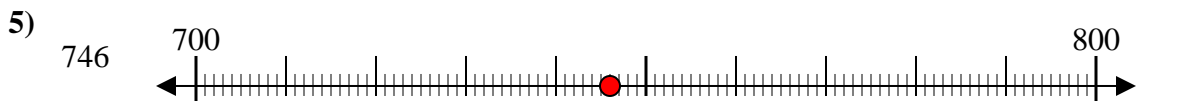
2. 73,800



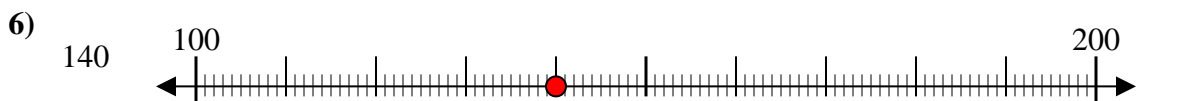
3. 48,800



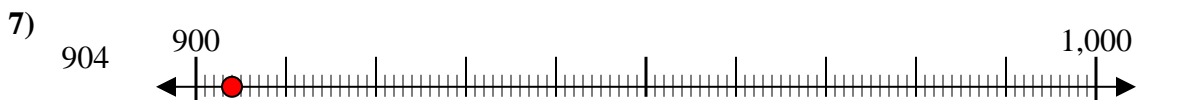
4. 1,400



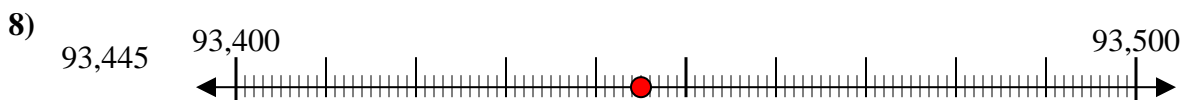
5. 700



6. 100



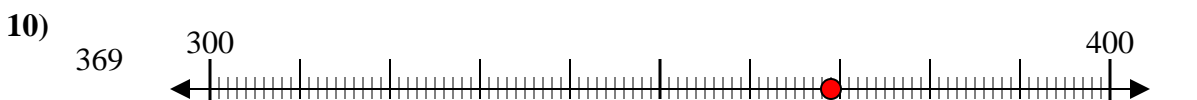
7. 900



8. 93,400



9. 4,200



10. 400