



Use the double numberline to solve the problems.

Answers

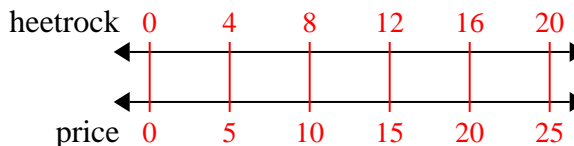
- 1) A builder could get 4 sheets of sheetrock for \$5. If he bought 20 sheets, how much money would he have spent?
- heetrock ←————→  
price ←————→
- 2) For every 4 cans Billy collected for recycling he earned 2 cents. After he collected 16 cans, how much money would he have earned?
- cans ←————→  
money ←————→
- 3) On her MP3 player for every 5 pop song Sarah had she also had 3 country song. If she has 25 pop songs on her MP3 player, how many country songs does she have?
- pop ←————→  
country ←————→
- 4) A sloppy joe restaurant gave 10 napkins for every 7 items ordered. If someone bought 70 items, how many napkins should they get?
- item ←————→  
napkins ←————→
- 5) A recipe call for 7 teaspoons of seasoning for every 10 batches of chicken. If you have 100 batches of chicken, how many teaspoons of seasoning will you need?
- chicken ←————→  
easoning ←————→
- 6) The ratio of boys to girls at the park was 2 to 8. If there were 4 boys, how many girls were there?
- boys ←————→  
girls ←————→
- 7) A movie theater put 6 cups of oil for every 9 batches of popcorn they made. After they had made 63 batches of popcorn, how much oil would they have used?
- popcorn ←————→  
oil ←————→
- 8) In a video game for every 6 enemies defeat, you earned 3 points. If you defeated 48 enemies, how many points would you have earned?
- enemies ←————→  
points ←————→
1. \_\_\_\_\_  
2. \_\_\_\_\_  
3. \_\_\_\_\_  
4. \_\_\_\_\_  
5. \_\_\_\_\_  
6. \_\_\_\_\_  
7. \_\_\_\_\_  
8. \_\_\_\_\_



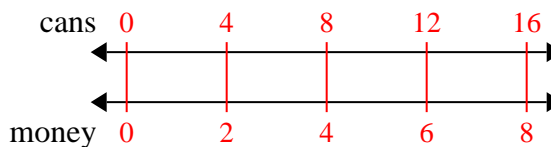
Use the double numberline to solve the problems.

Answers

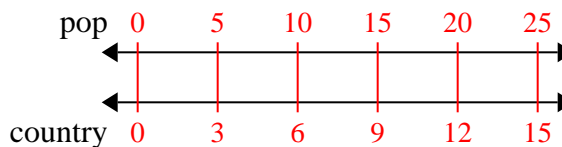
- 1) A builder could get 4 sheets of sheetrock for \$5. If he bought 20 sheets, how much money would he have spent?

1. 25

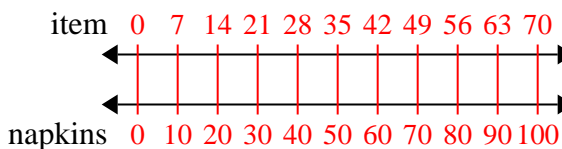
- 2) For every 4 cans Billy collected for recycling he earned 2 cents. After he collected 16 cans, how much money would he have earned?

2. 8

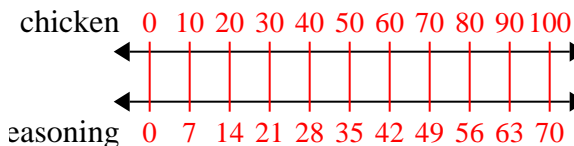
- 3) On her MP3 player for every 5 pop song Sarah had she also had 3 country song. If she has 25 pop songs on her MP3 player, how many country songs does she have?

3. 154. 1005. 706. 167. 42

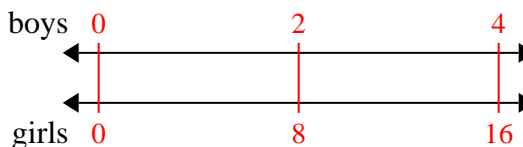
- 4) A sloppy joe restaurant gave 10 napkins for every 7 items ordered. If someone bought 70 items, how many napkins should they get?

8. 24

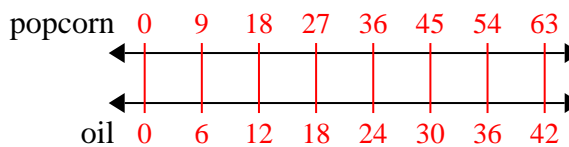
- 5) A recipe call for 7 teaspoons of seasoning for every 10 batches of chicken. If you have 100 batches of chicken, how many teaspoons of seasoning will you need?



- 6) The ratio of boys to girls at the park was 2 to 8. If there were 4 boys, how many girls were there?



- 7) A movie theater put 6 cups of oil for every 9 batches of popcorn they made. After they had made 63 batches of popcorn, how much oil would they have used?



- 8) In a video game for every 6 enemies defeat, you earned 3 points. If you defeated 48 enemies, how many points would you have earned?

