

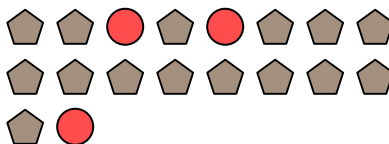


Solve each problem.

Ex) What is the ratio of stars to pentagons?



1) What is the ratio of circles to pentagons?



Answers

Ex. **6:3**

1. _____

2. _____

3. _____

4. _____

5. _____

6. _____

7. _____


8. _____

9. _____


10. _____

11. _____

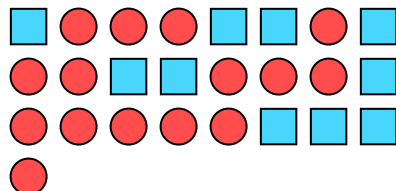
2) What is the ratio of circles to moons?



3) What is the ratio of triangles to moons?



4) What is the ratio of circles to squares?



5) What is the ratio of hearts to stars?



6) What is the ratio of circles to triangles?




7) What is the ratio of hearts to pentagons?




8) What is the ratio of pentagons to stars?




9) What is the ratio of stars to triangles?



10) What is the ratio of squares to moons?



11) What is the ratio of stars to circles?



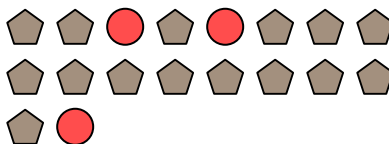


Solve each problem.

Ex) What is the ratio of stars to pentagons?




1) What is the ratio of circles to pentagons?




Answers

Ex. 6:3

2) What is the ratio of circles to moons?



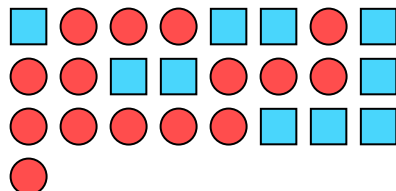
3) What is the ratio of triangles to moons?



1. 3:15

2. 4:5

4) What is the ratio of circles to squares?



5) What is the ratio of hearts to stars?



3. 4:13

4. 15:10

5. 2:13

6. 3:4

6) What is the ratio of circles to triangles?



7) What is the ratio of hearts to pentagons?



7. 5:6

8. 5:4

9. 5:15

10. 8:15

11. 13:6


8) What is the ratio of pentagons to stars?



9) What is the ratio of stars to triangles?



10) What is the ratio of squares to moons?



11) What is the ratio of stars to circles?

