



Solve each problem.

Ex) What is the ratio of triangles to pentagons?



1) What is the ratio of stars to moons?

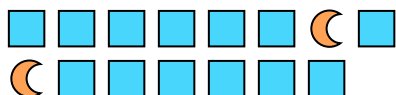


Ex. **4:12**


1. _____

2. _____

2) What is the ratio of moons to squares?



3) What is the ratio of pentagons to moons?



3. _____

4. _____

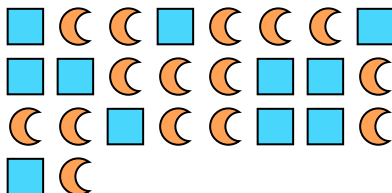
5. _____

6. _____

4) What is the ratio of stars to pentagons?



5) What is the ratio of moons to squares?



7. _____


8. _____

9. _____

6) What is the ratio of stars to circles?




7) What is the ratio of circles to stars?



10. _____

11. _____

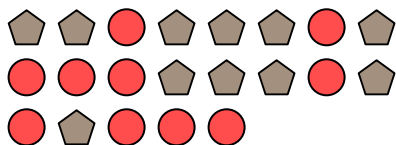
8) What is the ratio of circles to moons?




9) What is the ratio of pentagons to stars?



10) What is the ratio of pentagons to circles?



11) What is the ratio of squares to hearts?



Answers



Solve each problem.

Ex) What is the ratio of triangles to pentagons?



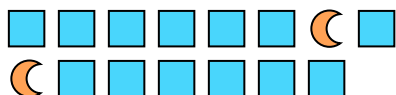
1) What is the ratio of stars to moons?




Answers

Ex. 4:12

2) What is the ratio of moons to squares?



3) What is the ratio of pentagons to moons?



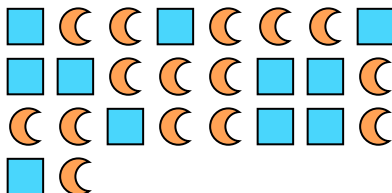
1. 9:12

2. 2:13

4) What is the ratio of stars to pentagons?



5) What is the ratio of moons to squares?



3. 10:13

4. 12:5


5. 15:11

6. 7:9

6) What is the ratio of stars to circles?



7) What is the ratio of circles to stars?



7. 12:7


8. 8:15

9. 7:4

10. 11:10

11. 4:6

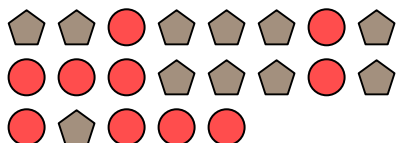
8) What is the ratio of circles to moons?



9) What is the ratio of pentagons to stars?



10) What is the ratio of pentagons to circles?



11) What is the ratio of squares to hearts?

