



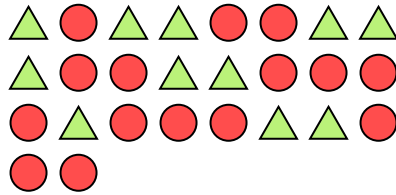
Solve each problem.

Answers

Ex) What is the ratio of triangles to stars?



1) What is the ratio of circles to triangles?



Ex. **3:9**

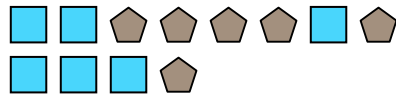
1. _____

2. _____

2) What is the ratio of pentagons to moons?



3) What is the ratio of squares to pentagons?



3. _____

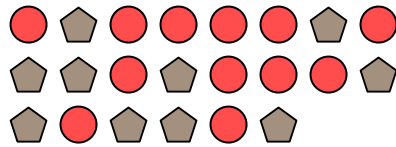
4. _____

5. _____

4) What is the ratio of moons to hearts?



5) What is the ratio of circles to pentagons?

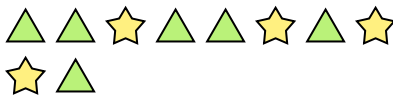


6. _____


7. _____

8. _____

6) What is the ratio of triangles to stars?



7) What is the ratio of hearts to circles?




9. _____


10. _____

11. _____


8) What is the ratio of hearts to circles?



9) What is the ratio of hearts to circles?



10) What is the ratio of squares to moons?



11) What is the ratio of triangles to pentagons?

