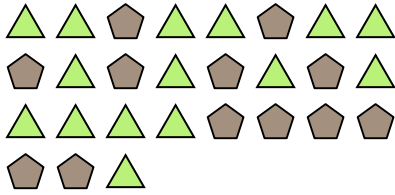





Solve each problem.

Answers

Ex) What is the ratio of pentagons to triangles?



1) What is the ratio of circles to moons?




Ex. **12:15**

2) What is the ratio of stars to squares?



3) What is the ratio of moons to pentagons?



1. _____

4) What is the ratio of hearts to moons?



5) What is the ratio of stars to triangles?




2. _____

6) What is the ratio of moons to stars?



7) What is the ratio of pentagons to hearts?




3. _____

8) What is the ratio of pentagons to stars?



9) What is the ratio of circles to moons?

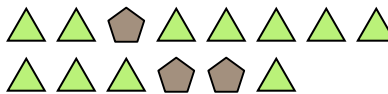


4. _____

10) What is the ratio of stars to moons?



11) What is the ratio of triangles to pentagons?



5. _____

6. _____

7. _____

8. _____

9. _____

10. _____

11. _____

