



Solve each problem using the distributive property of division.

1) $160 \div 4 =$

2) $190 \div 5 =$

3) $592 \div 8 =$

4) $511 \div 7 =$

5) $420 \div 5 =$

6) $360 \div 8 =$

7) $765 \div 9 =$

8) $675 \div 9 =$

9) $224 \div 4 =$

10) $230 \div 5 =$

Answers

1. _____

2. _____

3. _____

4. _____

5. _____

6. _____

7. _____

8. _____

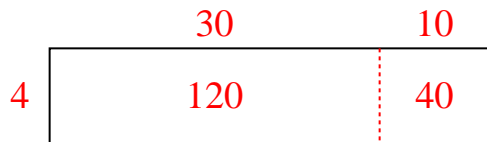
9. _____

10. _____

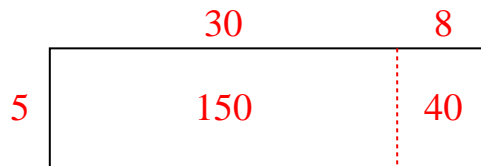


Solve each problem using the distributive property of division.

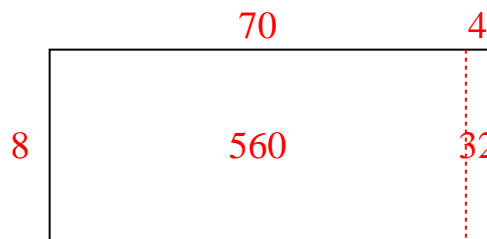
1) $160 \div 4 =$



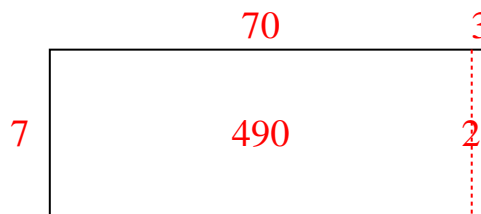
2) $190 \div 5 =$




3) $592 \div 8 =$



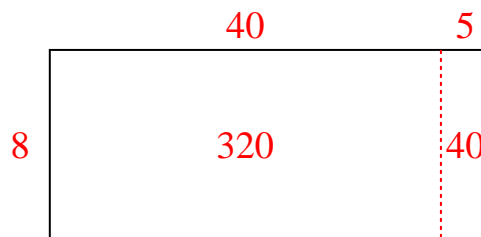
4) $511 \div 7 =$



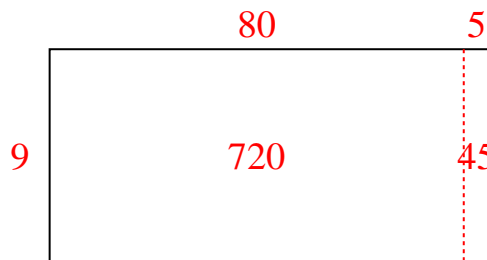
5) $420 \div 5 =$



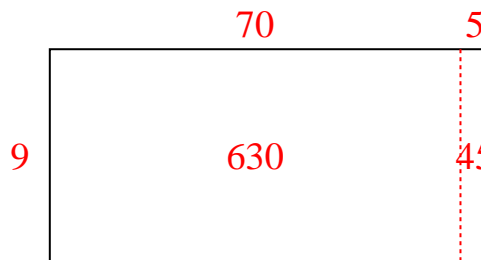
6) $360 \div 8 =$



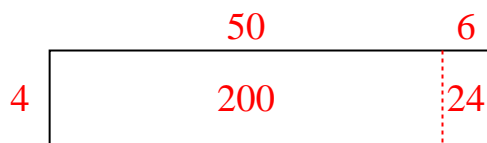
7) $765 \div 9 =$



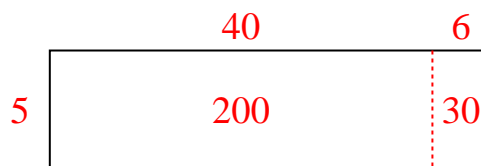
8) $675 \div 9 =$



9) $224 \div 4 =$



10) $230 \div 5 =$

Answers1. **40**2. **38**3. **74**4. **73**5. **84**6. **45**7. **85**8. **75**9. **56**10. **46**



Solve each problem using the distributive property of division.

Answers

1) $370 \div 5 =$

2) $296 \div 8 =$

3) $504 \div 8 =$

4) $420 \div 5 =$

5) $498 \div 6 =$

6) $315 \div 7 =$

7) $560 \div 7 =$

8) $280 \div 7 =$

9) $87 \div 3 =$

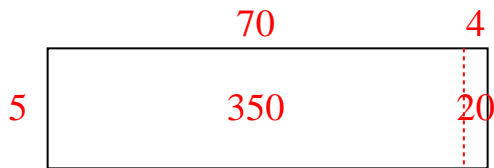
10) $343 \div 7 =$

- 1. _____
- 2. _____
- 3. _____
- 4. _____
- 5. _____
- 6. _____
- 7. _____
- 8. _____
- 9. _____
- 10. _____

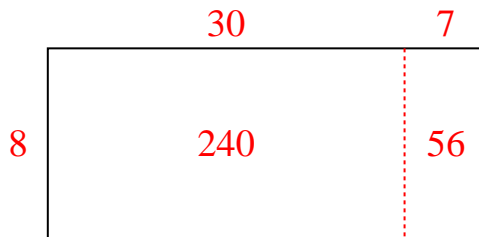


Solve each problem using the distributive property of division.

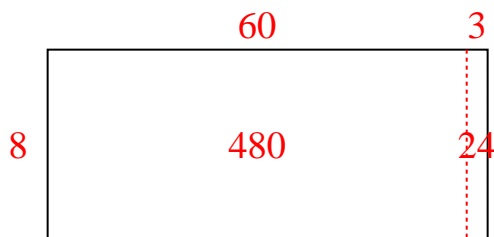
1) $370 \div 5 =$



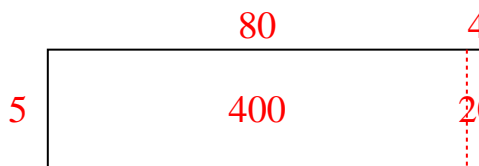
2) $296 \div 8 =$



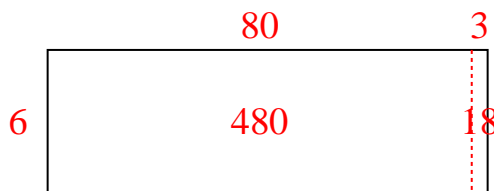
3) $504 \div 8 =$



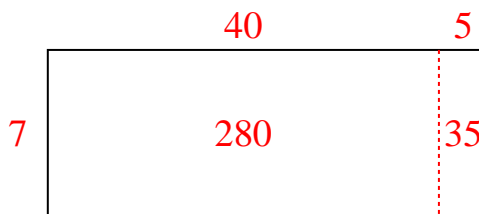
4) $420 \div 5 =$



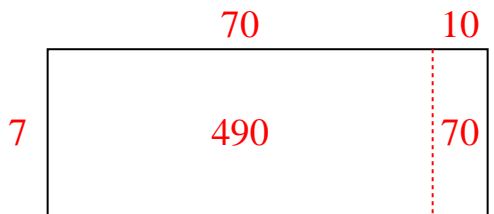
5) $498 \div 6 =$



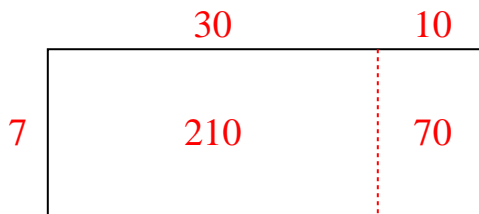
6) $315 \div 7 =$



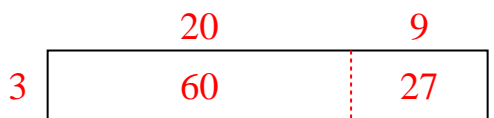
7) $560 \div 7 =$



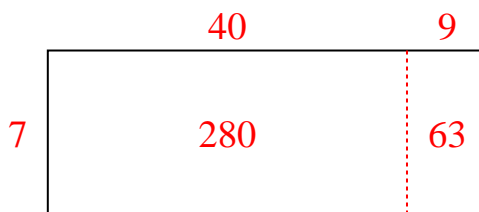
8) $280 \div 7 =$



9) $87 \div 3 =$



10) $343 \div 7 =$

Answers1. **74**2. **37**3. **63**4. **84**5. **83**6. **45**7. **80**8. **40**9. **29**10. **49**



Solve each problem using the distributive property of division.

Answers

1) $165 \div 5 =$

2) $141 \div 3 =$

3) $168 \div 7 =$

4) $230 \div 5 =$

5) $651 \div 7 =$

6) $504 \div 8 =$

7) $105 \div 3 =$

8) $335 \div 5 =$

9) $288 \div 6 =$

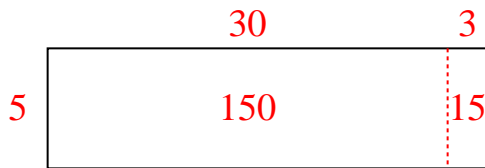
10) $104 \div 4 =$

- 1. _____
- 2. _____
- 3. _____
- 4. _____
- 5. _____
- 6. _____
- 7. _____
- 8. _____
- 9. _____
- 10. _____

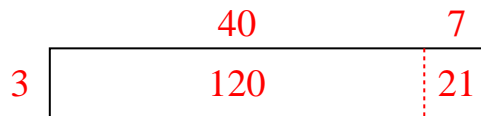


Solve each problem using the distributive property of division.

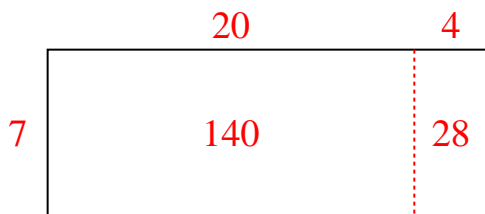
1) $165 \div 5 =$



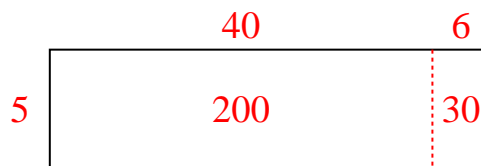
2) $141 \div 3 =$



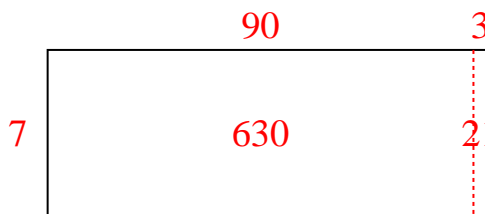
3) $168 \div 7 =$



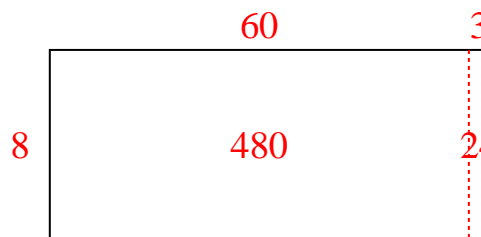
4) $230 \div 5 =$



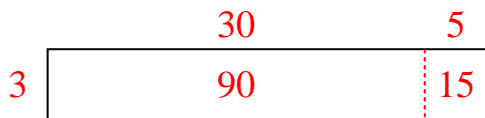
5) $651 \div 7 =$



6) $504 \div 8 =$



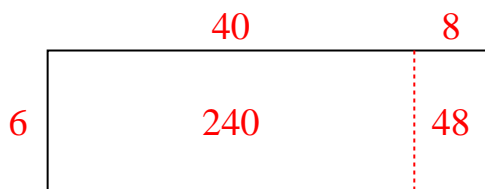
7) $105 \div 3 =$



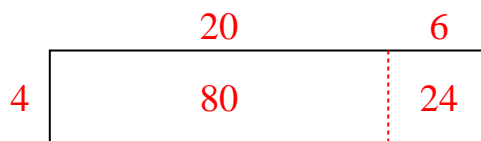
8) $335 \div 5 =$



9) $288 \div 6 =$



10) $104 \div 4 =$

Answers1. 332. 473. 244. 465. 936. 637. 358. 679. 4810. 26



Solve each problem using the distributive property of division.

Answers

1) $204 \div 6 =$

2) $612 \div 9 =$

3) $261 \div 3 =$

4) $360 \div 8 =$

5) $348 \div 4 =$

6) $150 \div 6 =$

7) $168 \div 7 =$

8) $665 \div 7 =$

9) $658 \div 7 =$

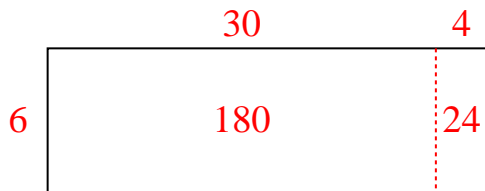
10) $204 \div 3 =$

- 1. _____
- 2. _____
- 3. _____
- 4. _____
- 5. _____
- 6. _____
- 7. _____
- 8. _____
- 9. _____
- 10. _____

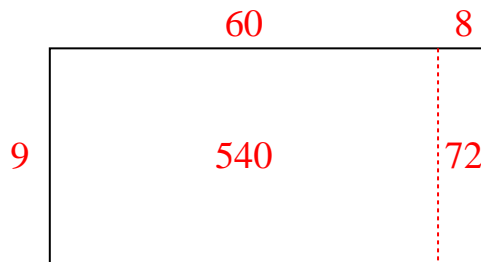


Solve each problem using the distributive property of division.

1) $204 \div 6 =$



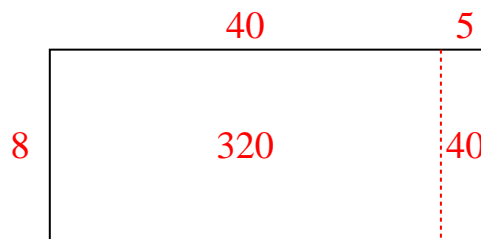
2) $612 \div 9 =$



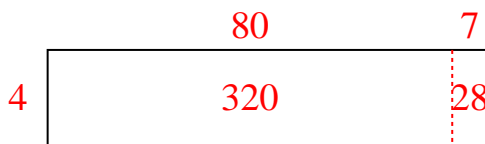
3) $261 \div 3 =$



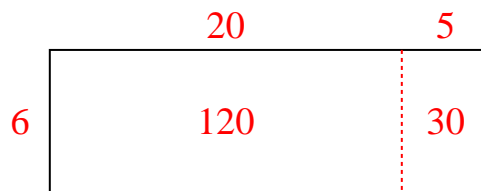
4) $360 \div 8 =$



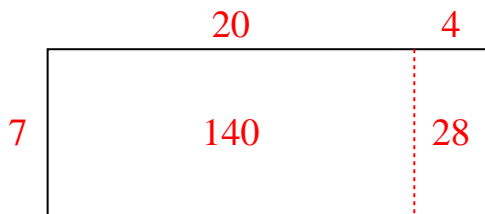
5) $348 \div 4 =$



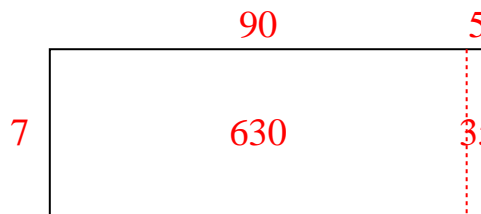
6) $150 \div 6 =$



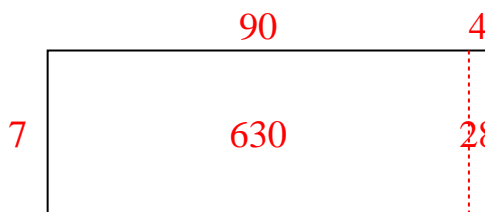
7) $168 \div 7 =$



8) $665 \div 7 =$



9) $658 \div 7 =$



10) $204 \div 3 =$

Answers1. **34**2. **68**3. **87**4. **45**5. **87**6. **25**7. **24**8. **95**9. **94**10. **68**



Solve each problem using the distributive property of division.

1) $424 \div 8 =$

2) $370 \div 5 =$

3) $204 \div 3 =$

4) $210 \div 6 =$

5) $162 \div 6 =$

6) $440 \div 8 =$

7) $396 \div 4 =$

8) $490 \div 5 =$

9) $150 \div 5 =$

10) $192 \div 8 =$

Answers

1. _____

2. _____

3. _____

4. _____

5. _____

6. _____

7. _____

8. _____

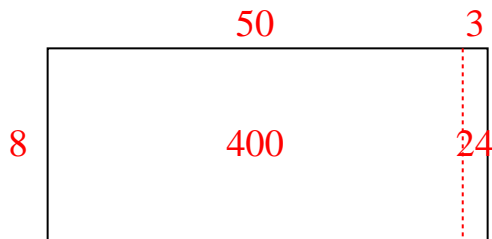
9. _____

10. _____




Solve each problem using the distributive property of division.

1) $424 \div 8 =$



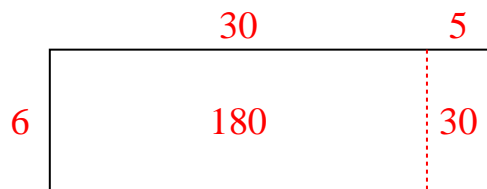
2) $370 \div 5 =$



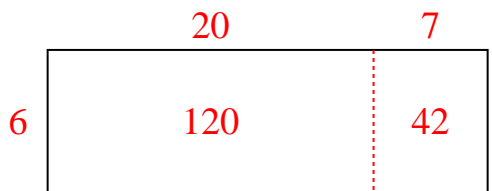
3) $204 \div 3 =$



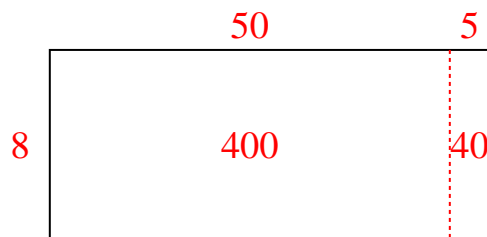
4) $210 \div 6 =$



5) $162 \div 6 =$



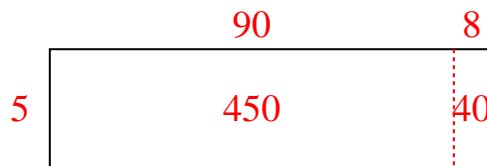
6) $440 \div 8 =$




7) $396 \div 4 =$



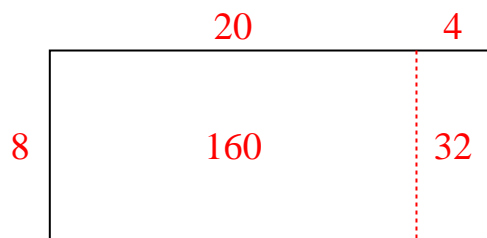
8) $490 \div 5 =$



9) $150 \div 5 =$



10) $192 \div 8 =$

Answers1. 532. 743. 684. 355. 276. 557. 998. 989. 3010. 24



Solve each problem using the distributive property of division.

Answers

1) $87 \div 3 =$

2) $485 \div 5 =$

3) $195 \div 5 =$

4) $640 \div 8 =$

5) $72 \div 3 =$

6) $540 \div 6 =$

7) $470 \div 5 =$

8) $230 \div 5 =$

9) $480 \div 6 =$

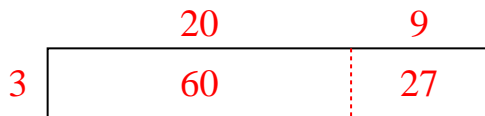
10) $228 \div 4 =$

- 1. _____
- 2. _____
- 3. _____
- 4. _____
- 5. _____
- 6. _____
- 7. _____
- 8. _____
- 9. _____
- 10. _____

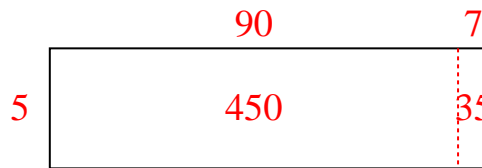


Solve each problem using the distributive property of division.

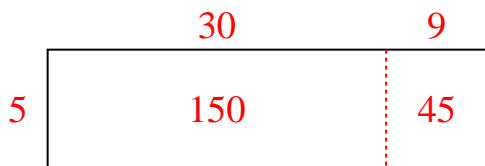
1) $87 \div 3 =$



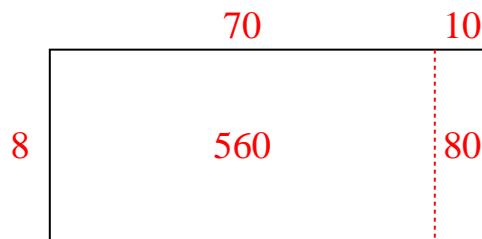
2) $485 \div 5 =$



3) $195 \div 5 =$



4) $640 \div 8 =$



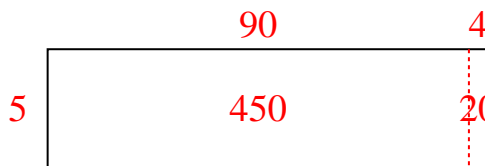
5) $72 \div 3 =$



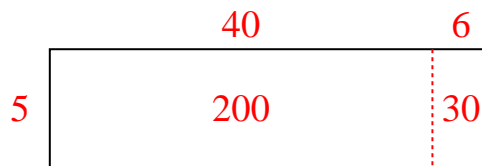
6) $540 \div 6 =$



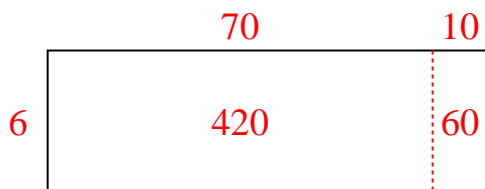
7) $470 \div 5 =$



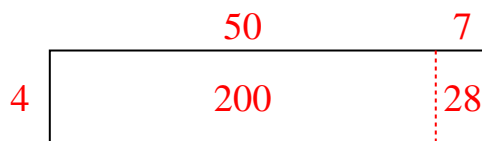
8) $230 \div 5 =$



9) $480 \div 6 =$



10) $228 \div 4 =$

Answers1. 292. 973. 394. 805. 246. 907. 948. 469. 8010. 57



Solve each problem using the distributive property of division.

1) $783 \div 9 =$

2) $441 \div 7 =$

3) $522 \div 9 =$

4) $220 \div 4 =$

5) $148 \div 4 =$

6) $432 \div 9 =$

7) $162 \div 6 =$

8) $252 \div 4 =$

9) $390 \div 5 =$

10) $672 \div 8 =$

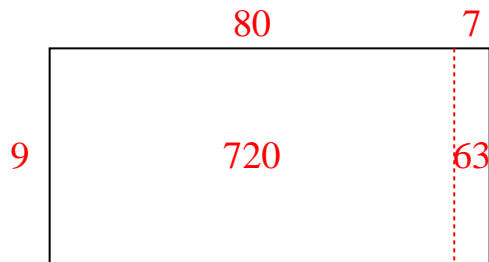
Answers

- 1. _____
- 2. _____
- 3. _____
- 4. _____
- 5. _____
- 6. _____
- 7. _____
- 8. _____
- 9. _____
- 10. _____

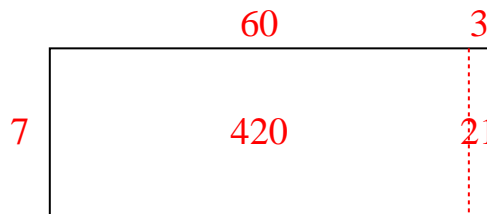


Solve each problem using the distributive property of division.

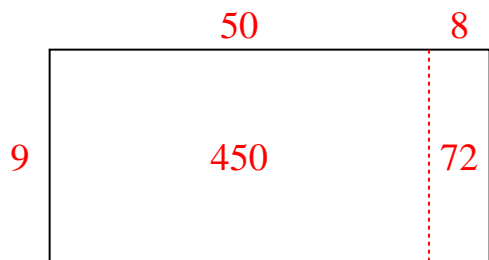
1) $783 \div 9 =$



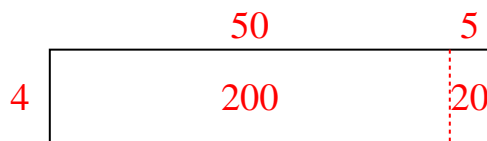
2) $441 \div 7 =$



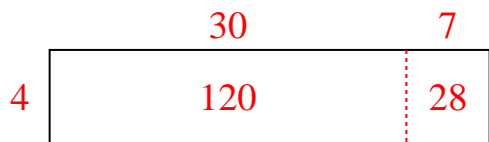
3) $522 \div 9 =$



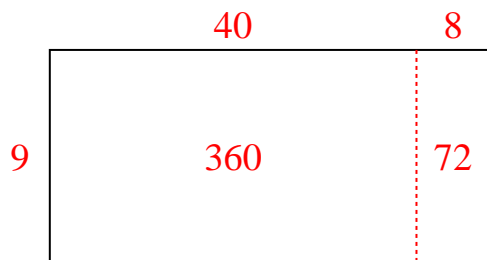
4) $220 \div 4 =$



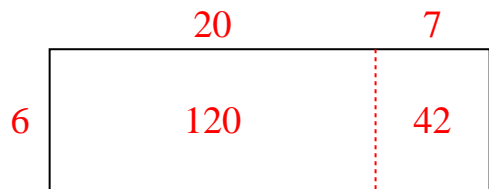
5) $148 \div 4 =$



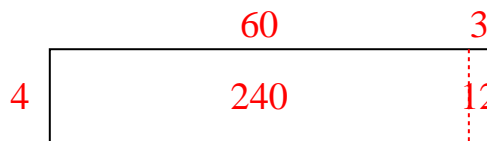
6) $432 \div 9 =$



7) $162 \div 6 =$



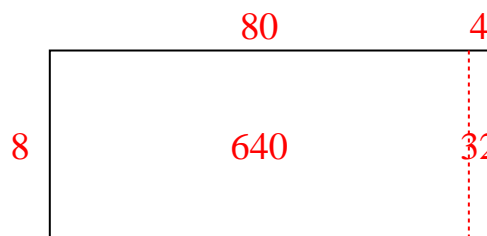
8) $252 \div 4 =$



9) $390 \div 5 =$



10) $672 \div 8 =$

Answers1. 872. 633. 584. 555. 376. 487. 278. 639. 7810. 84



Solve each problem using the distributive property of division.

Answers

1) $295 \div 5 =$

2) $368 \div 8 =$

3) $216 \div 9 =$

4) $240 \div 5 =$

5) $800 \div 8 =$

6) $480 \div 5 =$

7) $320 \div 5 =$

8) $104 \div 4 =$

9) $495 \div 5 =$


10) $495 \div 9 =$

1. _____
2. _____
3. _____
4. _____
5. _____
6. _____
7. _____
8. _____
9. _____
10. _____

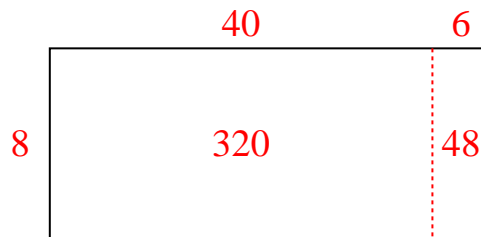


Solve each problem using the distributive property of division.

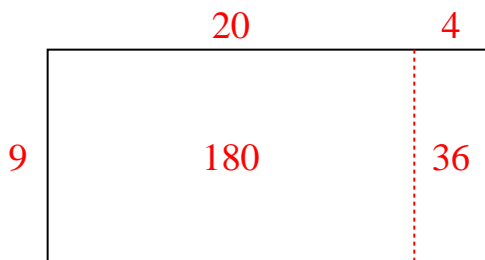
1) $295 \div 5 =$



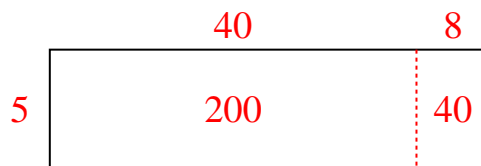
2) $368 \div 8 =$



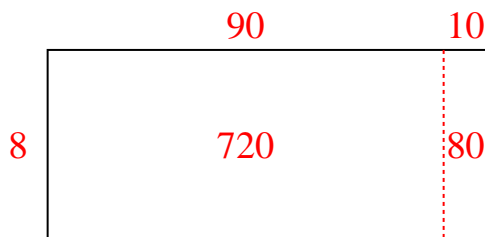
3) $216 \div 9 =$



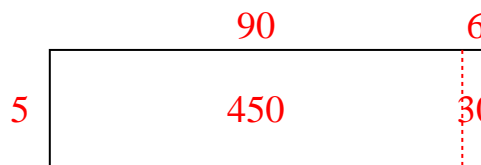
4) $240 \div 5 =$



5) $800 \div 8 =$



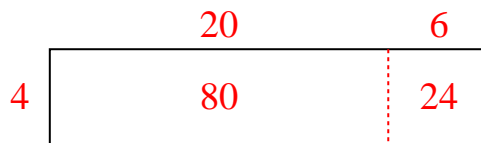
6) $480 \div 5 =$



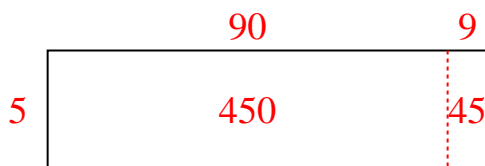
7) $320 \div 5 =$



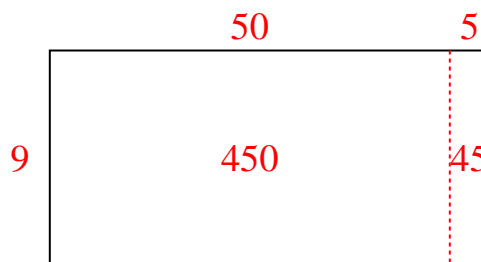
8) $104 \div 4 =$



9) $495 \div 5 =$



10) $495 \div 9 =$

Answers1. **59**2. **46**3. **24**4. **48**5. **100**6. **96**7. **64**8. **26**9. **99**10. **55**



Solve each problem using the distributive property of division.

1) $666 \div 9 =$

2) $272 \div 4 =$

3) $264 \div 6 =$

4) $380 \div 4 =$

5) $490 \div 7 =$

6) $148 \div 4 =$

7) $413 \div 7 =$

8) $657 \div 9 =$

9) $270 \div 5 =$

10) $72 \div 3 =$

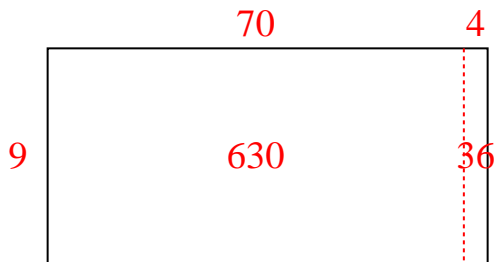
Answers

- 1. _____
- 2. _____
- 3. _____
- 4. _____
- 5. _____
- 6. _____
- 7. _____
- 8. _____
- 9. _____
- 10. _____

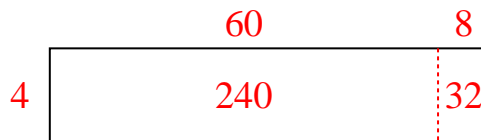


Solve each problem using the distributive property of division.

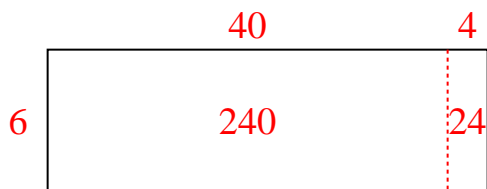
1) $666 \div 9 =$



2) $272 \div 4 =$



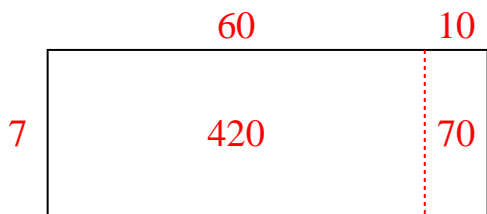
3) $264 \div 6 =$



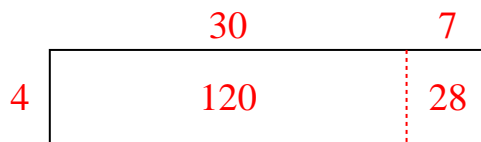
4) $380 \div 4 =$



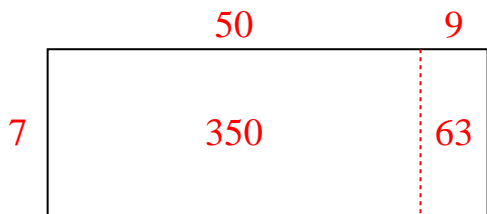
5) $490 \div 7 =$



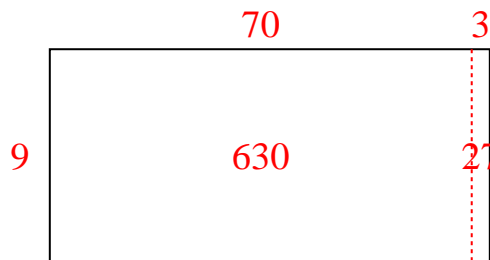
6) $148 \div 4 =$



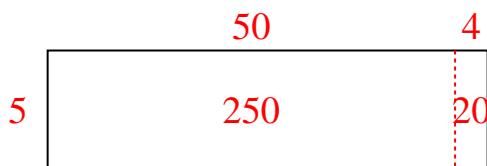
7) $413 \div 7 =$



8) $657 \div 9 =$



9) $270 \div 5 =$



10) $72 \div 3 =$

Answers1. **74**2. **68**3. **44**4. **95**5. **70**6. **37**7. **59**8. **73**9. **54**10. **24**



Solve each problem using the distributive property of division.

1) $528 \div 8 =$

2) $560 \div 7 =$

3) $300 \div 6 =$

4) $440 \div 5 =$

5) $240 \div 5 =$

6) $612 \div 9 =$

7) $224 \div 4 =$

8) $500 \div 5 =$

9) $510 \div 6 =$

10) $335 \div 5 =$

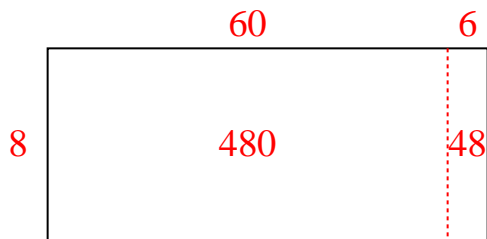
Answers

- 1. _____
- 2. _____
- 3. _____
- 4. _____
- 5. _____
- 6. _____
- 7. _____
- 8. _____
- 9. _____
- 10. _____

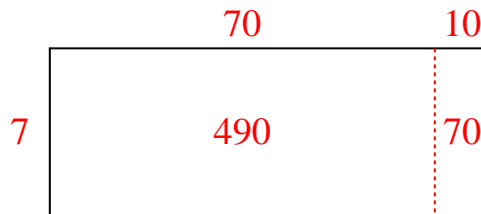


Solve each problem using the distributive property of division.

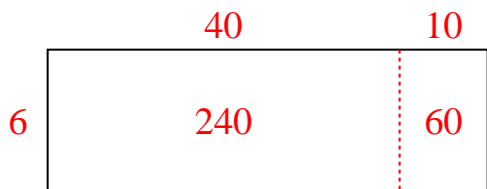
1) $528 \div 8 =$



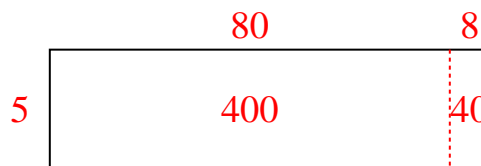
2) $560 \div 7 =$



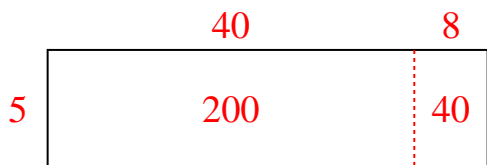
3) $300 \div 6 =$



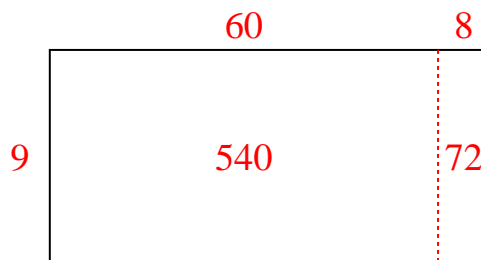
4) $440 \div 5 =$



5) $240 \div 5 =$



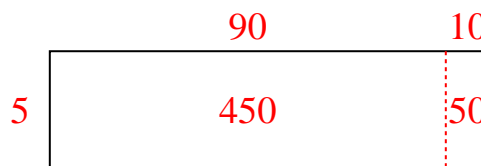
6) $612 \div 9 =$



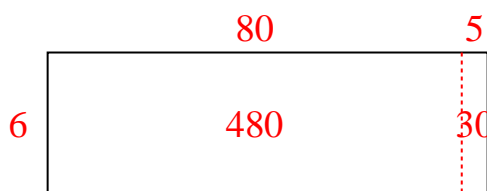
7) $224 \div 4 =$



8) $500 \div 5 =$



9) $510 \div 6 =$



10) $335 \div 5 =$

Answers1. 662. 803. 504. 885. 486. 687. 568. 1009. 8510. 67