



Solve each problem.

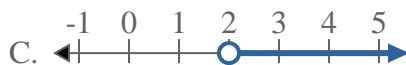
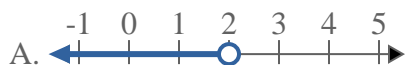
1) Which option best shows $X \leq -4$



2) Which option best shows $X > 12$



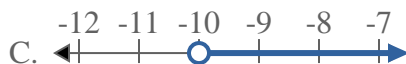
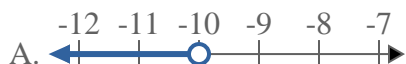
3) Which option best shows $X > 2$



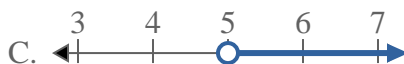
4) Which option best shows $X < 13$



5) Which option best shows $X \geq -10$



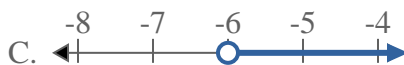
6) Which option best shows $X \leq 5$



7) Which option best shows $X \leq 16$



8) Which option best shows $X > -6$



Answers

1. _____

2. _____

3. _____

4. _____

5. _____

6. _____

7. _____

8. _____



Solve each problem.

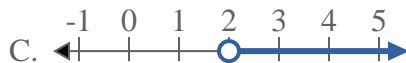
1) Which option best shows $X \leq -4$



2) Which option best shows $X > 12$



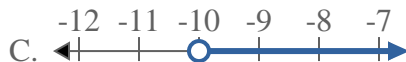
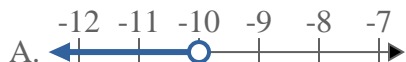
3) Which option best shows $X > 2$



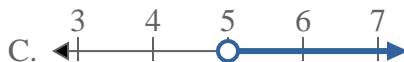
4) Which option best shows $X < 13$



5) Which option best shows $X \geq -10$



6) Which option best shows $X \leq 5$



7) Which option best shows $X \leq 16$



8) Which option best shows $X > -6$



Answers

1. **B**

2. **C**

3. **C**

4. **A**

5. **D**

6. **B**

7. **B**

8. **C**