

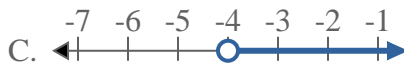
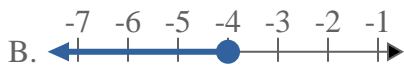


Solve each problem.

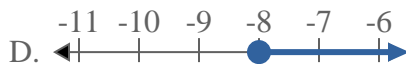
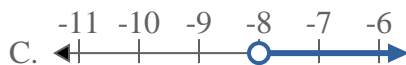
1) Which option best shows  $X < -5$



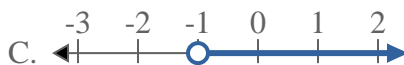
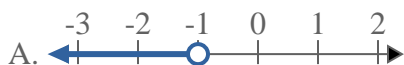
2) Which option best shows  $X < -4$



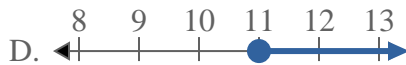
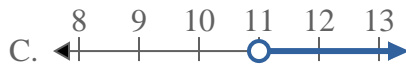
3) Which option best shows  $X < -8$



4) Which option best shows  $X < -1$



5) Which option best shows  $X \geq 11$



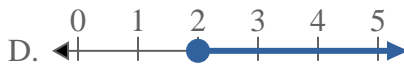
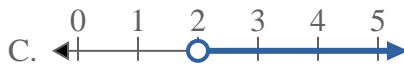
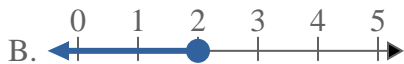
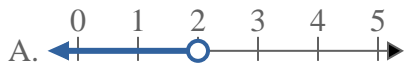
6) Which option best shows  $X \geq 5$



7) Which option best shows  $X \geq 13$



8) Which option best shows  $X < 2$



**Answers**

1. \_\_\_\_\_

2. \_\_\_\_\_

3. \_\_\_\_\_

4. \_\_\_\_\_

5. \_\_\_\_\_

6. \_\_\_\_\_

7. \_\_\_\_\_

8. \_\_\_\_\_

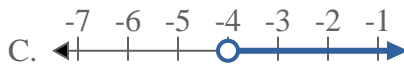
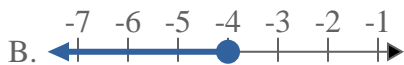


Solve each problem.

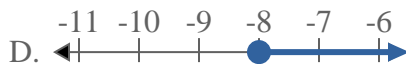
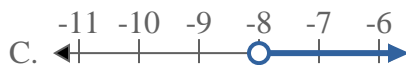
1) Which option best shows  $X < -5$



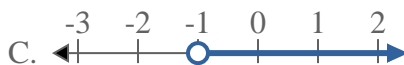
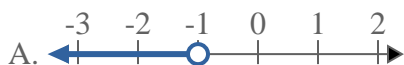
2) Which option best shows  $X < -4$



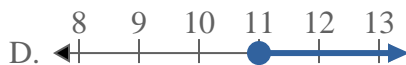
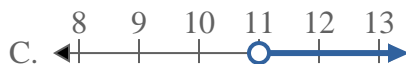
3) Which option best shows  $X < -8$



4) Which option best shows  $X < -1$



5) Which option best shows  $X \geq 11$



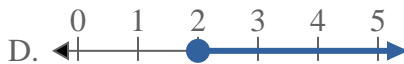
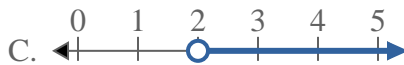
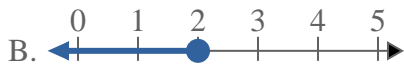
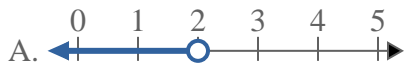
6) Which option best shows  $X \geq 5$



7) Which option best shows  $X \geq 13$



8) Which option best shows  $X < 2$



**Answers**

1.   **A**  

2.   **A**  

3.   **A**  

4.   **A**  

5.   **D**  

6.   **D**  

7.   **D**  

8.   **A**