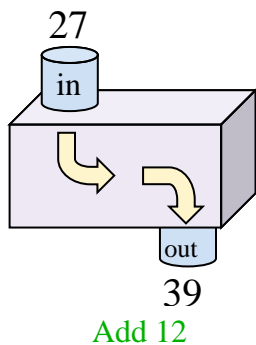


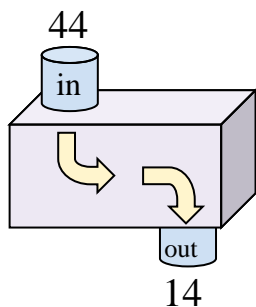


Determine the rule each function machine is using.

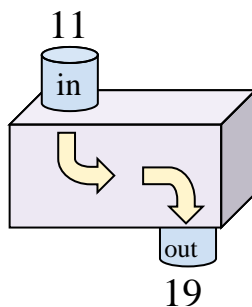
Ex)



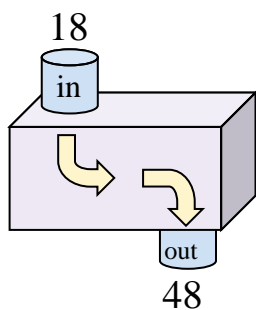
1)



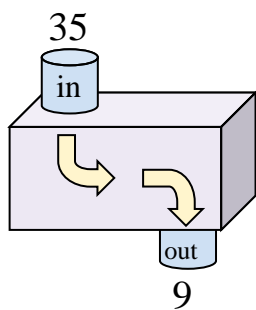
2)



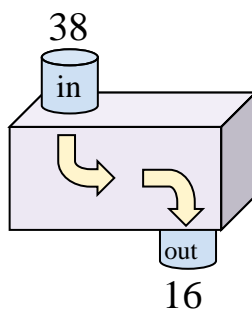
3)



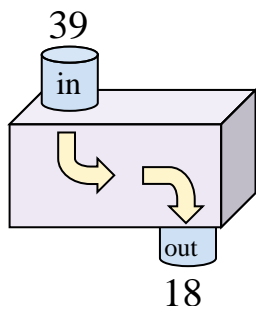
4)



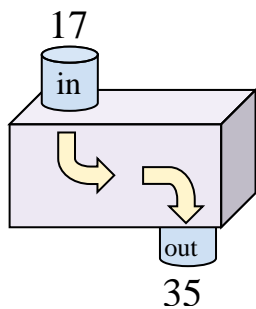
5)



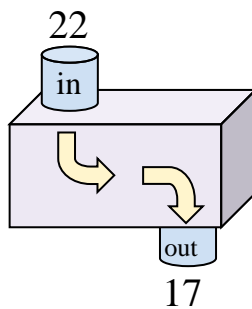
6)



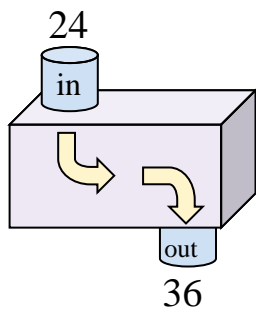
7)



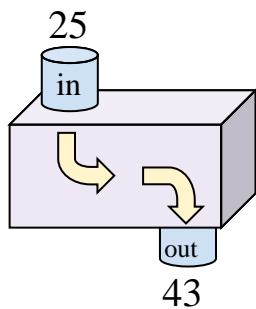
8)



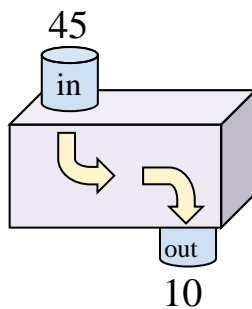
9)



10)



11)



Answers

Ex. **Add 12**

1. \_\_\_\_\_

2. \_\_\_\_\_

3. \_\_\_\_\_

4. \_\_\_\_\_

5. \_\_\_\_\_

6. \_\_\_\_\_

7. \_\_\_\_\_

8. \_\_\_\_\_

9. \_\_\_\_\_

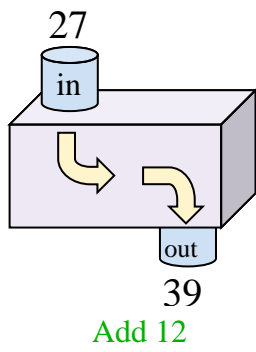
10. \_\_\_\_\_

11. \_\_\_\_\_

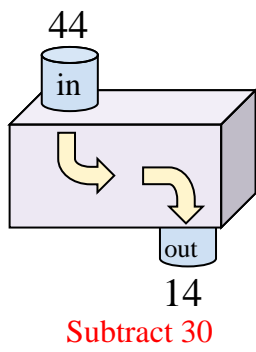


Determine the rule each function machine is using.

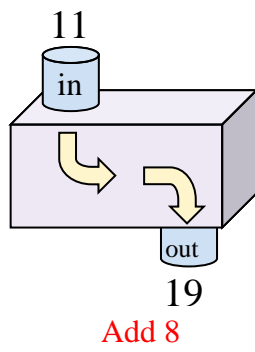
Ex)



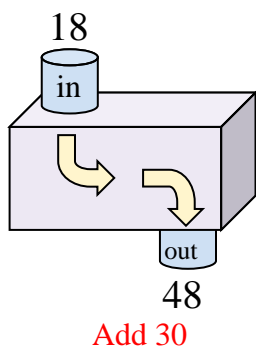
1)



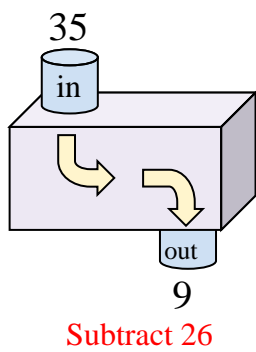
2)



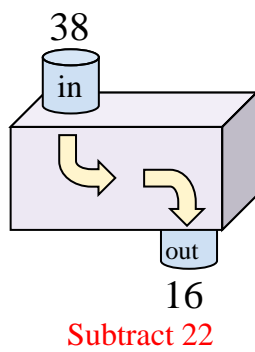
3)



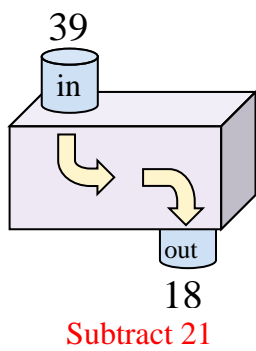
4)



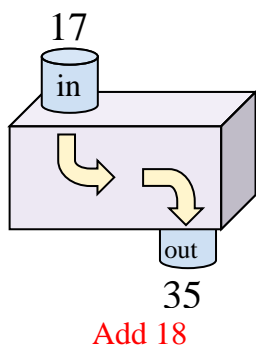
5)



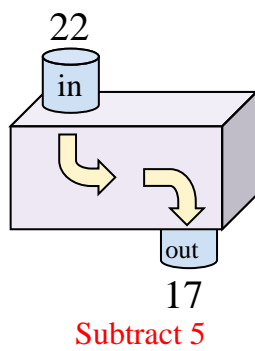
6)



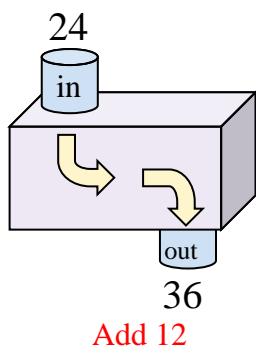
7)



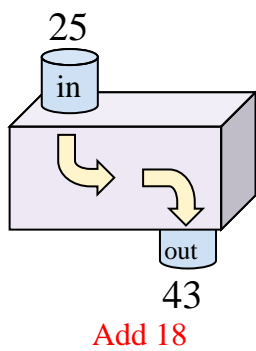
8)



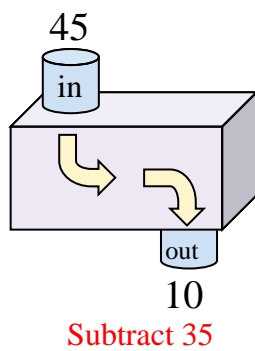
9)



10)



11)



Answers

- Ex. Add 12
- 1. Subtract 30
- 2. Add 8
- 3. Add 30
- 4. Subtract 26
- 5. Subtract 22
- 6. Subtract 21
- 7. Add 18
- 8. Subtract 5
- 9. Add 12
- 10. Add 18
- 11. Subtract 35