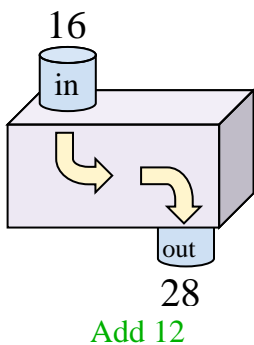




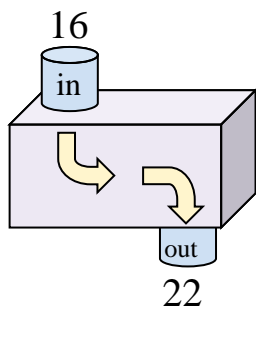
Determine the rule each function machine is using.

**Answers**

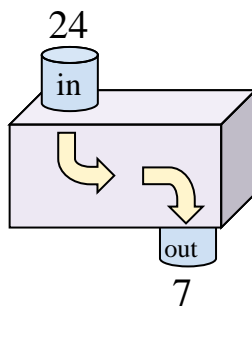
Ex)



1)



2)



Ex. **Add 12**

1. \_\_\_\_\_

2. \_\_\_\_\_

3. \_\_\_\_\_

4. \_\_\_\_\_

5. \_\_\_\_\_

6. \_\_\_\_\_

7. \_\_\_\_\_

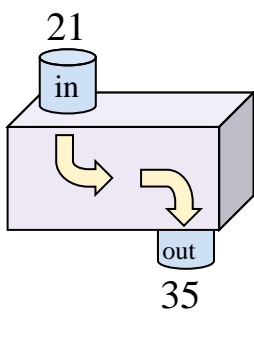
8. \_\_\_\_\_

9. \_\_\_\_\_

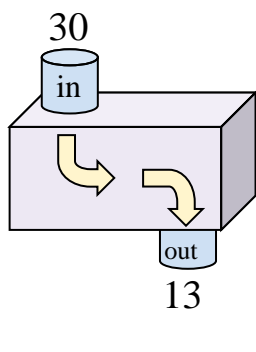
10. \_\_\_\_\_

11. \_\_\_\_\_

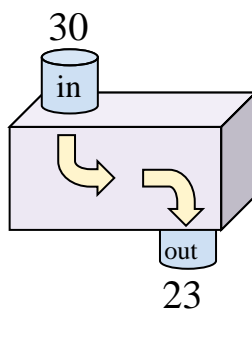
3)



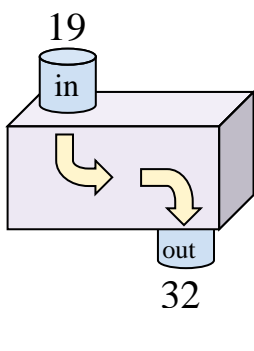
4)



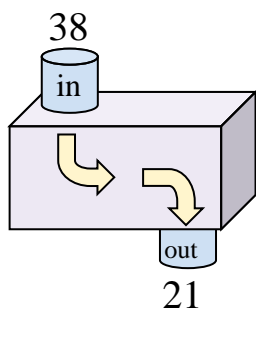
5)



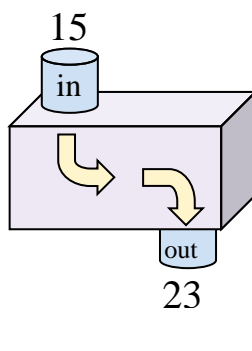
6)



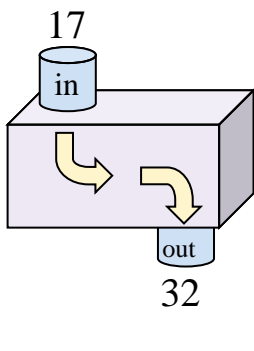
7)



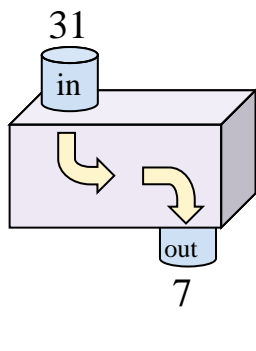
8)



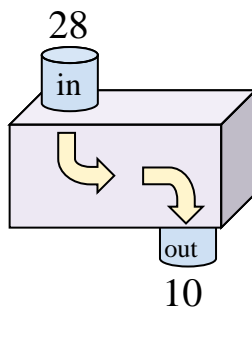
9)



10)



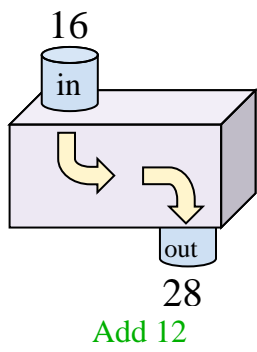
11)



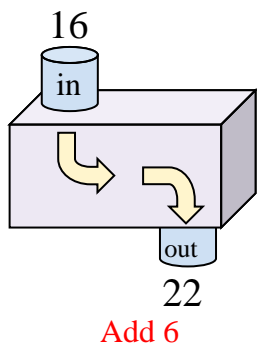


Determine the rule each function machine is using.

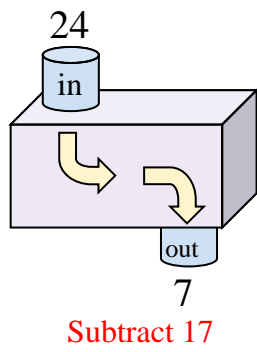
Ex)



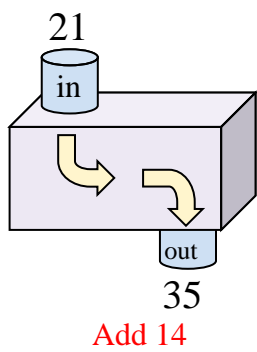
1)



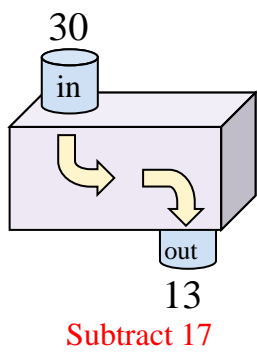
2)



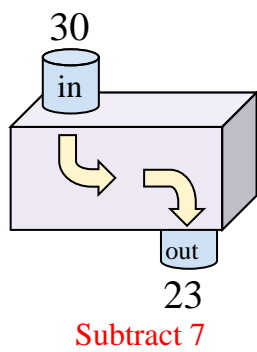
3)



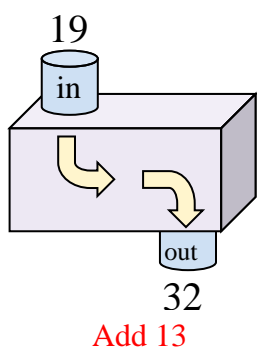
4)



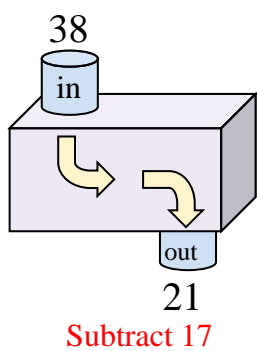
5)



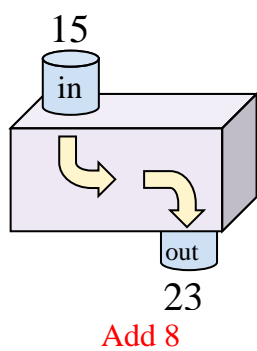
6)



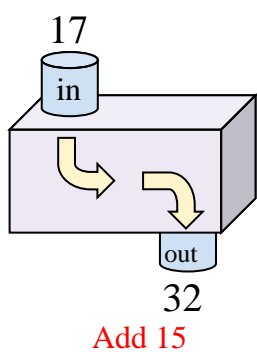
7)



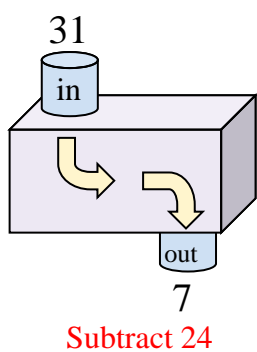
8)



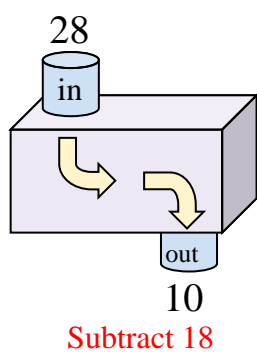
9)



10)



11)



Answers

Ex. **Add 12**

1. **Add 6**

2. **Subtract 17**

3. **Add 14**

4. **Subtract 17**

5. **Subtract 7**

6. **Add 13**

7. **Subtract 17**

8. **Add 8**

9. **Add 15**

10. **Subtract 24**

11. **Subtract 18**