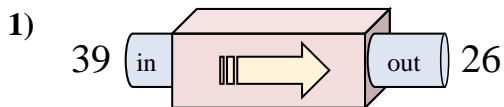


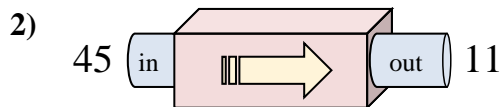


Determine which rule the function machine is using.

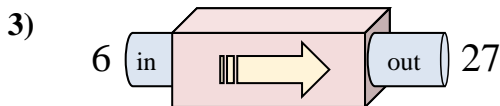
Answers



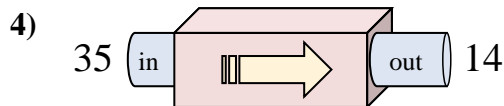
- A. Subtract 13
- B. Subtract 15
- C. Subtract 11
- D. Subtract 16



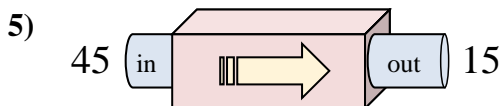
- A. Subtract 32
- B. Subtract 34
- C. Subtract 29
- D. Add 31



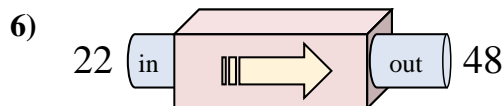
- A. Subtract 20
- B. Add 20
- C. Add 21
- D. Add 24



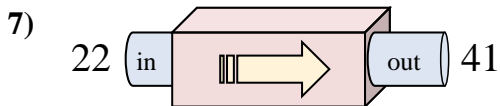
- A. Add 18
- B. Subtract 25
- C. Subtract 18
- D. Subtract 21



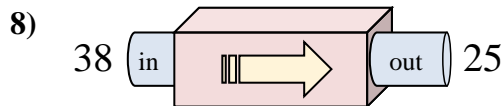
- A. Subtract 34
- B. Subtract 26
- C. Subtract 30
- D. Add 32



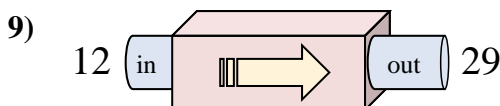
- A. Add 31
- B. Add 26
- C. Add 29
- D. Add 23



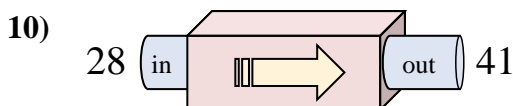
- A. Add 21
- B. Add 15
- C. Add 18
- D. Add 19



- A. Subtract 13
- B. Add 14
- C. Add 10
- D. Subtract 9



- A. Add 21
- B. Add 17
- C. Subtract 15
- D. Subtract 13

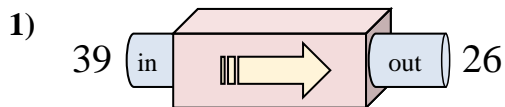


- A. Add 12
- B. Add 11
- C. Add 18
- D. Add 13

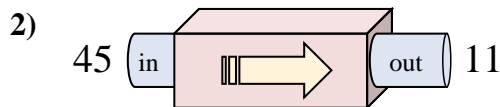
1. _____
2. _____
3. _____
4. _____
5. _____
6. _____
7. _____
8. _____
9. _____
10. _____



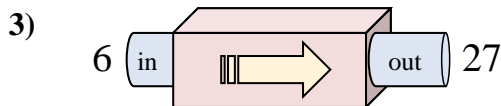
Determine which rule the function machine is using.



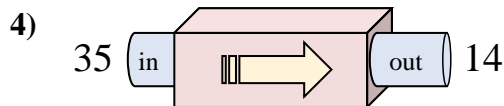
- A. Subtract 13
- B. Subtract 15
- C. Subtract 11
- D. Subtract 16



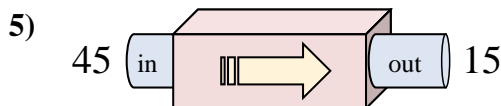
- A. Subtract 32
- B. Subtract 34
- C. Subtract 29
- D. Add 31



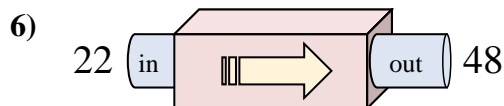
- A. Subtract 20
- B. Add 20
- C. Add 21
- D. Add 24



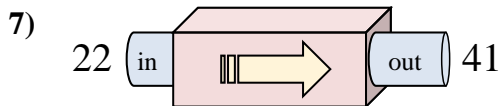
- A. Add 18
- B. Subtract 25
- C. Subtract 18
- D. Subtract 21



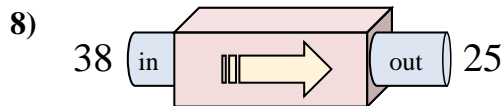
- A. Subtract 34
- B. Subtract 26
- C. Subtract 30
- D. Add 32



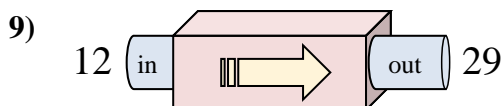
- A. Add 31
- B. Add 26
- C. Add 29
- D. Add 23



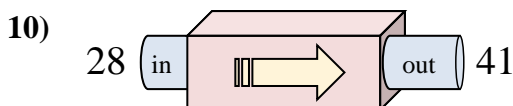
- A. Add 21
- B. Add 15
- C. Add 18
- D. Add 19



- A. Subtract 13
- B. Add 14
- C. Add 10
- D. Subtract 9



- A. Add 21
- B. Add 17
- C. Subtract 15
- D. Subtract 13



- A. Add 12
- B. Add 11
- C. Add 18
- D. Add 13

Answers

- 1. **A**
- 2. **B**
- 3. **C**
- 4. **D**
- 5. **C**
- 6. **B**
- 7. **D**
- 8. **A**
- 9. **B**
- 10. **D**