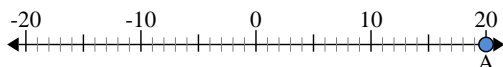




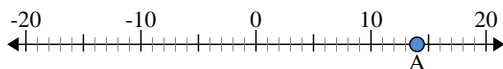
Use the numberlines to find the absolute value.

1) a. What is the value of 'A'?



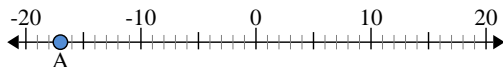
b. How far is 'A' from 0 (absolute value)?

2) a. What is the value of 'A'?



b. How far is 'A' from 0 (absolute value)?

3) a. What is the value of 'A'?



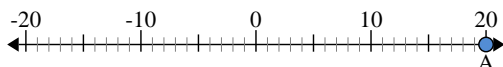
Answers

1. \_\_\_\_\_
2. \_\_\_\_\_
3. \_\_\_\_\_
4. \_\_\_\_\_
5. \_\_\_\_\_
6. \_\_\_\_\_
7. \_\_\_\_\_
8. \_\_\_\_\_
9. \_\_\_\_\_
10. \_\_\_\_\_



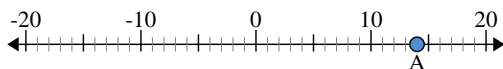
Use the numberlines to find the absolute value.

1) a. What is the value of 'A'?



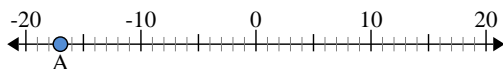
b. How far is 'A' from 0 (absolute value)?

2) a. What is the value of 'A'?



b. How far is 'A' from 0 (absolute value)?

3) a. What is the value of 'A'?



Answers

1. 20    20

2. 14    14

3. -17    17

4. 18    18

5. -16    16

6. -10    10

7. -9    9

8. -12    12

9. -7    7

10. 13    13