



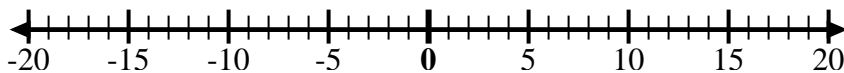
Use the numberlines to show each expression and solve.

Ex) Start at 0 and add -2



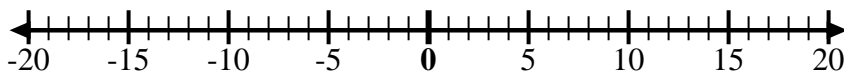
Ex.  $0 + -2 = -2$

1) Start at 0 and add -5



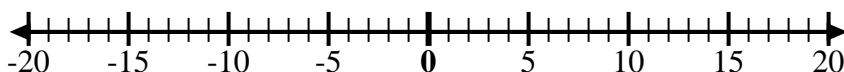
1. \_\_\_\_\_

2) Start at 0 and add 7



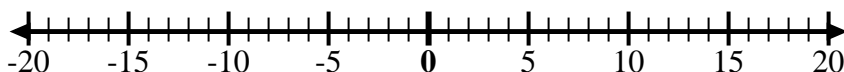
2. \_\_\_\_\_

3) Start at -6 and add 12



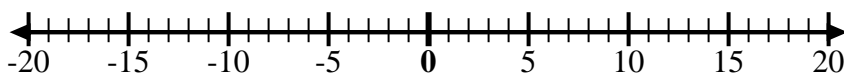
3. \_\_\_\_\_

4) Start at -2 and add -2



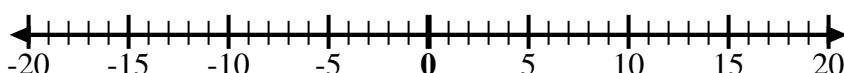
4. \_\_\_\_\_

5) Start at 2 and add -8



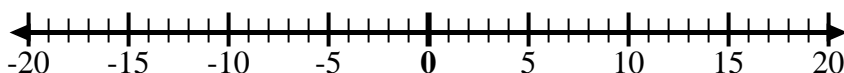
5. \_\_\_\_\_

6) Start at 3 and add -11



6. \_\_\_\_\_

7) Start at -7 and add 16



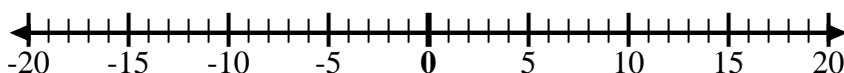
7. \_\_\_\_\_

8) Start at -9 and add 7



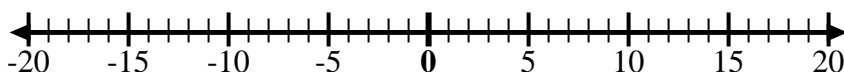
8. \_\_\_\_\_

9) Start at -8 and add 3



9. \_\_\_\_\_

10) Start at 5 and add -15



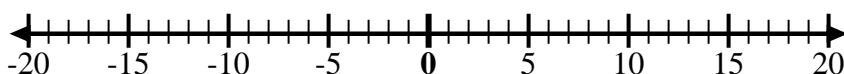
10. \_\_\_\_\_

11) Start at -8 and add 4



11. \_\_\_\_\_

12) Start at 5 and add -6



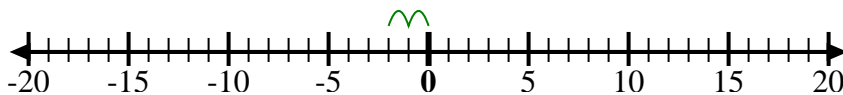
12. \_\_\_\_\_

Answers



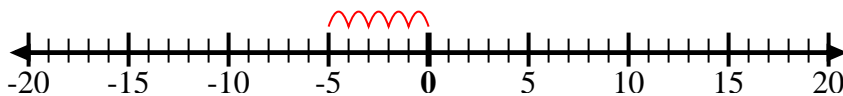
Use the numberlines to show each expression and solve.

Ex) Start at 0 and add -2



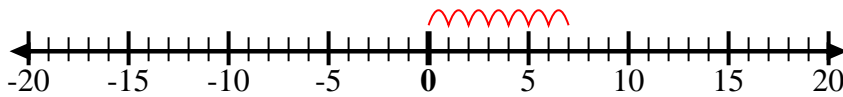
Ex.  $0 + -2 = -2$

1) Start at 0 and add -5



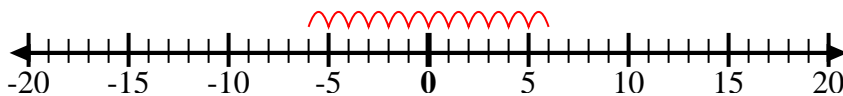
1.  $0 + -5 = -5$

2) Start at 0 and add 7



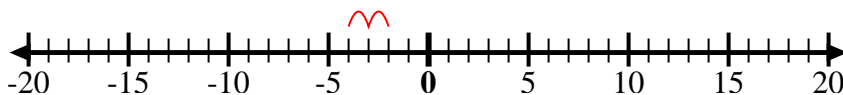
2.  $0 + 7 = 7$

3) Start at -6 and add 12



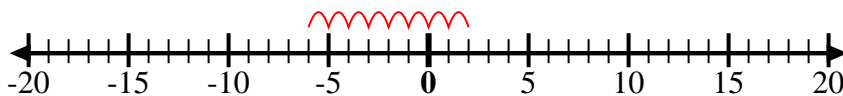
3.  $-6 + 12 = 6$

4) Start at -2 and add -2



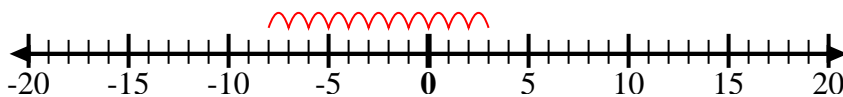
4.  $-2 + -2 = -4$

5) Start at 2 and add -8



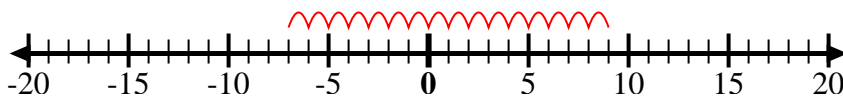
5.  $2 + -8 = -6$

6) Start at 3 and add -11



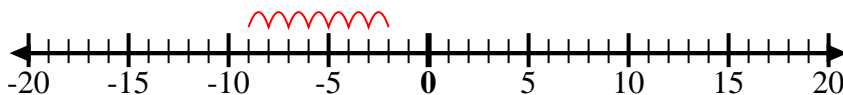
6.  $3 + -11 = -8$

7) Start at -7 and add 16



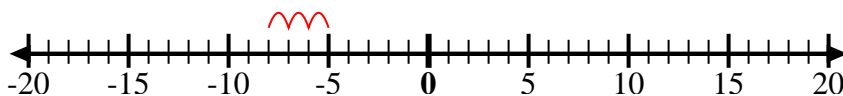
7.  $-7 + 16 = 9$

8) Start at -9 and add 7



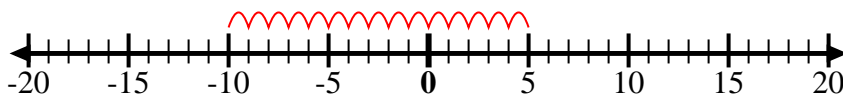
8.  $-9 + 7 = -2$

9) Start at -8 and add 3



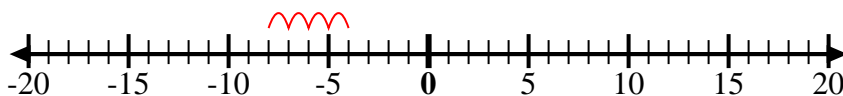
9.  $-8 + 3 = -5$

10) Start at 5 and add -15



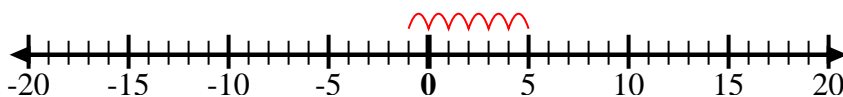
10.  $5 + -15 = -10$

11) Start at -8 and add 4



11.  $-8 + 4 = -4$

12) Start at 5 and add -6



12.  $5 + -6 = -1$

Answers