



Use the numberlines to show each expression and solve.

Ex) Start at -2 and add -8



Ex. $-2 + -8 = -10$

1) Start at 8 and add -18



1. _____

2) Start at 4 and add -11



2. _____

3) Start at -5 and add -5



3. _____

4) Start at -8 and add 5



4. _____

5) Start at -6 and add 3



5. _____

6) Start at -1 and add -7



6. _____

7) Start at -2 and add -6



7. _____

8) Start at -3 and add 12



8. _____

9) Start at -1 and add 11



9. _____

10) Start at 2 and add -9



10. _____

11) Start at -3 and add 13



11. _____

12) Start at 10 and add -12



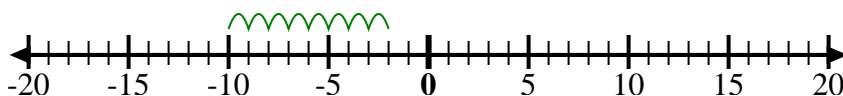
12. _____

Answers

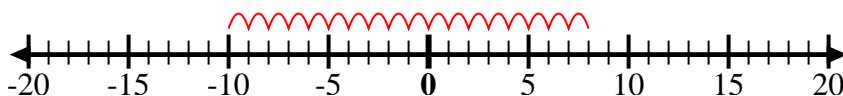


Use the numberlines to show each expression and solve.

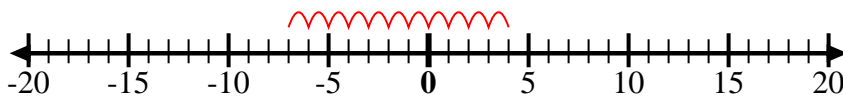
Ex) Start at -2 and add -8



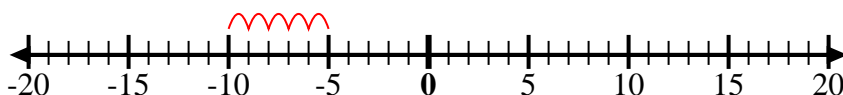
1) Start at 8 and add -18



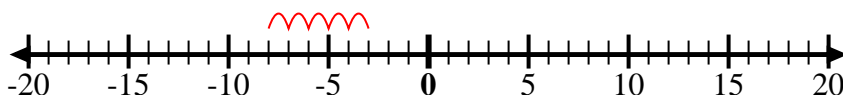
2) Start at 4 and add -11



3) Start at -5 and add -5



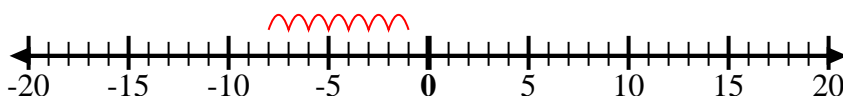
4) Start at -8 and add 5



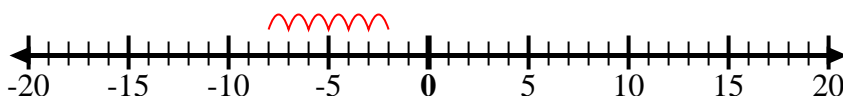
5) Start at -6 and add 3



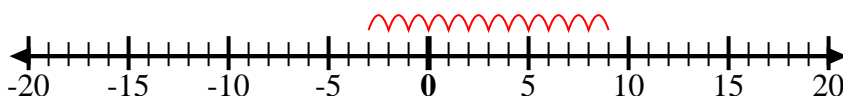
6) Start at -1 and add -7



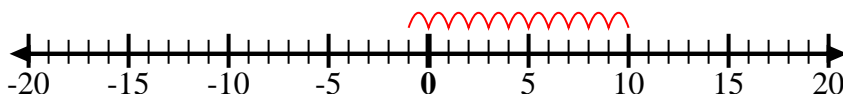
7) Start at -2 and add -6



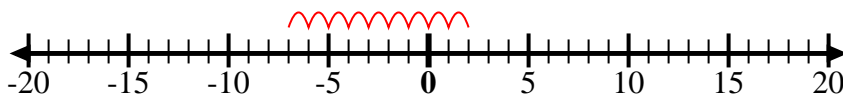
8) Start at -3 and add 12



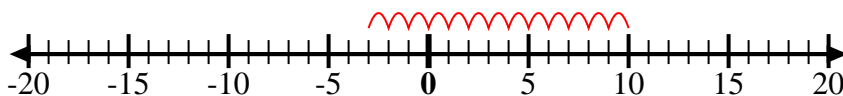
9) Start at -1 and add 11



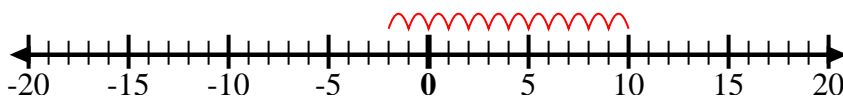
10) Start at 2 and add -9



11) Start at -3 and add 13



12) Start at 10 and add -12



Answers

Ex. $-2 + -8 = -10$

1. $8 + -18 = -10$

2. $4 + -11 = -7$

3. $-5 + -5 = -10$

4. $-8 + 5 = -3$

5. $-6 + 3 = -3$

6. $-1 + -7 = -8$

7. $-2 + -6 = -8$

8. $-3 + 12 = 9$

9. $-1 + 11 = 10$

10. $2 + -9 = -7$

11. $-3 + 13 = 10$

12. $10 + -12 = -2$