



Use the numberlines to show each expression and solve.

Ex) Start at -4 and add 8



Ex.  $-4 + 8 = 4$

1) Start at -3 and add 10



1. \_\_\_\_\_

2) Start at 2 and add -12



2. \_\_\_\_\_

3) Start at -5 and add 3



3. \_\_\_\_\_

4) Start at -7 and add 5



4. \_\_\_\_\_

5) Start at -3 and add -3



5. \_\_\_\_\_

6) Start at -1 and add -9



6. \_\_\_\_\_

7) Start at 1 and add -10



7. \_\_\_\_\_

8) Start at -6 and add -2



8. \_\_\_\_\_

9) Start at -8 and add 10



9. \_\_\_\_\_

10) Start at 0 and add -10



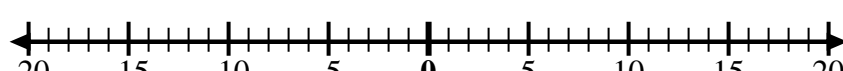
10. \_\_\_\_\_

11) Start at -8 and add -2



11. \_\_\_\_\_

12) Start at 5 and add -13



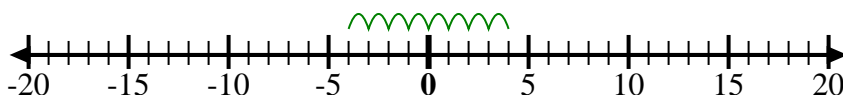
12. \_\_\_\_\_

Answers



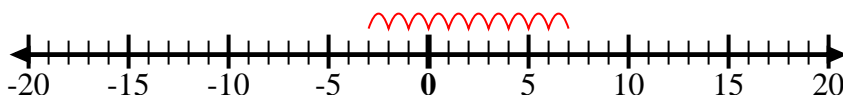
Use the numberlines to show each expression and solve.

Ex) Start at -4 and add 8



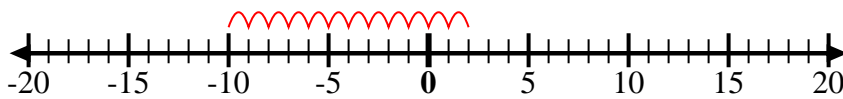
Ex.  $-4 + 8 = 4$

1) Start at -3 and add 10



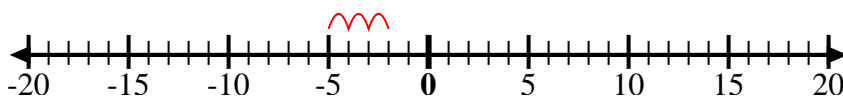
1.  $-3 + 10 = 7$

2) Start at 2 and add -12



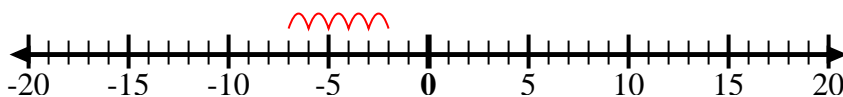
2.  $2 + -12 = -10$

3) Start at -5 and add 3



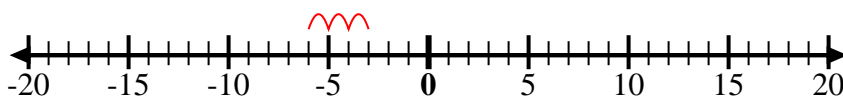
3.  $-5 + 3 = -2$

4) Start at -7 and add 5



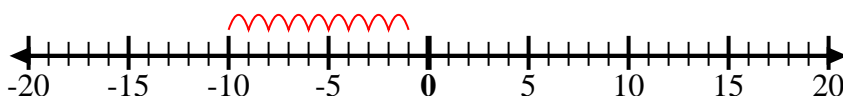
4.  $-7 + 5 = -2$

5) Start at -3 and add -3



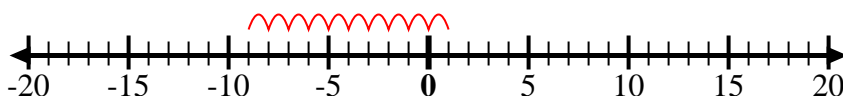
5.  $-3 + -3 = -6$

6) Start at -1 and add -9



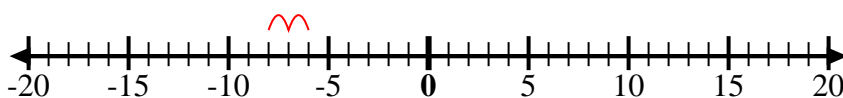
6.  $-1 + -9 = -10$

7) Start at 1 and add -10



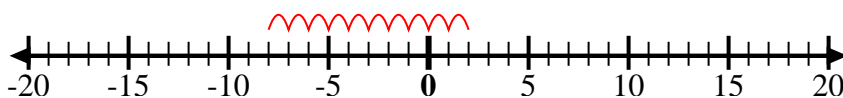
7.  $1 + -10 = -9$

8) Start at -6 and add -2



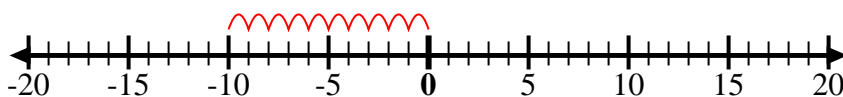
8.  $-6 + -2 = -8$

9) Start at -8 and add 10



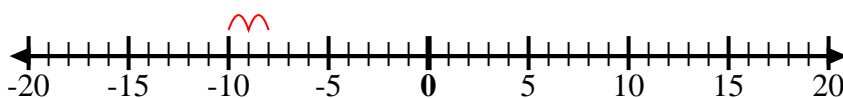
9.  $-8 + 10 = 2$

10) Start at 0 and add -10



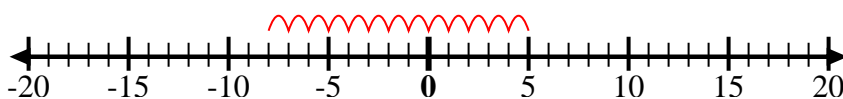
10.  $0 + -10 = -10$

11) Start at -8 and add -2



11.  $-8 + -2 = -10$

12) Start at 5 and add -13



12.  $5 + -13 = -8$

Answers