




Solve each problem.

Answers

1) Which letter best shows -30?




1. _____

2) Which letter best shows -51?




2. _____

3) Which letter best shows -97?



3. _____

4) Which letter best shows -117?




4. _____

5) Which letter best shows -32?




5. _____

6) Which letter best shows -28?




6. _____

7) Which letter best shows -110?




7. _____

8) Which letter best shows -88?



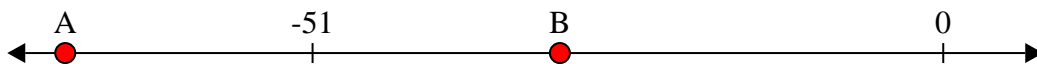
8. _____

9) Which letter best shows -115?



9. _____

10) Which letter best shows -31?




10. _____

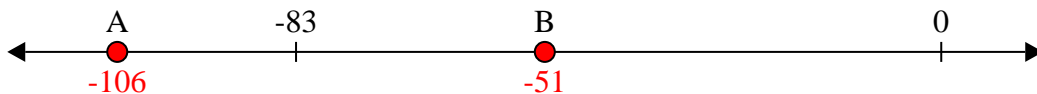


Solve each problem.

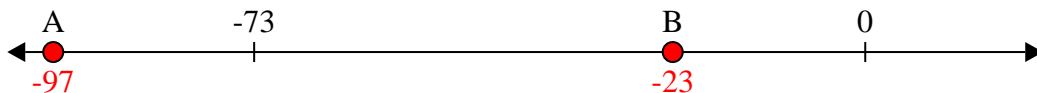
1) Which letter best shows -30?




2) Which letter best shows -51?




3) Which letter best shows -97?




4) Which letter best shows -117?




5) Which letter best shows -32?




6) Which letter best shows -28?



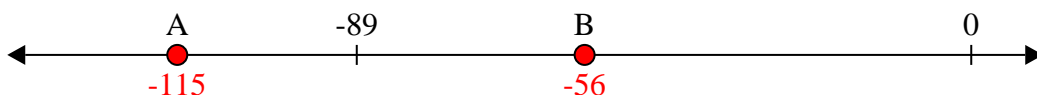
7) Which letter best shows -110?



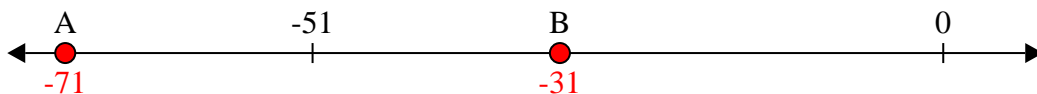
8) Which letter best shows -88?



9) Which letter best shows -115?



10) Which letter best shows -31?



Answers

1. **B**

2. **B**

3. **A**

4. **A**

5. **B**

6. **B**

7. **A**

8. **A**

9. **A**

10. **B**