




Solve each problem.


Answers

1) Which letter best shows -29?




1. _____

2) Which letter best shows -120?




2. _____

3) Which letter best shows -118?




3. _____

4) Which letter best shows -14?




4. _____

5) Which letter best shows -109?




5. _____

6) Which letter best shows -28?




6. _____

7) Which letter best shows -21?




7. _____

8) Which letter best shows -14?




8. _____

9) Which letter best shows -13?



9. _____

10) Which letter best shows -114?

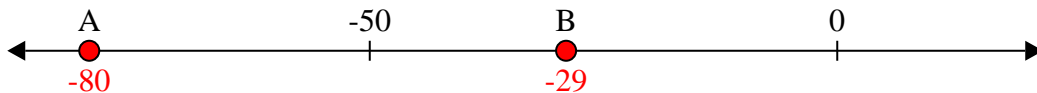


10. _____

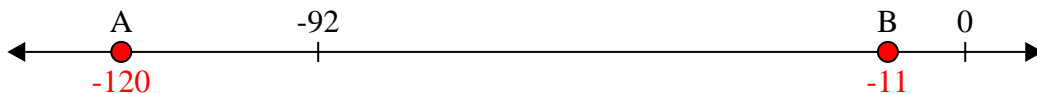


Solve each problem.

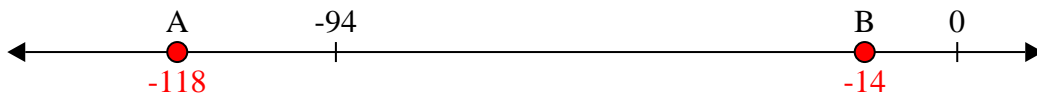
1) Which letter best shows -29?




2) Which letter best shows -120?




3) Which letter best shows -118?




4) Which letter best shows -14?




5) Which letter best shows -109?




6) Which letter best shows -28?




7) Which letter best shows -21?




8) Which letter best shows -14?



9) Which letter best shows -13?



10) Which letter best shows -114?



Answers

1. **B**

2. **A**

3. **A**

4. **B**

5. **A**

6. **B**

7. **B**

8. **B**

9. **B**

10. **A**