




Solve each problem.

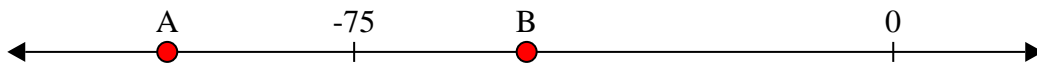
**Answers**

1) Which letter best shows -24?




1. \_\_\_\_\_

2) Which letter best shows -101?



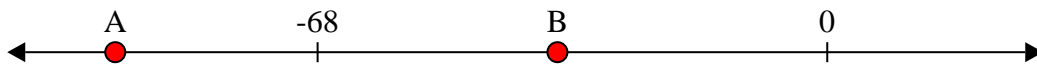
2. \_\_\_\_\_

3) Which letter best shows -83?



3. \_\_\_\_\_

4) Which letter best shows -95?




4. \_\_\_\_\_

5) Which letter best shows -86?



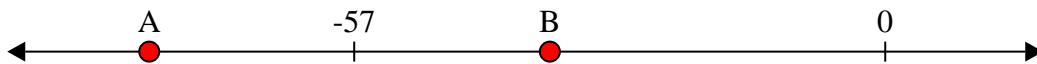
5. \_\_\_\_\_

6) Which letter best shows -112?




6. \_\_\_\_\_

7) Which letter best shows -79?




7. \_\_\_\_\_

8) Which letter best shows -10?



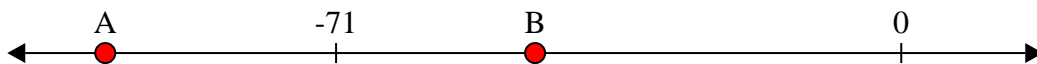
8. \_\_\_\_\_

9) Which letter best shows -27?



9. \_\_\_\_\_

10) Which letter best shows -100?




10. \_\_\_\_\_

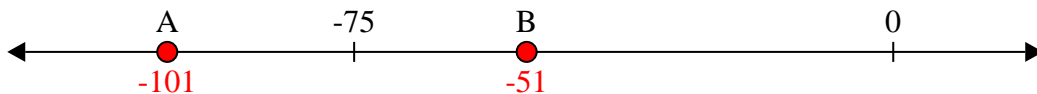


Solve each problem.

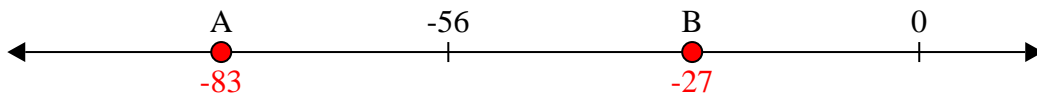
1) Which letter best shows -24?



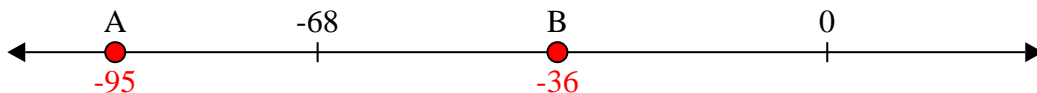
2) Which letter best shows -101?




3) Which letter best shows -83?




4) Which letter best shows -95?



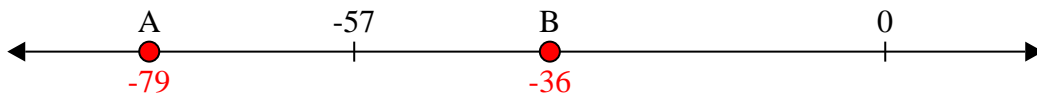
5) Which letter best shows -86?




6) Which letter best shows -112?




7) Which letter best shows -79?



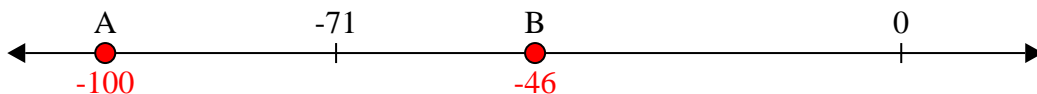
8) Which letter best shows -10?



9) Which letter best shows -27?



10) Which letter best shows -100?



**Answers**

1. **B**

2. **A**

3. **A**

4. **A**

5. **A**

6. **A**

7. **A**

8. **B**

9. **B**

10. **A**