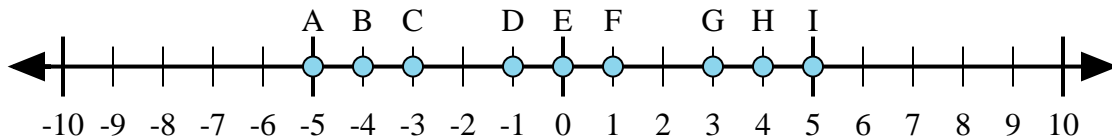




Determine which letter in the numberline best represents the answer to each problem.

Answers



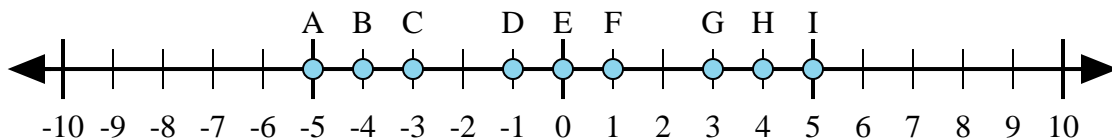
1) $(-4) + (-1) =$

2) $(-4) + 1 =$

3) $1 + (-4) =$

4) $4 + (-1) =$

5) $4 + 1 =$



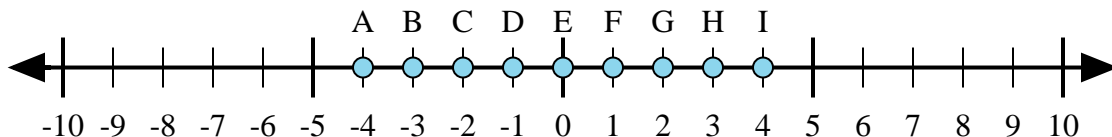
6) $4 + (-1) =$

7) $1 + 4 =$

8) $(-4) + 1 =$

9) $(-1) + 4 =$

10) $1 + (-4) =$



11) $3 + (-1) =$

12) $(-3) + (-1) =$

13) $(-3) + 1 =$

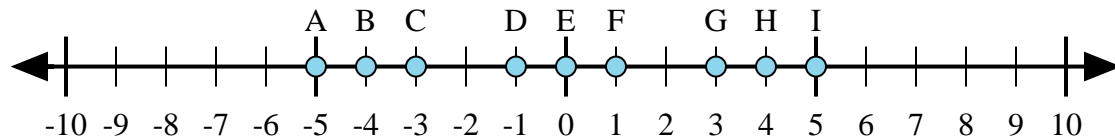
14) $1 + (-3) =$

15) $(-1) + 3 =$

1. _____
2. _____
3. _____
4. _____
5. _____
6. _____
7. _____
8. _____
9. _____
10. _____
11. _____
12. _____
13. _____
14. _____
15. _____



Determine which letter in the numberline best represents the answer to each problem.



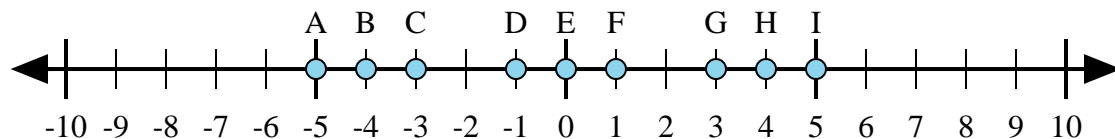
1) $(-4) + (-1) =$

2) $(-4) + 1 =$

3) $1 + (-4) =$

4) $4 + (-1) =$

5) $4 + 1 =$



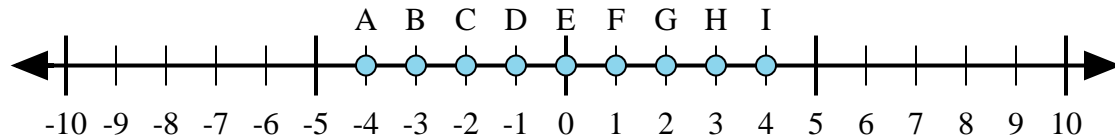
6) $4 + (-1) =$

7) $1 + 4 =$

8) $(-4) + 1 =$

9) $(-1) + 4 =$

10) $1 + (-4) =$



11) $3 + (-1) =$

12) $(-3) + (-1) =$

13) $(-3) + 1 =$

14) $1 + (-3) =$

15) $(-1) + 3 =$

Answers

1. A

2. C

3. C

4. G

5. I

6. G

7. I

8. C

9. G

10. C

11. G

12. A

13. C

14. C

15. G