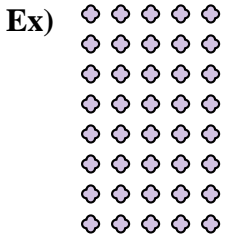




Write each array as a multiplication problem and solve.

Answers



Ex. 8 x 5 = 40

1. \_\_\_\_\_

2. \_\_\_\_\_

3. \_\_\_\_\_

4. \_\_\_\_\_





5. \_\_\_\_\_

6. \_\_\_\_\_

7. \_\_\_\_\_

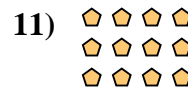

8. \_\_\_\_\_

9. \_\_\_\_\_



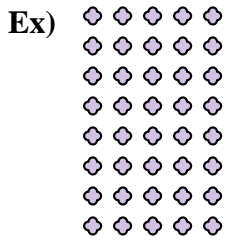
10. \_\_\_\_\_

11. \_\_\_\_\_





Write each array as a multiplication problem and solve.



Answers

Ex.  $8 \times 5 = 40$

1.  $9 \times 3 = 27$

2.  $4 \times 5 = 20$

3.  $5 \times 8 = 40$

4.  $10 \times 2 = 20$

5.  $5 \times 6 = 30$

6.  $9 \times 5 = 45$

7.  $8 \times 2 = 16$

8.  $7 \times 8 = 56$

9.  $2 \times 4 = 8$

10.  $10 \times 4 = 40$

11.  $3 \times 4 = 12$

