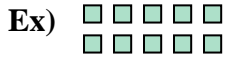






Write each array as a multiplication problem and solve.



Answers



Ex. 2 × 5 = 10

1. 6 × 10 = 60

2. 3 × 7 = 21

3. 10 × 3 = 30

4. 3 × 8 = 24




5. 7 × 3 = 21

6. 9 × 5 = 45

7. 9 × 6 = 54

8. 4 × 10 = 40



9. 6 × 9 = 54

10. 6 × 5 = 30

11. 2 × 3 = 6

