
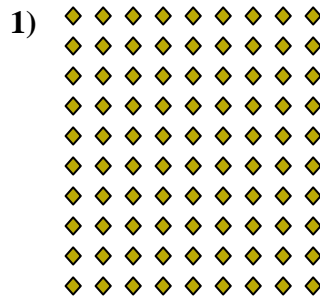







Write each array as a multiplication problem and solve.



Answers

Ex. 6 × 3 = 18

1. 10 × 8 = 80

2. 8 × 5 = 40

3. 5 × 2 = 10

4. 8 × 4 = 32

5. 9 × 10 = 90

6. 3 × 2 = 6

7. 4 × 9 = 36

8. 10 × 3 = 30

9. 10 × 7 = 70

10. 2 × 8 = 16

11. 3 × 4 = 12

