



Express each set as a multiplication problem.

Answers

Ex)

Ex. $9 \times 4 = 36$

1)

1. _____

2. _____

2)

3. _____

4. _____

3)

5. _____

6. _____

4)

7. _____

8. _____

5)


6)

7)

8)

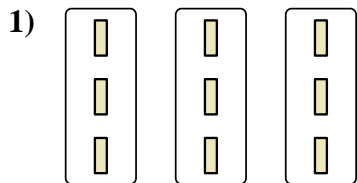


Express each set as a multiplication problem.




Answers


Ex. 9×4=36



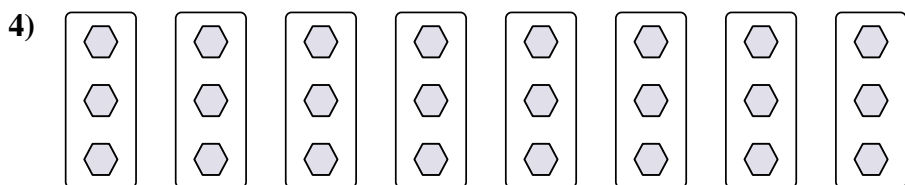
1. 3×3=9



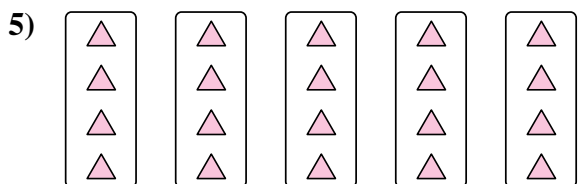
2. 6×2=12



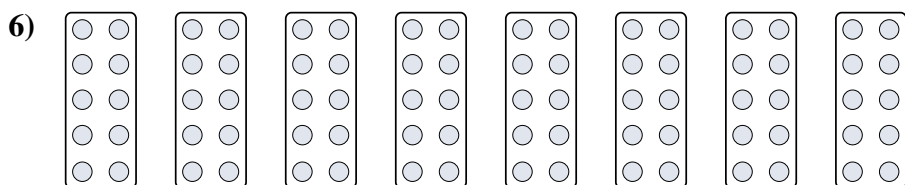
3. 9×3=27



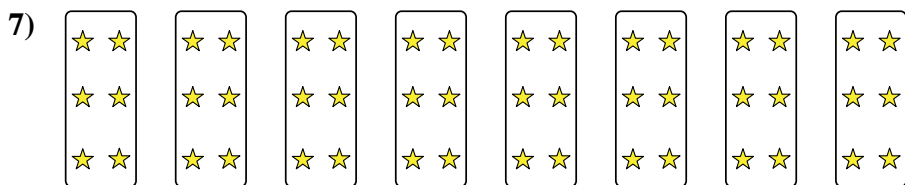
4. 8×3=24



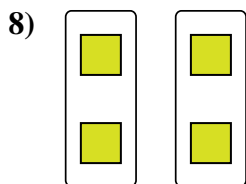
5. 5×4=20



6. 8×10=80



7. 8×6=48



8. 2×2=4