


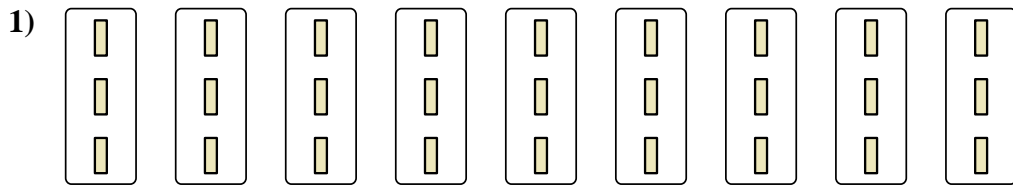


Express each set as a multiplication problem.


**Answers**




Ex. **7×9=63**



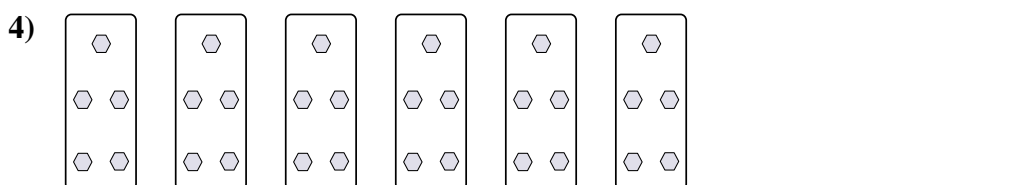
1. \_\_\_\_\_



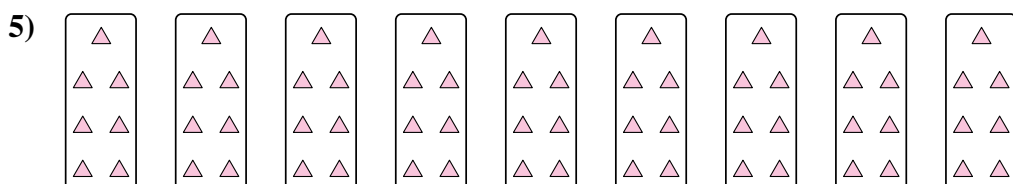
2. \_\_\_\_\_



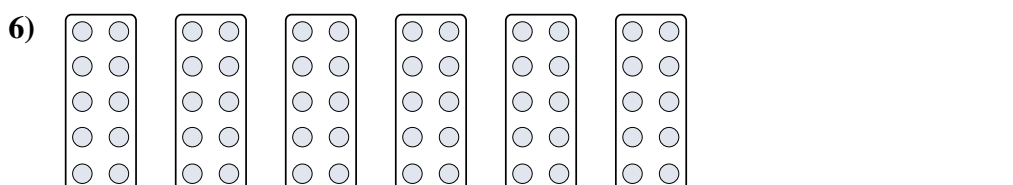
3. \_\_\_\_\_




4. \_\_\_\_\_




5. \_\_\_\_\_



6. \_\_\_\_\_




7. \_\_\_\_\_



8. \_\_\_\_\_

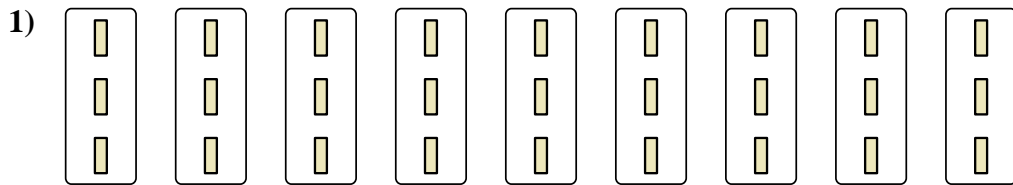


Express each set as a multiplication problem.




Answers

Ex. 7×9=63




1. 9×3=27

2. 6×2=12



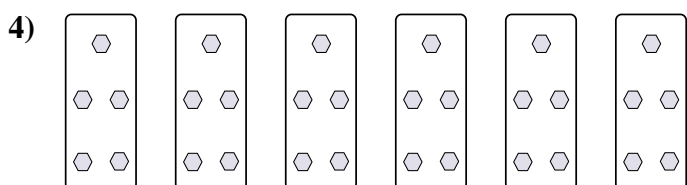
3. 9×4=36

4. 6×5=30





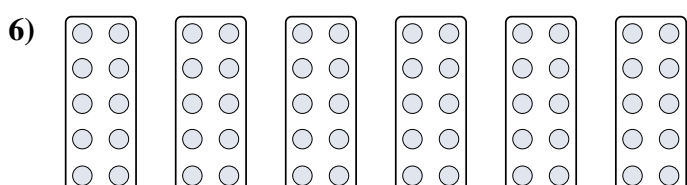
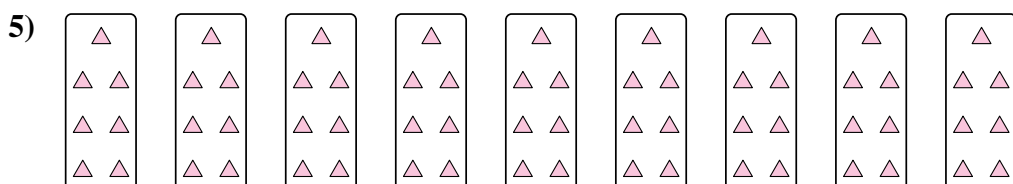
5. 9×7=63

6. 6×10=60




7. 7×6=42

8. 4×10=40



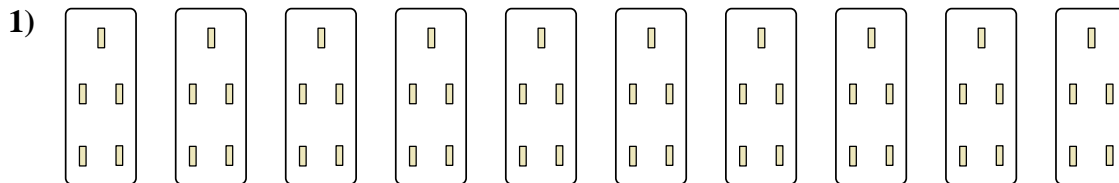


Express each set as a multiplication problem.



**Answers**

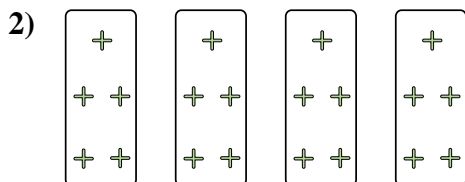
Ex.  $5 \times 8 = 40$



1. \_\_\_\_\_

2. \_\_\_\_\_


3. \_\_\_\_\_



4. \_\_\_\_\_

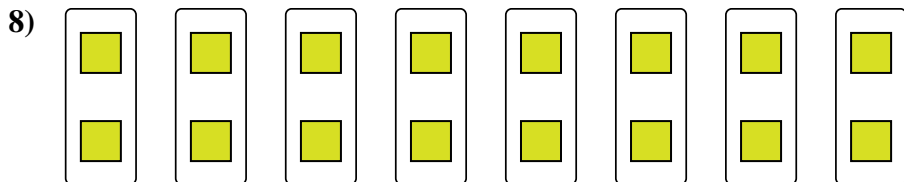
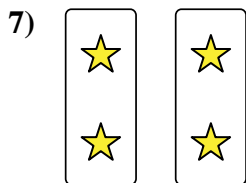
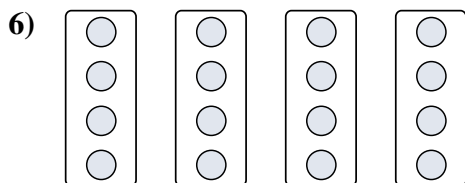
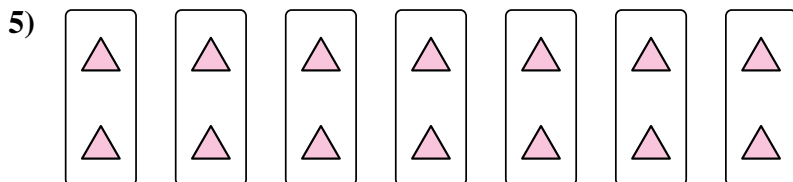
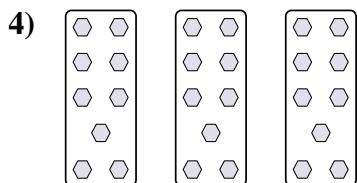
5. \_\_\_\_\_

6. \_\_\_\_\_




7. \_\_\_\_\_

8. \_\_\_\_\_

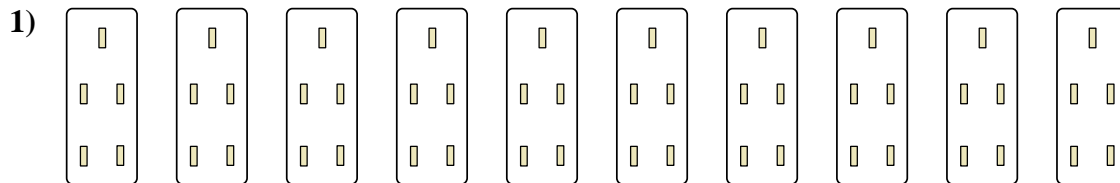




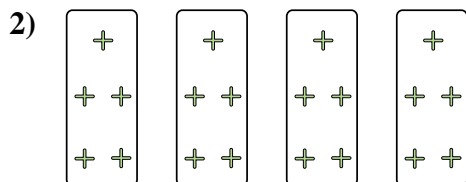
Express each set as a multiplication problem.



Ex. 5 × 8 = 40




1. 10 × 5 = 50



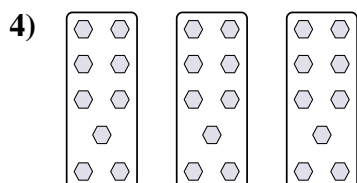
2. 4 × 5 = 20

3. 2 × 8 = 16



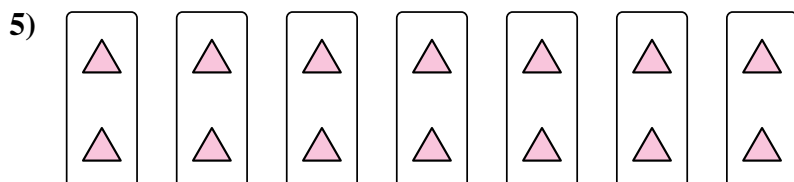
4. 3 × 9 = 27

5. 7 × 2 = 14

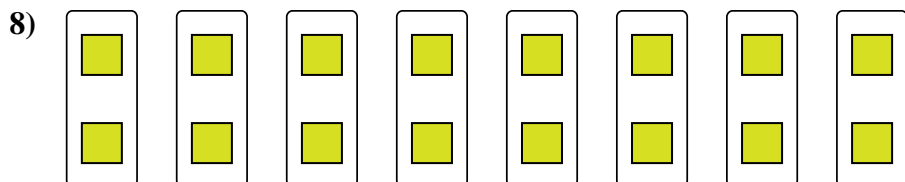
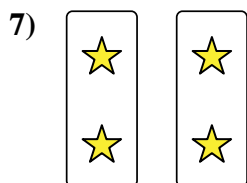
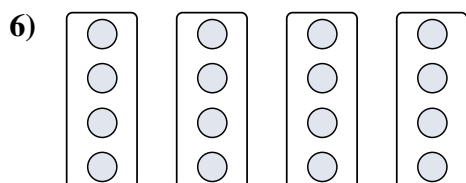


6. 4 × 4 = 16

7. 2 × 2 = 4



8. 8 × 2 = 16

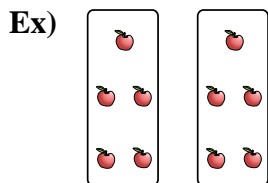


Answers

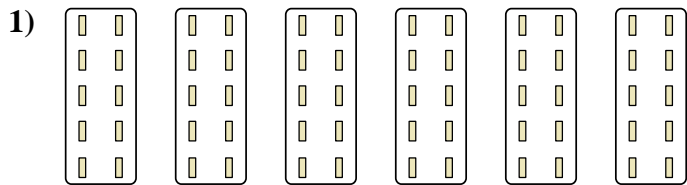


Express each set as a multiplication problem.

Answers



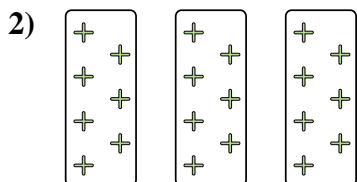
Ex.  $2 \times 5 = 10$



1. \_\_\_\_\_


2. \_\_\_\_\_

3. \_\_\_\_\_



4. \_\_\_\_\_



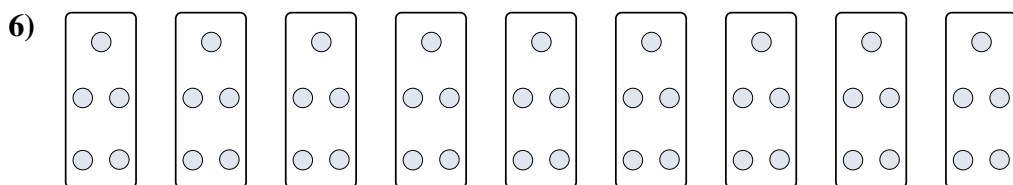
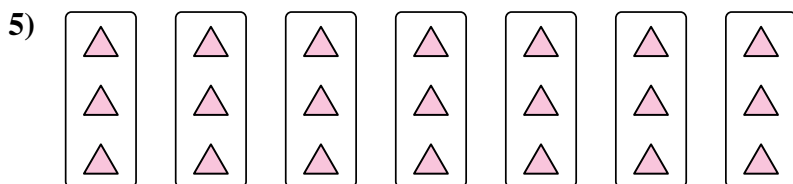
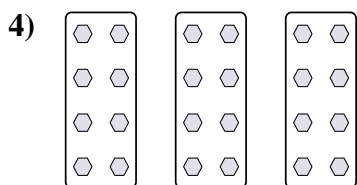
5. \_\_\_\_\_



6. \_\_\_\_\_

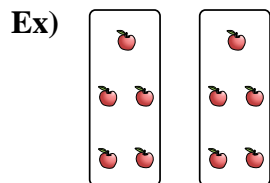
7. \_\_\_\_\_

8. \_\_\_\_\_

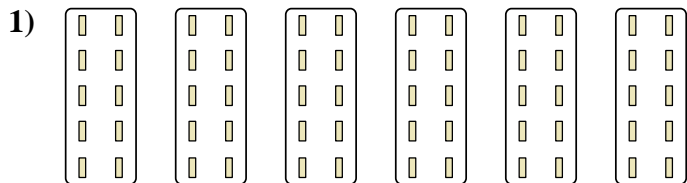




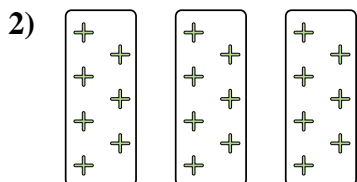
Express each set as a multiplication problem.



Ex.  $2 \times 5 = 10$




1.  $6 \times 10 = 60$



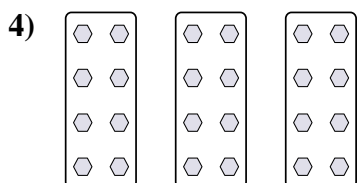
2.  $3 \times 7 = 21$

3.  $10 \times 3 = 30$



4.  $3 \times 8 = 24$


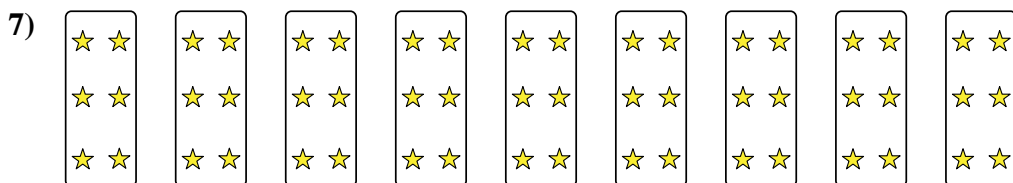
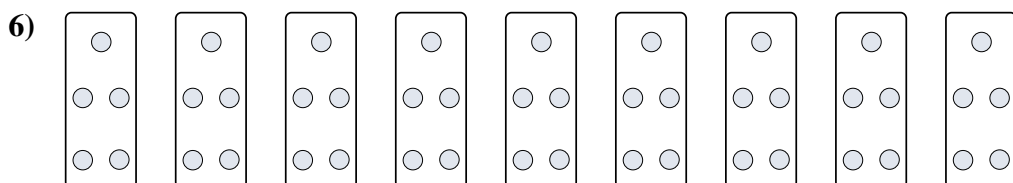
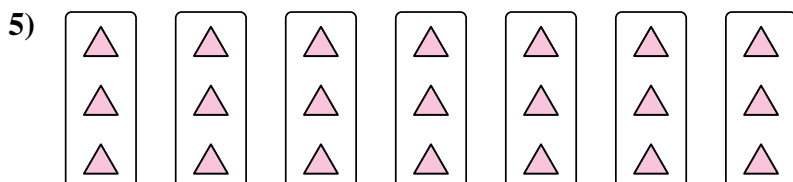
5.  $7 \times 3 = 21$



6.  $9 \times 5 = 45$

7.  $9 \times 6 = 54$

8.  $4 \times 10 = 40$






Express each set as a multiplication problem.

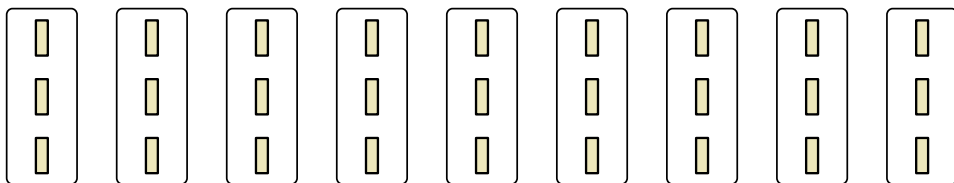
Answers

Ex)



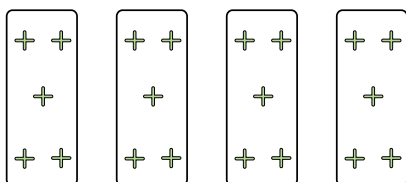
Ex.  $8 \times 5 = 40$

1)



1. \_\_\_\_\_


2)



2. \_\_\_\_\_

3. \_\_\_\_\_

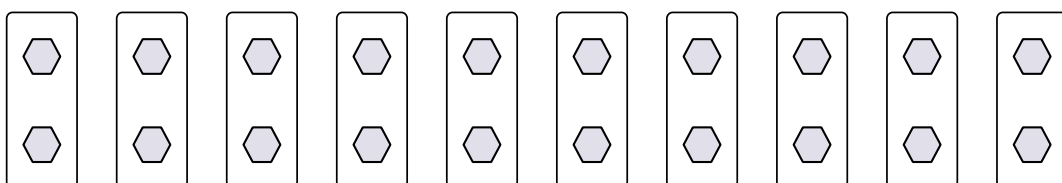
3)



4. \_\_\_\_\_

5. \_\_\_\_\_

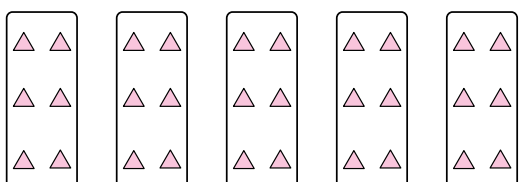
4)



6. \_\_\_\_\_

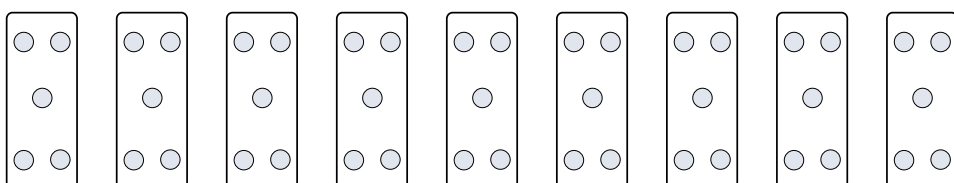
7. \_\_\_\_\_

5)




8. \_\_\_\_\_


6)



7)




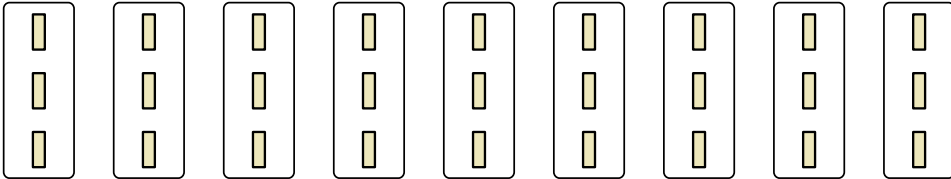
8)

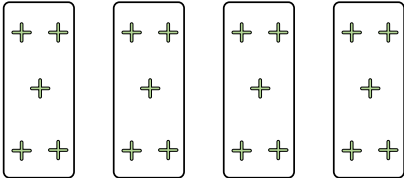





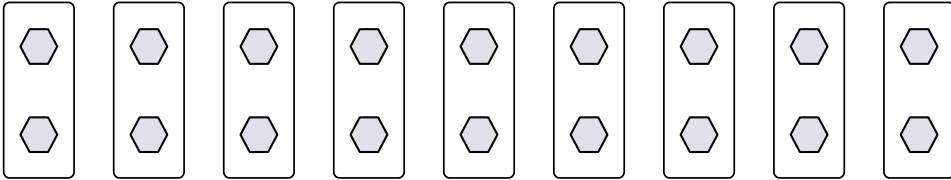
Express each set as a multiplication problem.

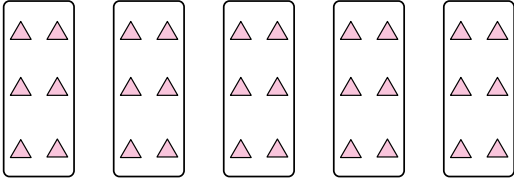
Ex) 

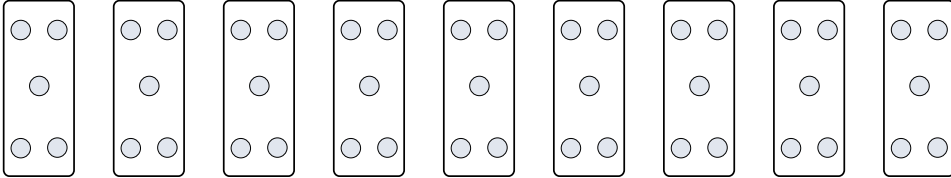
1) 


2) 


3) 

4) 

5) 

6) 

7) 

8) 

Answers

Ex.  $8 \times 5 = 40$

1.  $9 \times 3 = 27$

2.  $4 \times 5 = 20$

3.  $5 \times 8 = 40$

4.  $10 \times 2 = 20$

5.  $5 \times 6 = 30$

6.  $9 \times 5 = 45$

7.  $8 \times 2 = 16$


8.  $7 \times 8 = 56$



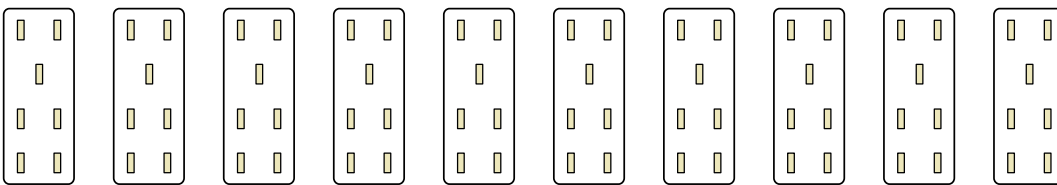


Express each set as a multiplication problem.

Answers

Ex) 

Ex.  $10 \times 10 = 100$

1) 

1. \_\_\_\_\_


2. \_\_\_\_\_

3. \_\_\_\_\_

2) 

4. \_\_\_\_\_

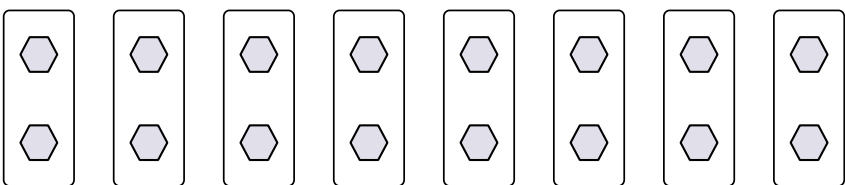
5. \_\_\_\_\_

3) 

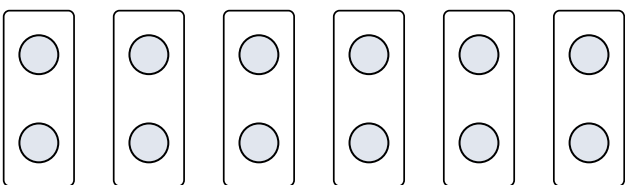
6. \_\_\_\_\_

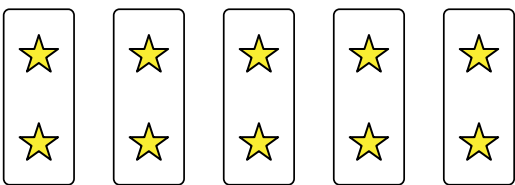
7. \_\_\_\_\_


8. \_\_\_\_\_

4) 

5) 


6) 

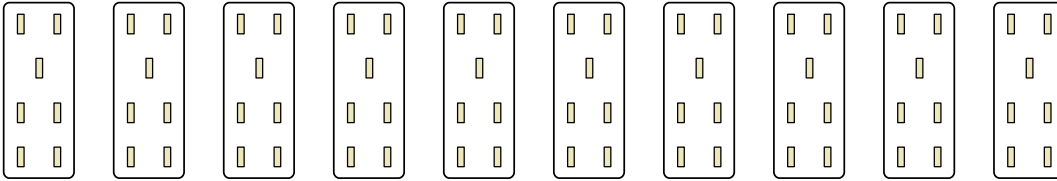
7) 


8) 




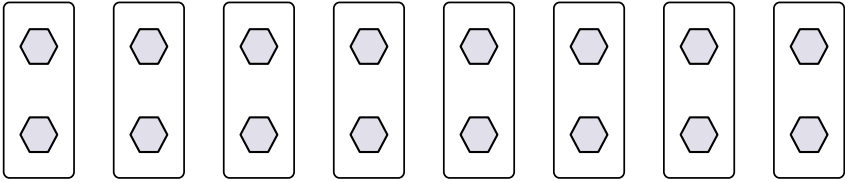
Express each set as a multiplication problem.

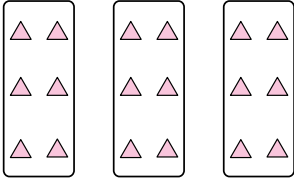
Ex) 

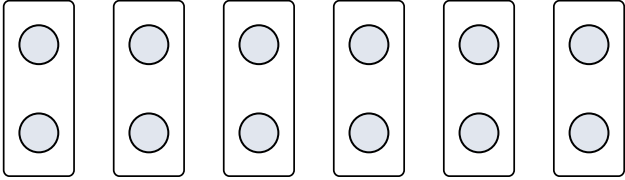
1) 

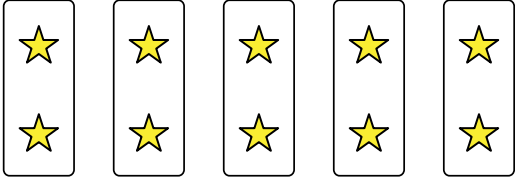
2) 

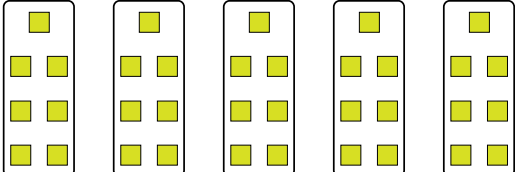
3) 

4) 

5) 

6) 

7) 

8) 

Answers

Ex.  $10 \times 10 = 100$

1.  $10 \times 7 = 70$

2.  $4 \times 7 = 28$

3.  $10 \times 6 = 60$

4.  $8 \times 2 = 16$

5.  $3 \times 6 = 18$

6.  $6 \times 2 = 12$

7.  $5 \times 2 = 10$

8.  $5 \times 7 = 35$



Express each set as a multiplication problem.

Answers

Ex)

Ex.  $9 \times 6 = 54$

1)

1. \_\_\_\_\_

2)

2. \_\_\_\_\_

3)

3. \_\_\_\_\_

4)

4. \_\_\_\_\_

5)

5. \_\_\_\_\_

6)

6. \_\_\_\_\_

7)

7. \_\_\_\_\_


8)

8. \_\_\_\_\_

8. \_\_\_\_\_

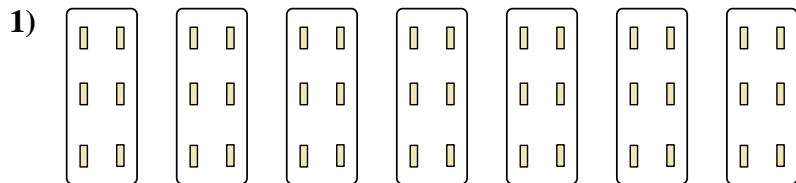


Express each set as a multiplication problem.



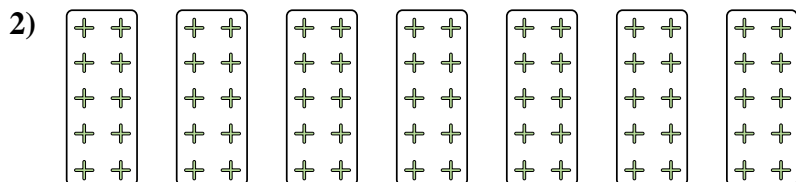
Answers

Ex. 9×6=54




1. 7×6=42

2. 7×10=70



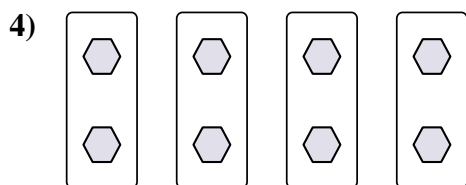
3. 8×2=16

4. 4×2=8





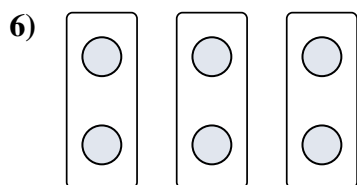
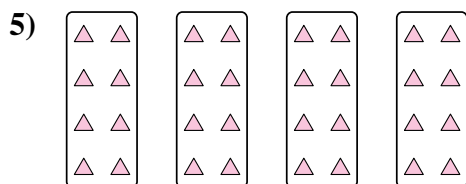
5. 4×8=32

6. 3×2=6



7. 10×7=70

8. 4×10=40





Express each set as a multiplication problem.

Answers

Ex)

Ex.  $7 \times 7 = 49$

1)

1. \_\_\_\_\_

2. \_\_\_\_\_

2)

3. \_\_\_\_\_

4. \_\_\_\_\_

3)

5. \_\_\_\_\_

6. \_\_\_\_\_

4)

7. \_\_\_\_\_

8. \_\_\_\_\_

5)

6)

7)

8)



Express each set as a multiplication problem.

Ex)

Answers

Ex. 7×7=49

1)

1. 8×6=48

2. 6×8=48

2)

3. 5×2=10

4. 10×8=80

3)

5. 8×2=16

6. 9×10=90

4)

7. 3×8=24

8. 8×9=72

5)

6)

7)

8)



Express each set as a multiplication problem.

**Answers**

Ex)

Ex.  $6 \times 7 = 42$

1)

1. \_\_\_\_\_  
2. \_\_\_\_\_

2)

3. \_\_\_\_\_  
4. \_\_\_\_\_

3)

5. \_\_\_\_\_  
6. \_\_\_\_\_

4)

7. \_\_\_\_\_  
8. \_\_\_\_\_

5)


6)

7)

8)

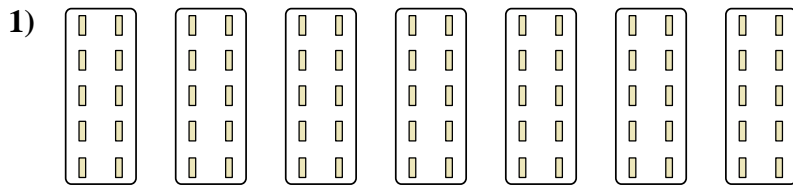


Express each set as a multiplication problem.



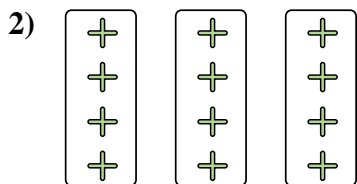
Answers

Ex. 6x7=42




1. 7x10=70

2. 3x4=12



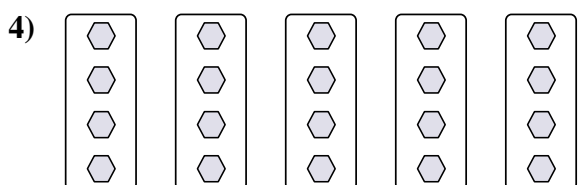
3. 3x7=21

4. 5x4=20





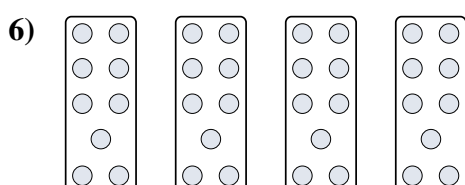
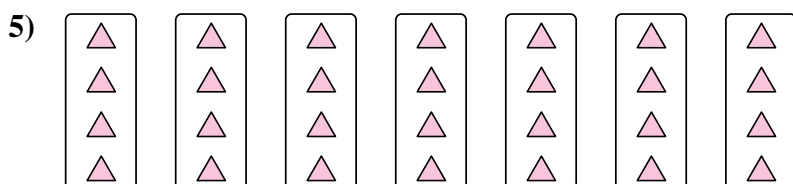
5. 7x4=28

6. 4x9=36



7. 4x10=40

8. 2x8=16







Express each set as a multiplication problem.

Answers

Ex)

Ex.  $9 \times 5 = 45$

1)

1. \_\_\_\_\_

2. \_\_\_\_\_

2)

3. \_\_\_\_\_

4. \_\_\_\_\_

3)

5. \_\_\_\_\_

6. \_\_\_\_\_

4)

7. \_\_\_\_\_

8. \_\_\_\_\_

5)

6)

7)

8)



Express each set as a multiplication problem.

Ex)

Answers

Ex. 9×5=45

1)

1. 8×2=16

2. 6×9=54

2)

3. 3×7=21

4. 2×9=18

3)

5. 3×4=12

6. 8×10=80

4)

7. 10×9=90

8. 2×10=20

5)


6)

7)

8)

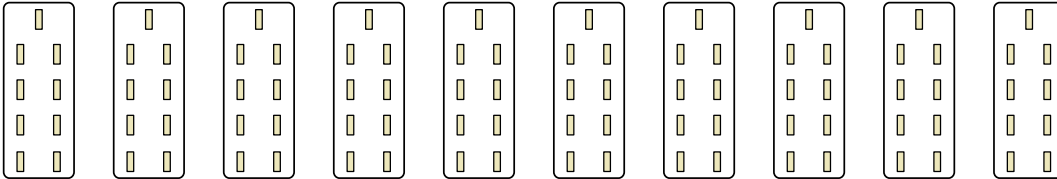


Express each set as a multiplication problem.

Ex) 

Answers

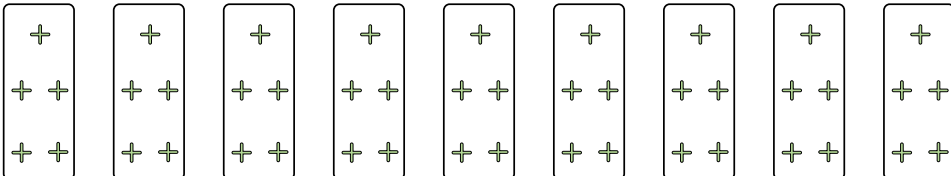
Ex.  $6 \times 3 = 18$

1) 

1. \_\_\_\_\_

2. \_\_\_\_\_


3. \_\_\_\_\_

2) 

4. \_\_\_\_\_

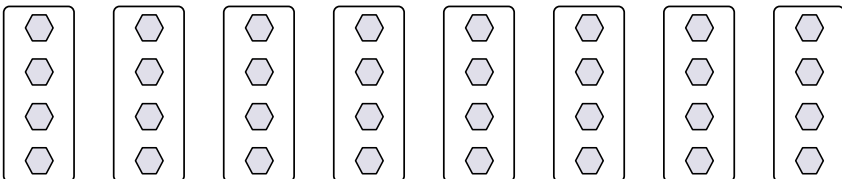
5. \_\_\_\_\_

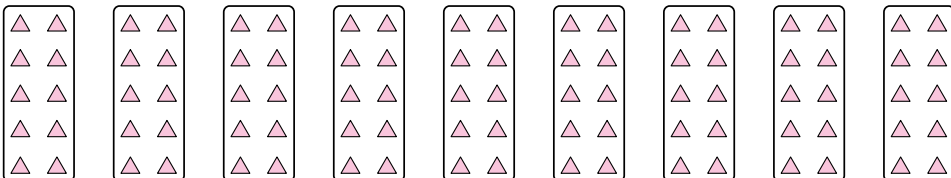
6. \_\_\_\_\_

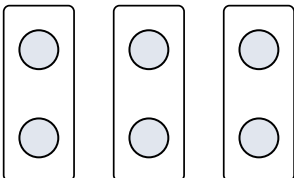
3) 


7. \_\_\_\_\_

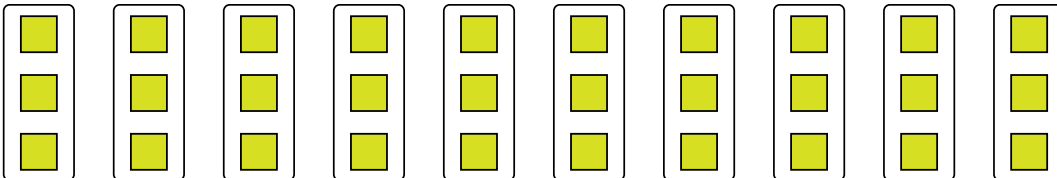
8. \_\_\_\_\_

4) 

5) 


6) 

7) 

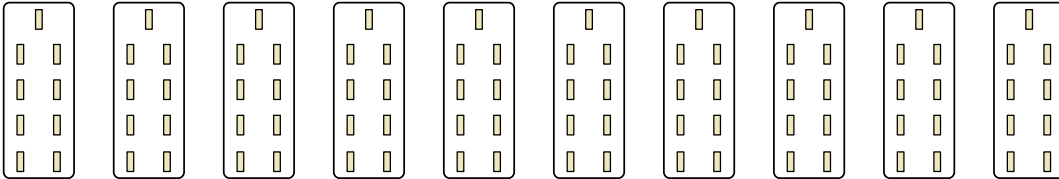
8) 



Express each set as a multiplication problem.

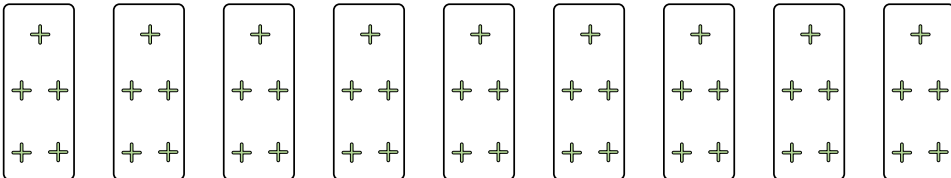
Ex) 

Ex.  $6 \times 3 = 18$

1) 


1.  $10 \times 9 = 90$

2.  $9 \times 5 = 45$

2) 

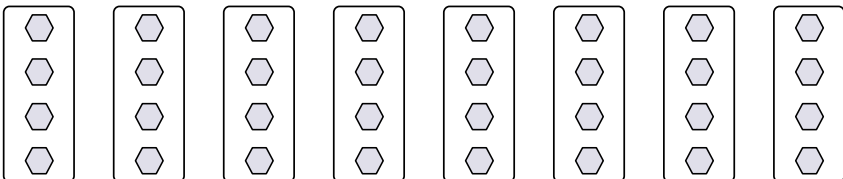
3.  $5 \times 2 = 10$

4.  $8 \times 4 = 32$

3) 

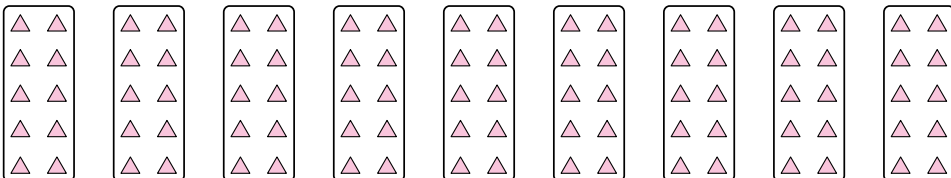
5.  $9 \times 10 = 90$

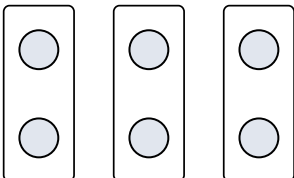
6.  $3 \times 2 = 6$


4) 

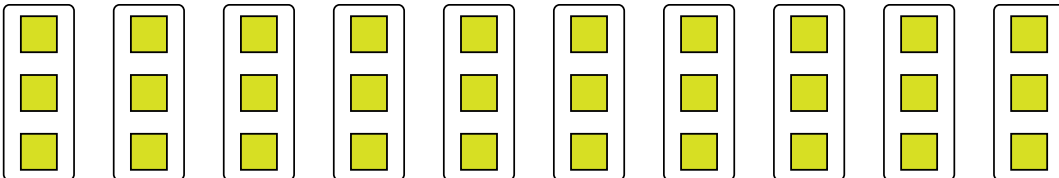
7.  $4 \times 9 = 36$

8.  $10 \times 3 = 30$

5) 

6) 

7) 

8) 

Answers

Ex.  $6 \times 3 = 18$

1.  $10 \times 9 = 90$

2.  $9 \times 5 = 45$

3.  $5 \times 2 = 10$

4.  $8 \times 4 = 32$

5.  $9 \times 10 = 90$

6.  $3 \times 2 = 6$

7.  $4 \times 9 = 36$

8.  $10 \times 3 = 30$