





Use the array provided to solve each problem.


1)  $30 \times 21 =$




2)  $20 \times 22 =$




3)  $23 \times 20 =$




4)  $20 \times 24 =$



5)  $22 \times 20 =$



6)  $28 \times 20 =$



Answers

1. \_\_\_\_\_

2. \_\_\_\_\_

3. \_\_\_\_\_

4. \_\_\_\_\_

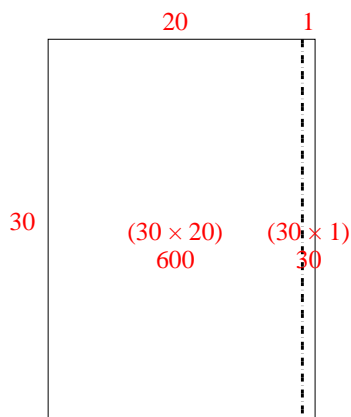
5. \_\_\_\_\_

6. \_\_\_\_\_

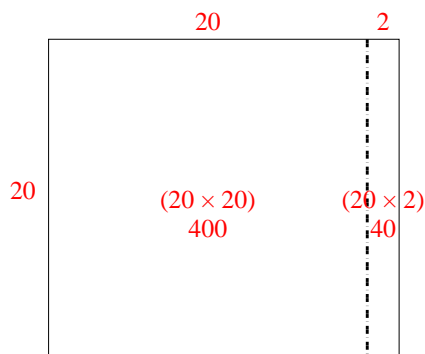


Use the array provided to solve each problem.

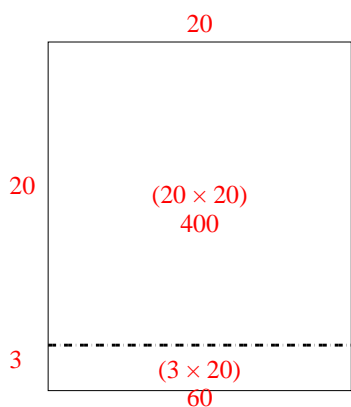
1)  $30 \times 21 =$



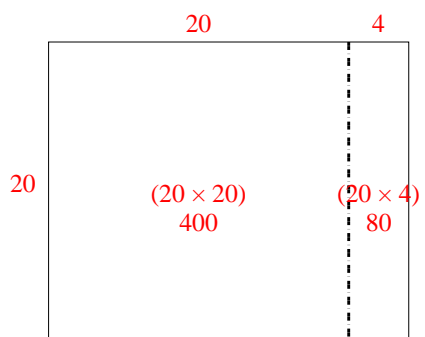
2)  $20 \times 22 =$



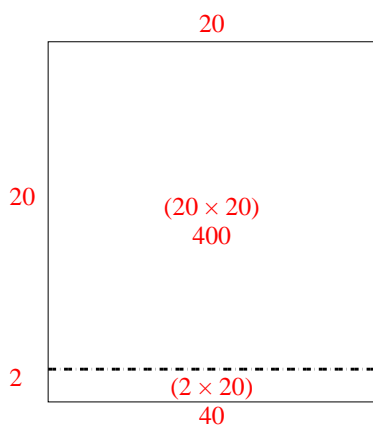
3)  $23 \times 20 =$



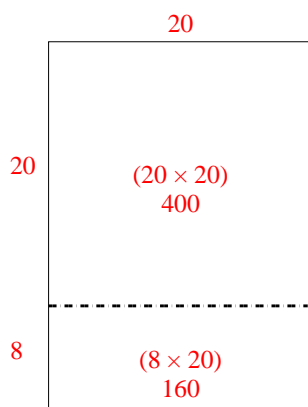
4)  $20 \times 24 =$



5)  $22 \times 20 =$



6)  $28 \times 20 =$



Answers

1. 630

2. 440

3. 460

4. 480

5. 440

6. 560