





Use the array provided to solve each problem.


1)  $39 \times 30 =$




2)  $28 \times 20 =$




3)  $21 \times 20 =$




4)  $27 \times 20 =$



5)  $20 \times 28 =$



6)  $20 \times 21 =$



Answers

1. \_\_\_\_\_

2. \_\_\_\_\_

3. \_\_\_\_\_

4. \_\_\_\_\_

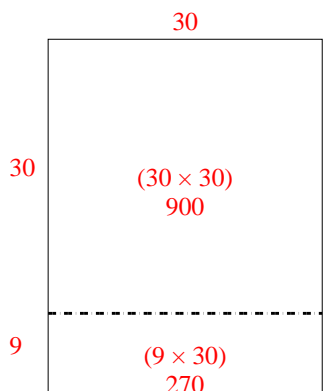
5. \_\_\_\_\_

6. \_\_\_\_\_

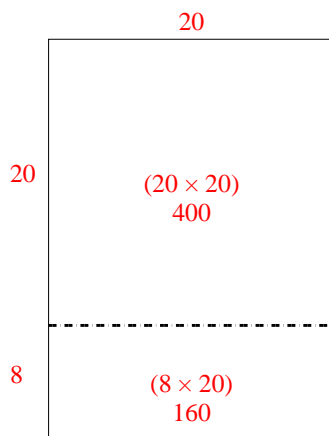


Use the array provided to solve each problem.

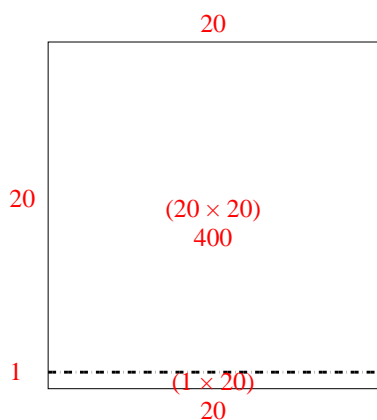
1)  $39 \times 30 =$



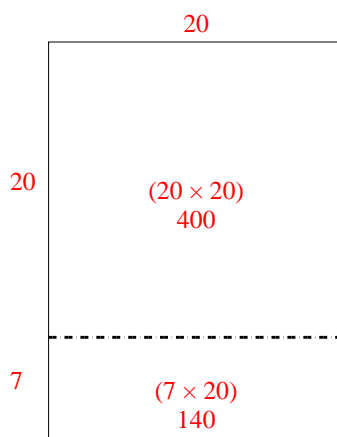
2)  $28 \times 20 =$



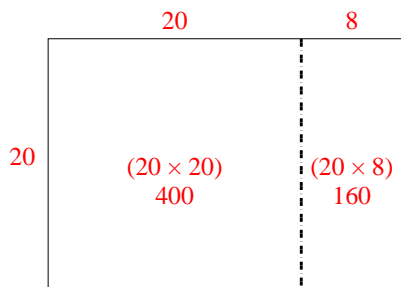
3)  $21 \times 20 =$



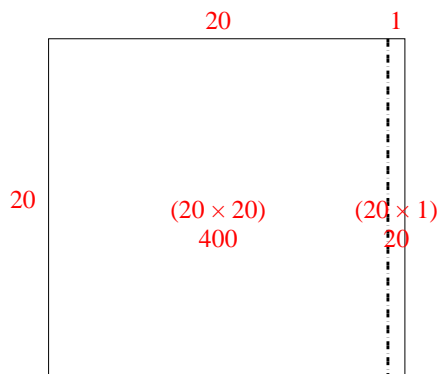
4)  $27 \times 20 =$



5)  $20 \times 28 =$



6)  $20 \times 21 =$



Answers

1. 1,170

2. 560

3. 420

4. 540


5. 560

6. 420




Use the array provided to solve each problem.


1)  $21 \times 20 =$




2)  $27 \times 20 =$




3)  $20 \times 23 =$




4)  $20 \times 27 =$



5)  $20 \times 29 =$



6)  $20 \times 25 =$



Answers

1. \_\_\_\_\_

2. \_\_\_\_\_

3. \_\_\_\_\_

4. \_\_\_\_\_

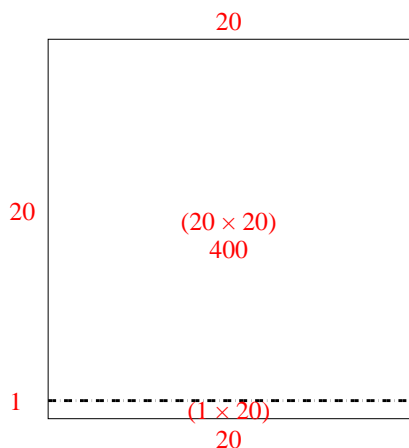
5. \_\_\_\_\_

6. \_\_\_\_\_

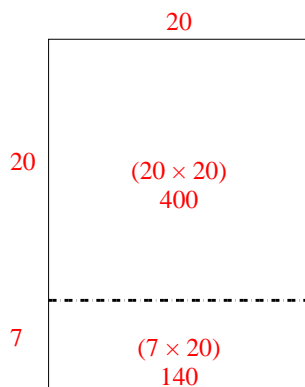


Use the array provided to solve each problem.

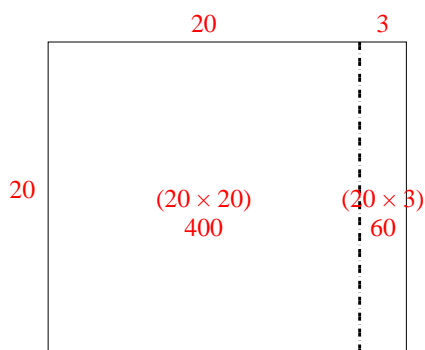
1)  $21 \times 20 =$



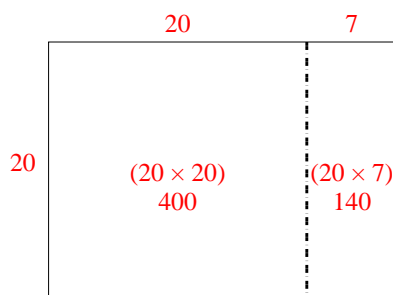
2)  $27 \times 20 =$



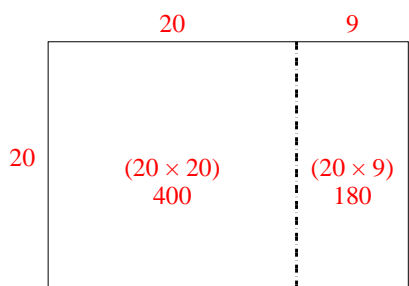
3)  $20 \times 23 =$



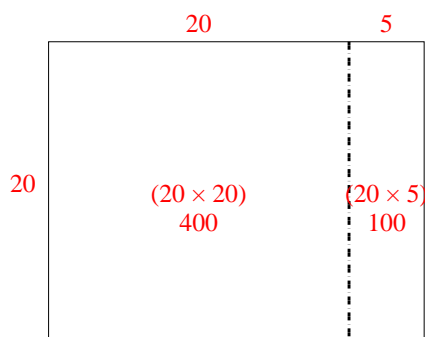
4)  $20 \times 27 =$



5)  $20 \times 29 =$



6)  $20 \times 25 =$



Answers

1. 420

2. 540

3. 460

4. 540


5. 580

6. 500




Use the array provided to solve each problem.


1)  $26 \times 20 =$




2)  $20 \times 22 =$




3)  $29 \times 20 =$




4)  $20 \times 29 =$



5)  $25 \times 20 =$



6)  $20 \times 28 =$



Answers

1. \_\_\_\_\_

2. \_\_\_\_\_

3. \_\_\_\_\_

4. \_\_\_\_\_

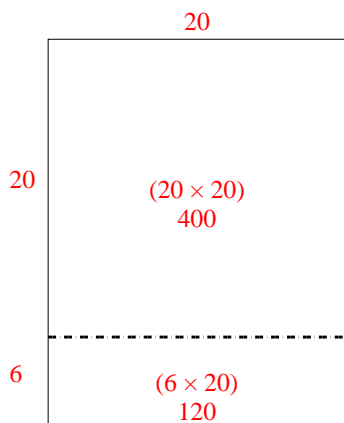
5. \_\_\_\_\_

6. \_\_\_\_\_

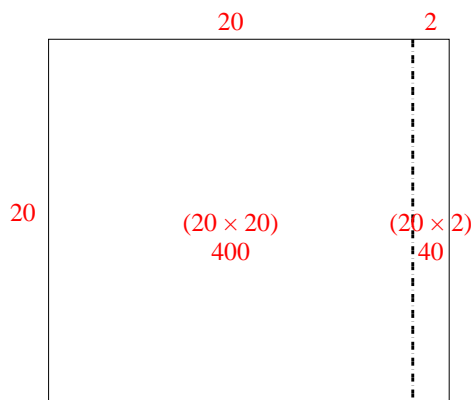


Use the array provided to solve each problem.

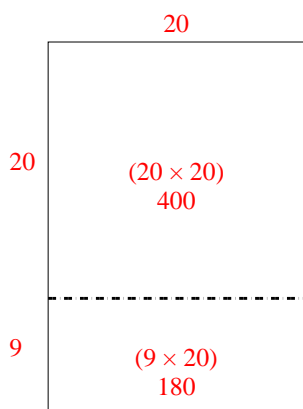
1)  $26 \times 20 =$



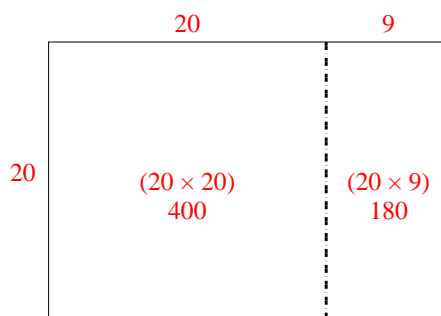
2)  $20 \times 22 =$



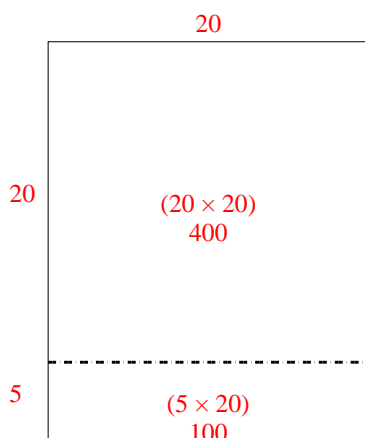
3)  $29 \times 20 =$



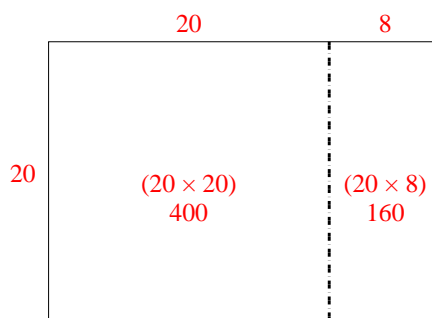
4)  $20 \times 29 =$



5)  $25 \times 20 =$



6)  $20 \times 28 =$



Answers

1. **520**

2. **440**

3. **580**

4. **580**


5. **500**

6. **560**



Use the array provided to solve each problem.


1)  $33 \times 30 =$




2)  $20 \times 23 =$




3)  $20 \times 21 =$




4)  $20 \times 27 =$



5)  $20 \times 26 =$



6)  $29 \times 20 =$



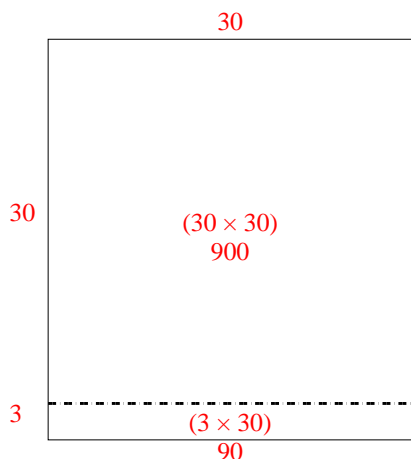
Answers

- 1. \_\_\_\_\_
- 2. \_\_\_\_\_
- 3. \_\_\_\_\_
- 4. \_\_\_\_\_
- 5. \_\_\_\_\_
- 6. \_\_\_\_\_

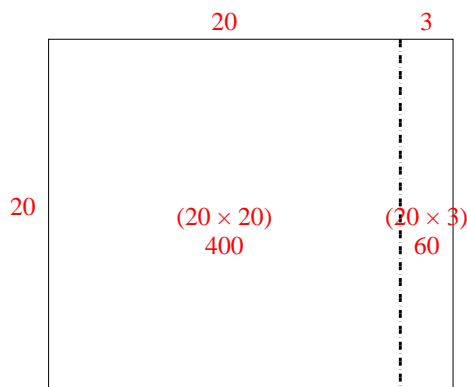


Use the array provided to solve each problem.

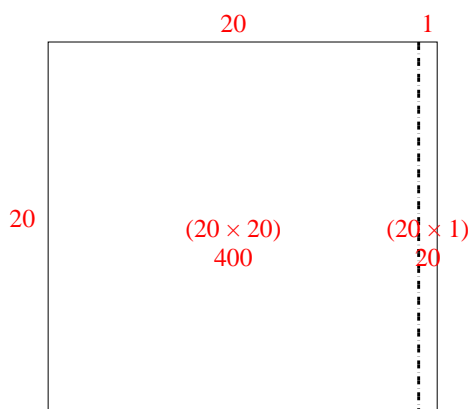
1)  $33 \times 30 =$



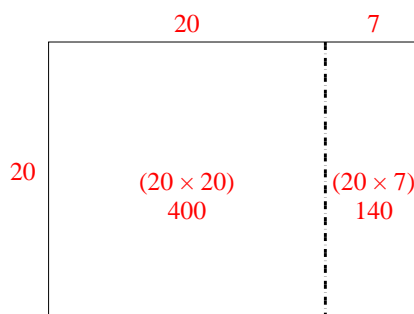
2)  $20 \times 23 =$



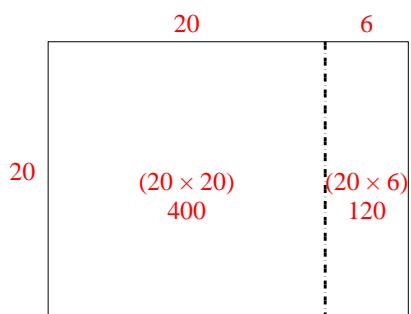
3)  $20 \times 21 =$



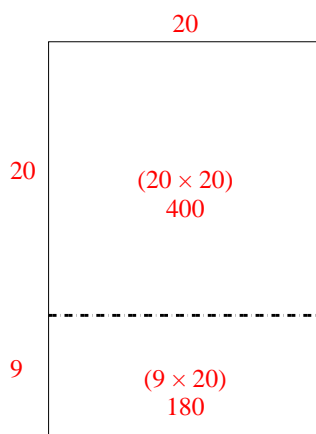
4)  $20 \times 27 =$



5)  $20 \times 26 =$



6)  $29 \times 20 =$



Answers

1. **990**

2. **460**

3. **420**

4. **540**

5. **520**


6. **580**






Use the array provided to solve each problem.


1)  $43 \times 30 =$




2)  $32 \times 30 =$




3)  $20 \times 23 =$




4)  $25 \times 20 =$



5)  $20 \times 24 =$



6)  $22 \times 20 =$



Answers

1. \_\_\_\_\_

2. \_\_\_\_\_

3. \_\_\_\_\_

4. \_\_\_\_\_

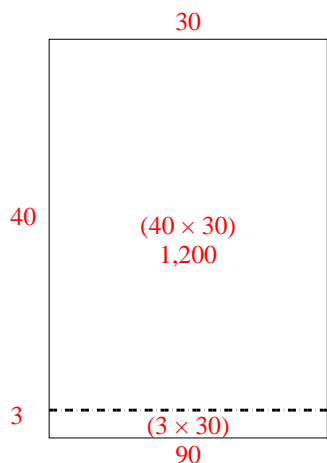
5. \_\_\_\_\_

6. \_\_\_\_\_

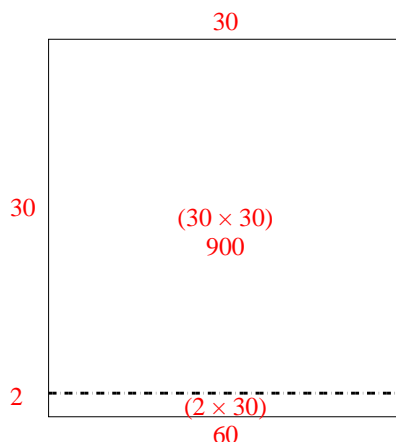


Use the array provided to solve each problem.

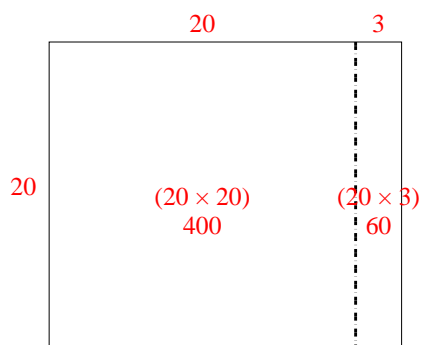
1)  $43 \times 30 =$



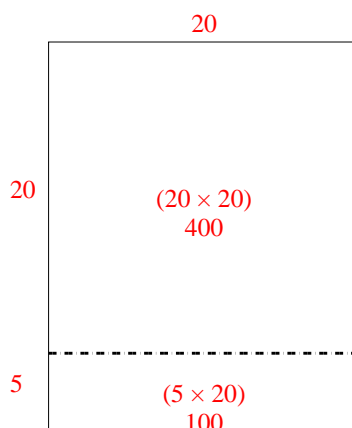
2)  $32 \times 30 =$



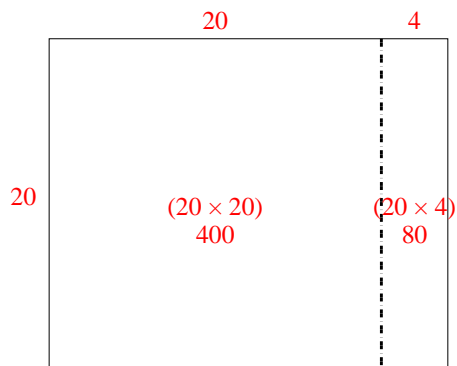
3)  $20 \times 23 =$



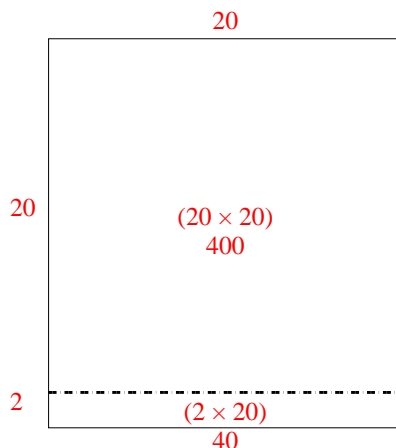
4)  $25 \times 20 =$



5)  $20 \times 24 =$



6)  $22 \times 20 =$



Answers

1. 1,290

2. 960

3. 460

4. 500


5. 480

6. 440




Use the array provided to solve each problem.


1)  $20 \times 23 =$




2)  $28 \times 20 =$




3)  $24 \times 20 =$




4)  $26 \times 20 =$



5)  $20 \times 25 =$



6)  $20 \times 24 =$



Answers

1. \_\_\_\_\_

2. \_\_\_\_\_

3. \_\_\_\_\_

4. \_\_\_\_\_

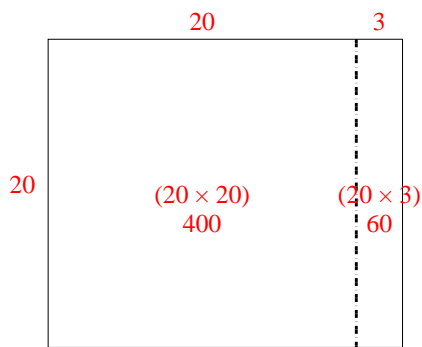
5. \_\_\_\_\_

6. \_\_\_\_\_

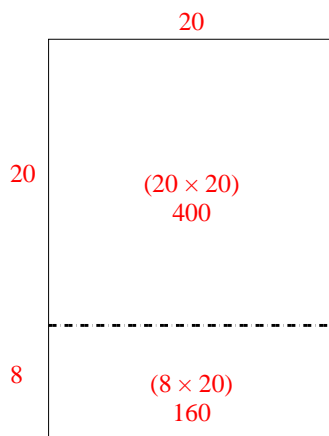


Use the array provided to solve each problem.

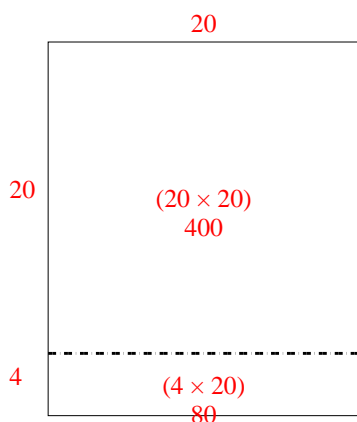
1)  $20 \times 23 =$



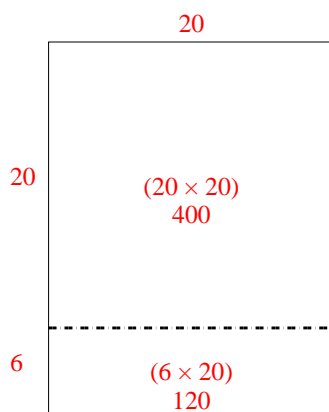
2)  $28 \times 20 =$



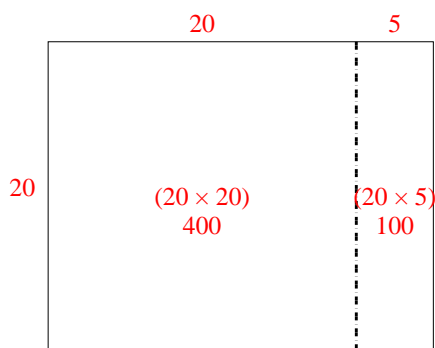
3)  $24 \times 20 =$



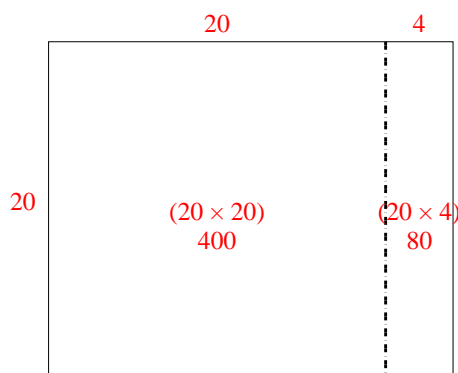
4)  $26 \times 20 =$



5)  $20 \times 25 =$



6)  $20 \times 24 =$



Answers

1. **460**

2. **560**

3. **480**

4. **520**


5. **500**

6. **480**




Use the array provided to solve each problem.


1)  $30 \times 32 =$




2)  $20 \times 23 =$




3)  $25 \times 20 =$




4)  $26 \times 20 =$



5)  $22 \times 20 =$



6)  $20 \times 21 =$



Answers

1. \_\_\_\_\_

2. \_\_\_\_\_

3. \_\_\_\_\_

4. \_\_\_\_\_

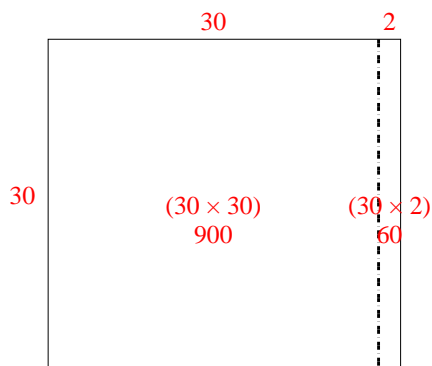
5. \_\_\_\_\_

6. \_\_\_\_\_

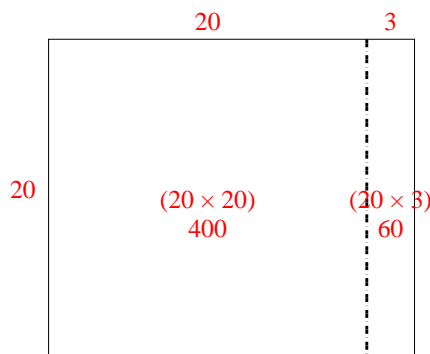


Use the array provided to solve each problem.

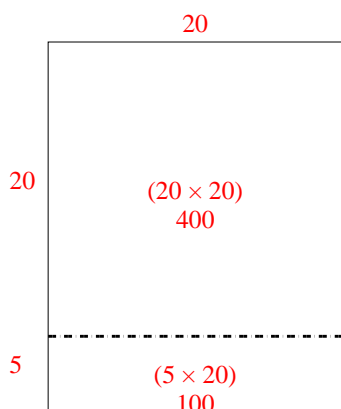
1)  $30 \times 32 =$



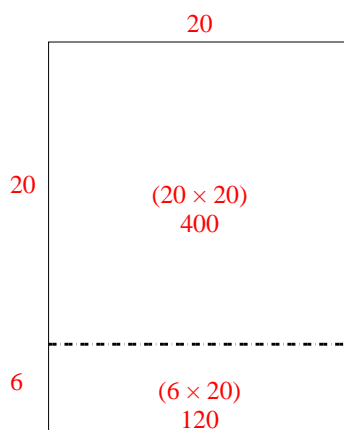
2)  $20 \times 23 =$



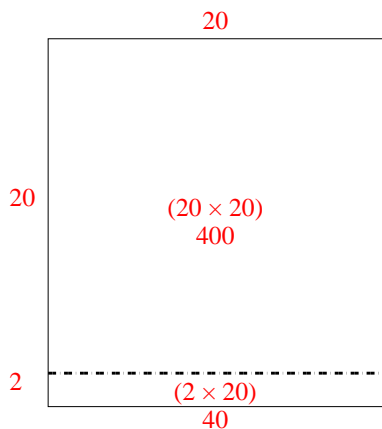
3)  $25 \times 20 =$



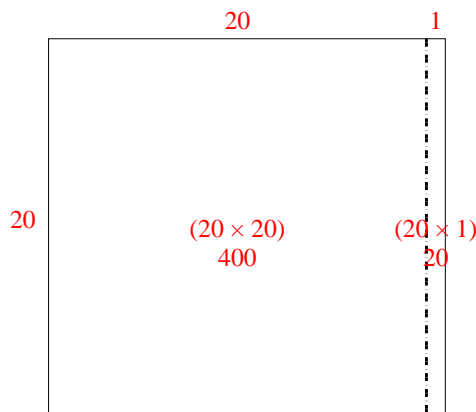
4)  $26 \times 20 =$



5)  $22 \times 20 =$



6)  $20 \times 21 =$



Answers

1. 960

2. 460

3. 500

4. 520


5. 440

6. 420




Use the array provided to solve each problem.

1)  $32 \times 20 =$




2)  $30 \times 37 =$




3)  $20 \times 22 =$




4)  $20 \times 29 =$



5)  $23 \times 20 =$



6)  $28 \times 20 =$



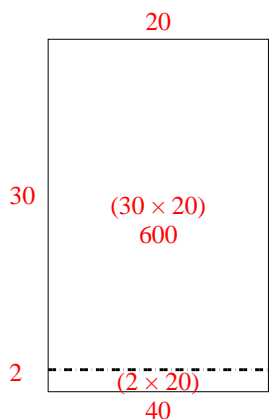
**Answers**

1. \_\_\_\_\_
2. \_\_\_\_\_
3. \_\_\_\_\_
4. \_\_\_\_\_
5. \_\_\_\_\_
6. \_\_\_\_\_

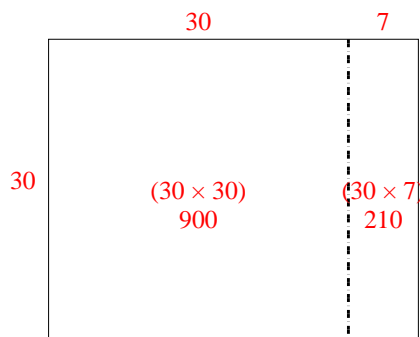


Use the array provided to solve each problem.

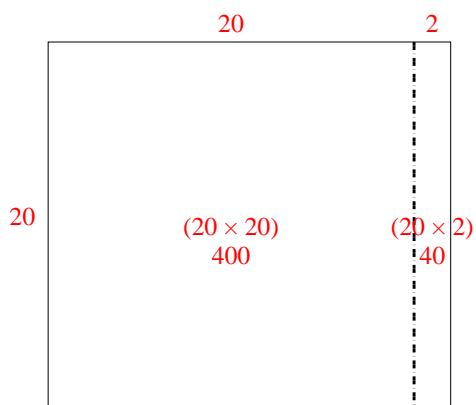
1)  $32 \times 20 =$



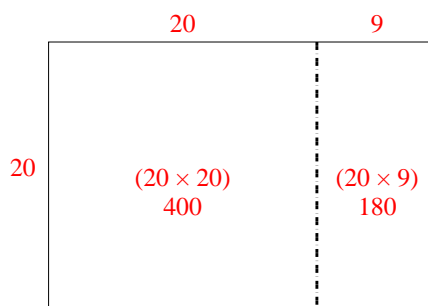
2)  $30 \times 37 =$



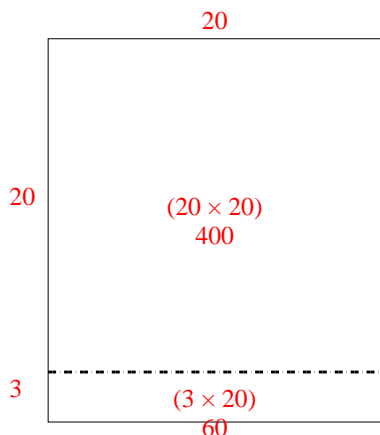
3)  $20 \times 22 =$



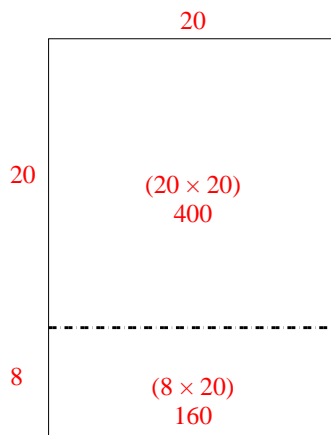
4)  $20 \times 29 =$



5)  $23 \times 20 =$



6)  $28 \times 20 =$



Answers

1. 640

2. 1,110

3. 440

4. 580

5. 460


6. 560






Use the array provided to solve each problem.


1)  $23 \times 20 =$




2)  $20 \times 28 =$




3)  $20 \times 21 =$




4)  $26 \times 20 =$



5)  $20 \times 22 =$



6)  $25 \times 20 =$



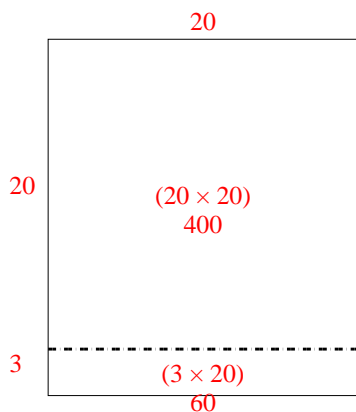
Answers

- 1. \_\_\_\_\_
- 2. \_\_\_\_\_
- 3. \_\_\_\_\_
- 4. \_\_\_\_\_
- 5. \_\_\_\_\_
- 6. \_\_\_\_\_

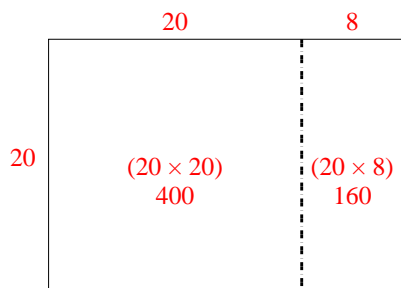


Use the array provided to solve each problem.

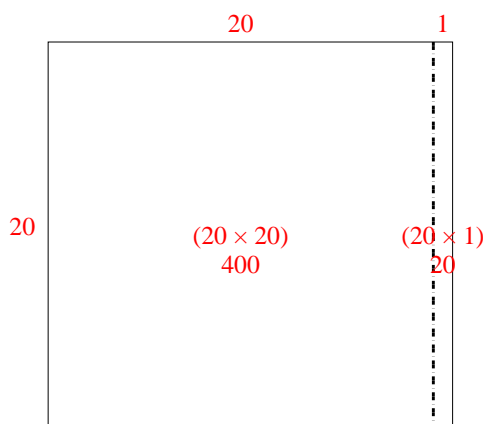
1)  $23 \times 20 =$



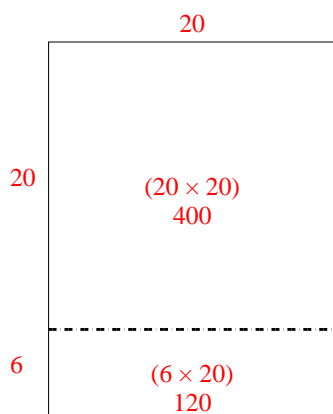
2)  $20 \times 28 =$



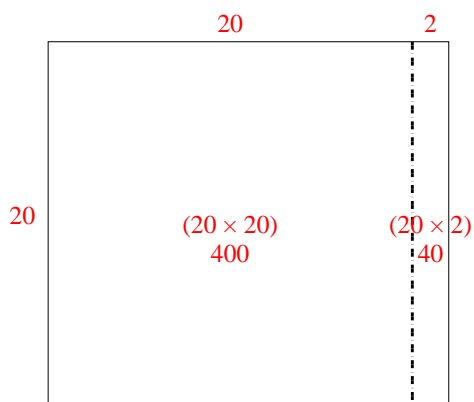
3)  $20 \times 21 =$



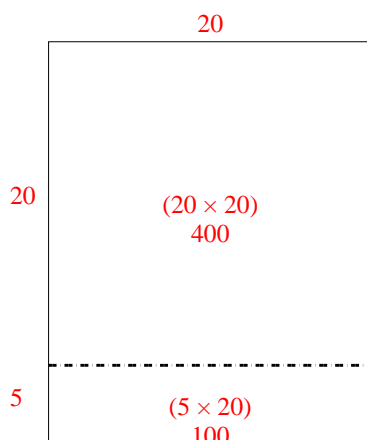
4)  $26 \times 20 =$



5)  $20 \times 22 =$



6)  $25 \times 20 =$



Answers

1. 460

2. 560

3. 420

4. 520


5. 440

6. 500




Use the array provided to solve each problem.


1)  $20 \times 26 =$




2)  $21 \times 20 =$




3)  $20 \times 22 =$




4)  $20 \times 28 =$



5)  $20 \times 29 =$



6)  $20 \times 23 =$



Answers

1. \_\_\_\_\_

2. \_\_\_\_\_

3. \_\_\_\_\_

4. \_\_\_\_\_

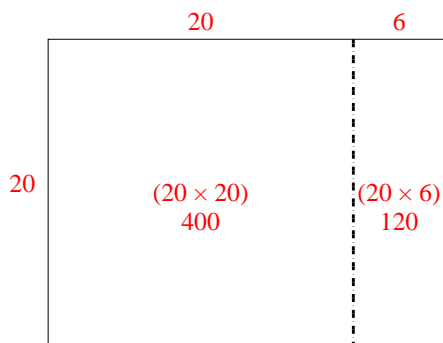
5. \_\_\_\_\_

6. \_\_\_\_\_

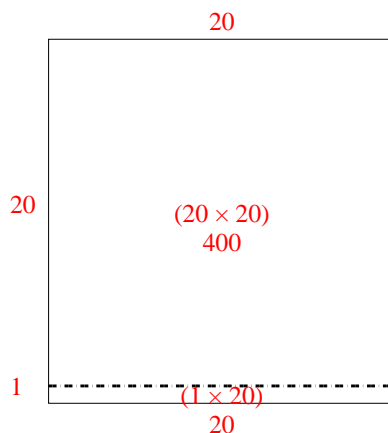


Use the array provided to solve each problem.

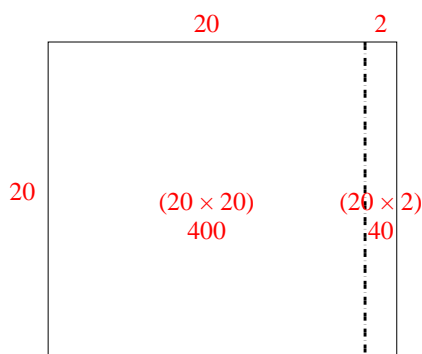
1)  $20 \times 26 =$



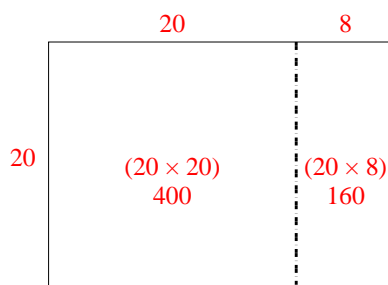
2)  $21 \times 20 =$



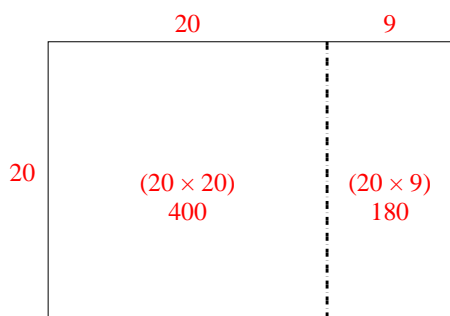
3)  $20 \times 22 =$



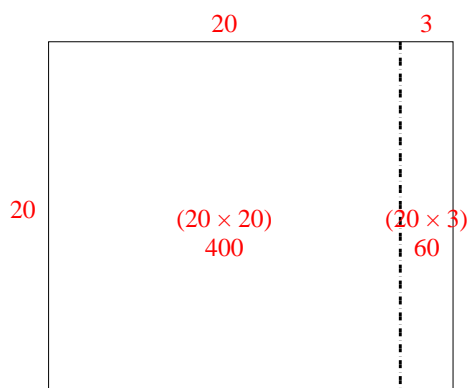
4)  $20 \times 28 =$



5)  $20 \times 29 =$



6)  $20 \times 23 =$



Answers

1. **520**

2. **420**

3. **440**

4. **560**

5. **580**

6. **460**