





Use the array provided to solve each problem.


1)  $23 \times 20 =$




2)  $20 \times 28 =$




3)  $20 \times 21 =$




4)  $26 \times 20 =$



5)  $20 \times 22 =$



6)  $25 \times 20 =$



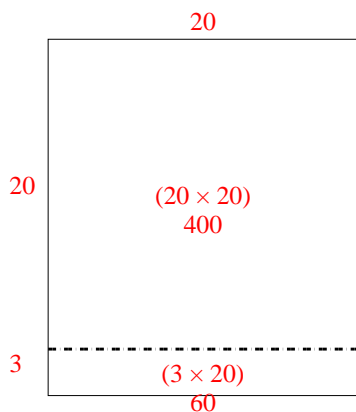
Answers

- 1. \_\_\_\_\_
- 2. \_\_\_\_\_
- 3. \_\_\_\_\_
- 4. \_\_\_\_\_
- 5. \_\_\_\_\_
- 6. \_\_\_\_\_

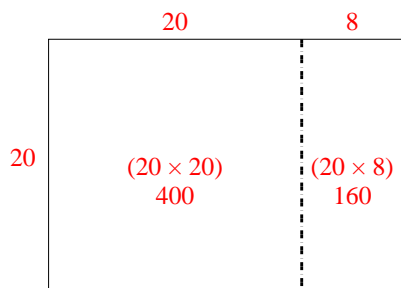


Use the array provided to solve each problem.

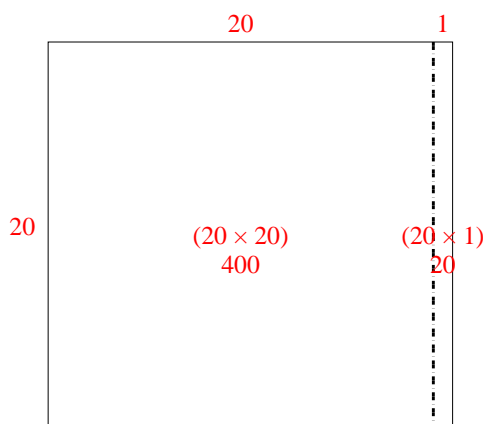
1)  $23 \times 20 =$



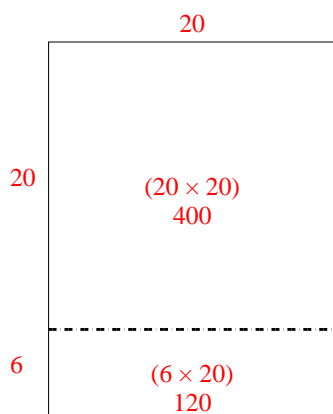
2)  $20 \times 28 =$



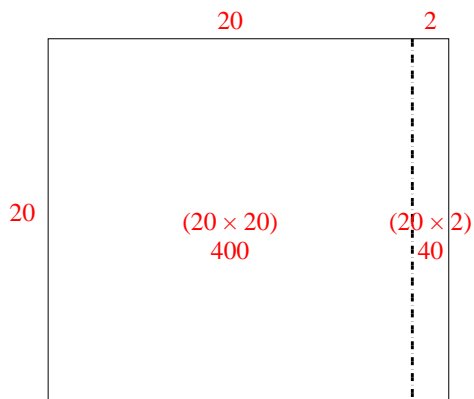
3)  $20 \times 21 =$



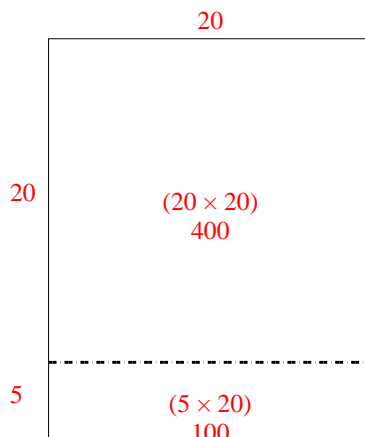
4)  $26 \times 20 =$



5)  $20 \times 22 =$



6)  $25 \times 20 =$



Answers

1. 460

2. 560

3. 420

4. 520

5. 440

6. 500