





Use the array provided to solve each problem.


1) $21 \times 20 =$




2) $27 \times 20 =$




3) $20 \times 23 =$




4) $20 \times 27 =$



5) $20 \times 29 =$



6) $20 \times 25 =$



Answers

1. _____

2. _____

3. _____

4. _____

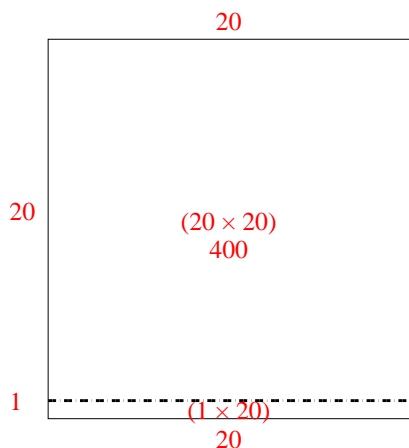
5. _____

6. _____

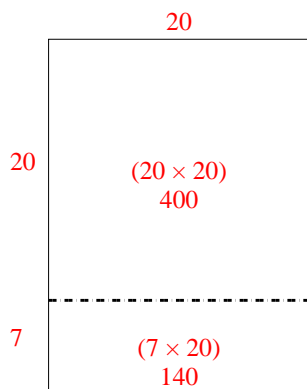


Use the array provided to solve each problem.

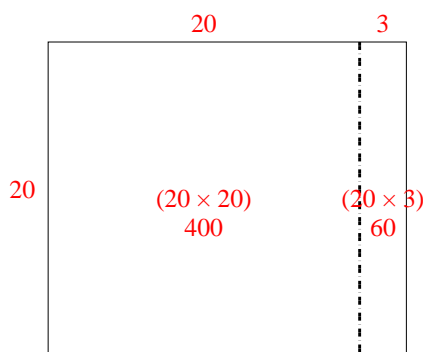
1) $21 \times 20 =$



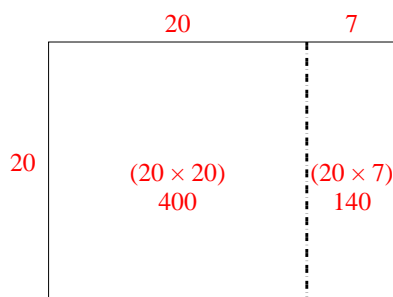
2) $27 \times 20 =$



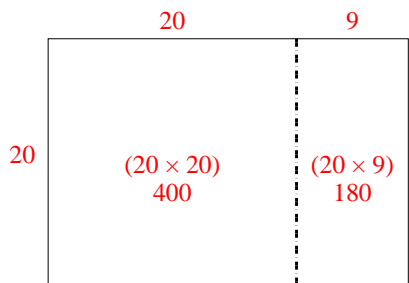
3) $20 \times 23 =$



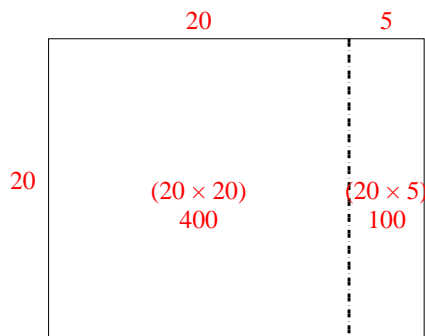
4) $20 \times 27 =$



5) $20 \times 29 =$



6) $20 \times 25 =$



Answers

1. **420**

2. **540**

3. **460**

4. **540**

5. **580**

6. **500**