





Use the array provided to solve each problem.


1) $44 \times 25 =$




2) $34 \times 19 =$



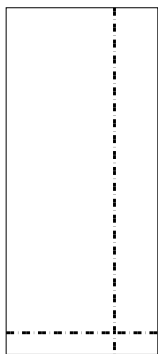
3) $32 \times 47 =$




4) $48 \times 24 =$



5) $32 \times 14 =$



6) $37 \times 26 =$



Answers

1. _____

2. _____

3. _____

4. _____

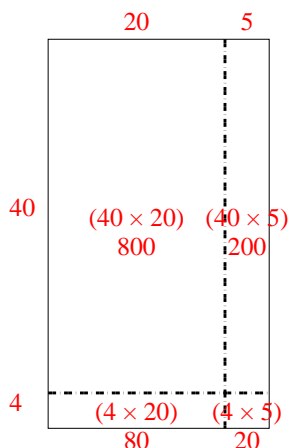
5. _____

6. _____

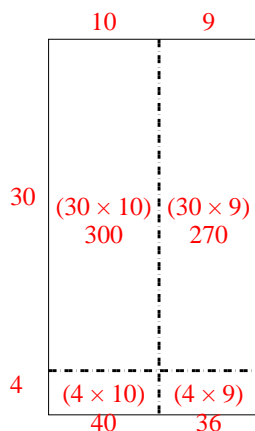


Use the array provided to solve each problem.

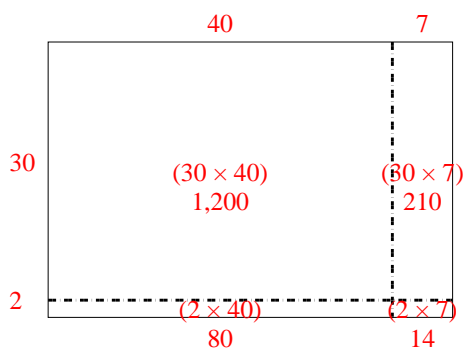
1) $44 \times 25 =$



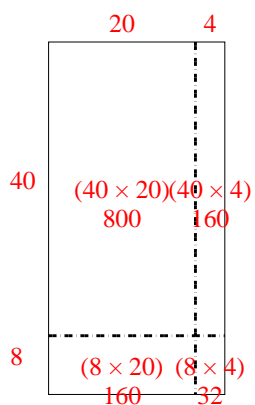
2) $34 \times 19 =$



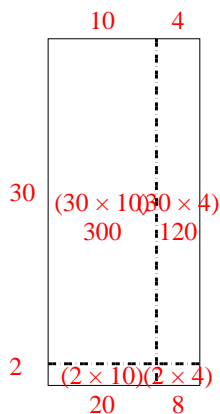
3) $32 \times 47 =$



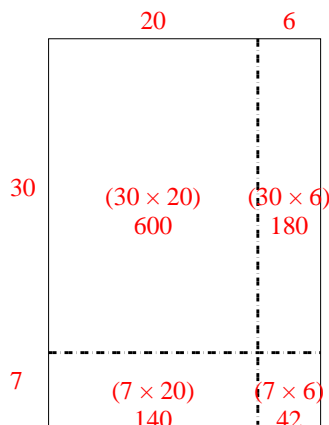
4) $48 \times 24 =$



5) $32 \times 14 =$



6) $37 \times 26 =$



Answers

1. 1,100

2. 646

3. 1,504

4. 1,152

5. 448

6. 962