





Use the array provided to solve each problem.


1)  $19 \times 20 =$




2)  $14 \times 10 =$




3)  $10 \times 12 =$




4)  $10 \times 16 =$



5)  $13 \times 10 =$



6)  $15 \times 10 =$



Answers

1. \_\_\_\_\_

2. \_\_\_\_\_

3. \_\_\_\_\_

4. \_\_\_\_\_

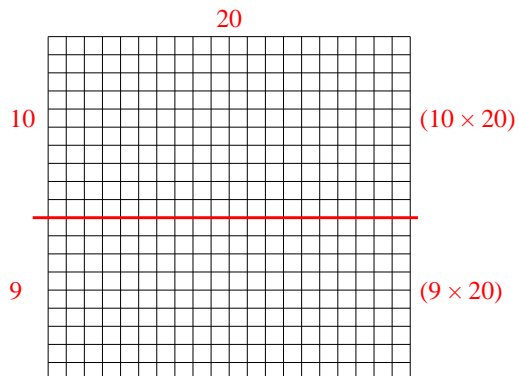
5. \_\_\_\_\_

6. \_\_\_\_\_

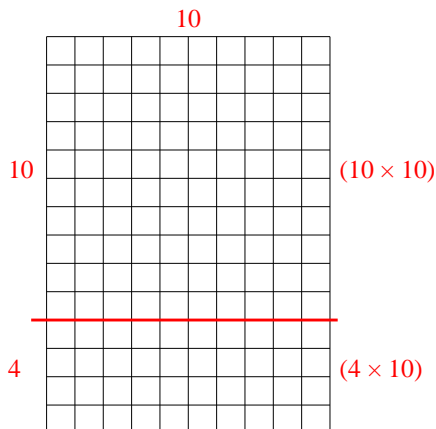


Use the array provided to solve each problem.

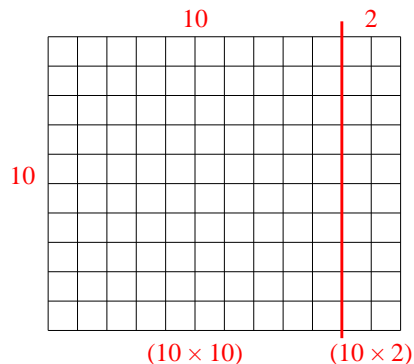
1)  $19 \times 20 =$



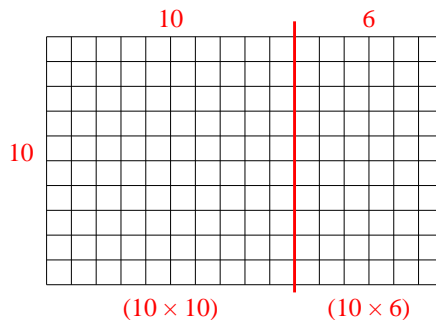
2)  $14 \times 10 =$



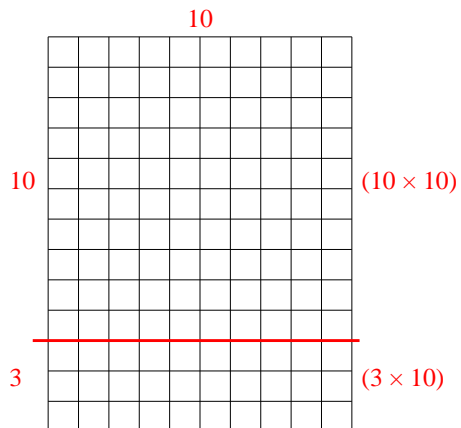
3)  $10 \times 12 =$



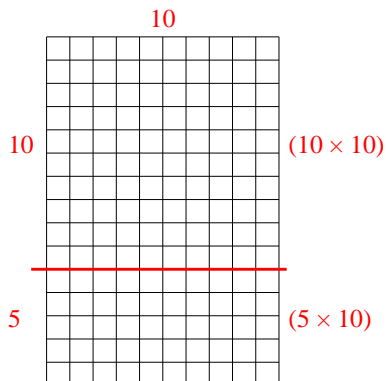
4)  $10 \times 16 =$



5)  $13 \times 10 =$



6)  $15 \times 10 =$



Answers

1. **380**

2. **140**

3. **120**

4. **160**

5. **130**

6. **150**