





Use the array provided to solve each problem.


1) $10 \times 13 =$




2) $18 \times 10 =$




3) $14 \times 10 =$




4) $16 \times 10 =$



5) $10 \times 15 =$



6) $10 \times 14 =$



Answers

1. _____

2. _____

3. _____

4. _____

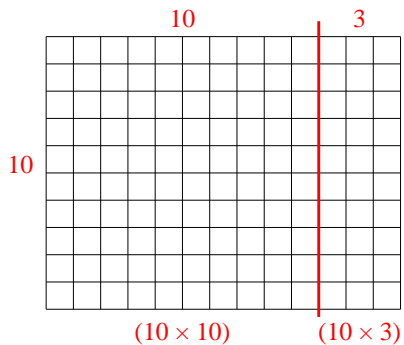
5. _____

6. _____

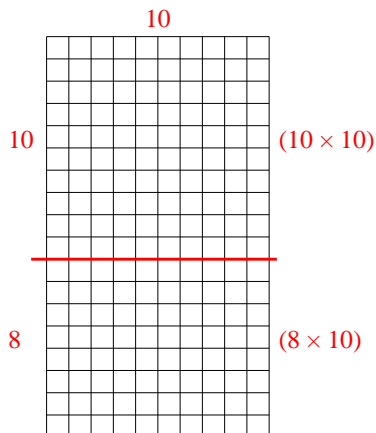


Use the array provided to solve each problem.

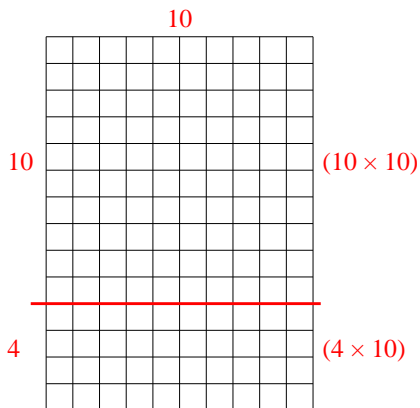
1) $10 \times 13 =$



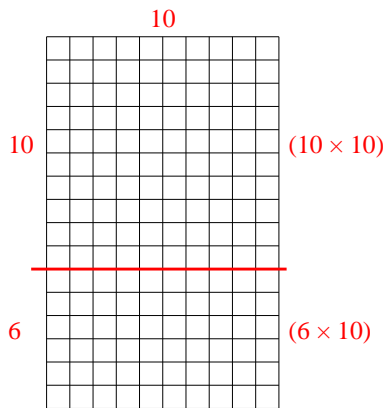
2) $18 \times 10 =$



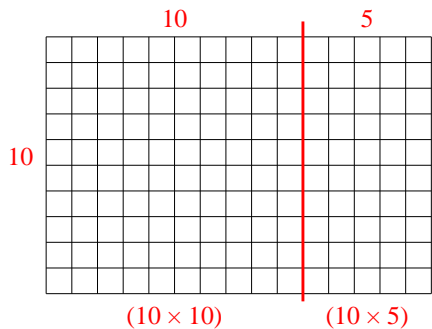
3) $14 \times 10 =$



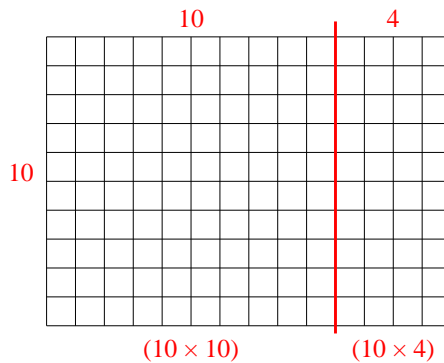
4) $16 \times 10 =$



5) $10 \times 15 =$



6) $10 \times 14 =$



Answers

1. **130**

2. **180**

3. **140**

4. **160**

5. **150**

6. **140**