





Write an equation to express the array and then find the number of shapes.



Answers

Ex.  $2 \times 3 = 6$

1. \_\_\_\_\_

2. \_\_\_\_\_

3. \_\_\_\_\_

4. \_\_\_\_\_

5. \_\_\_\_\_

6. \_\_\_\_\_

7. \_\_\_\_\_

8. \_\_\_\_\_

9. \_\_\_\_\_

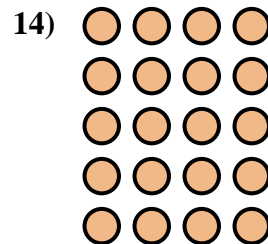
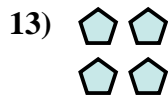


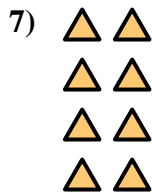
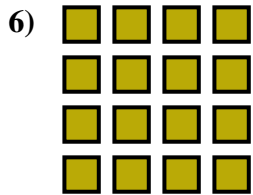
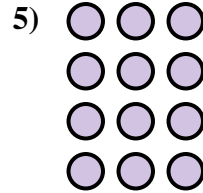

10. \_\_\_\_\_

11. \_\_\_\_\_

12. \_\_\_\_\_


13. \_\_\_\_\_

14. \_\_\_\_\_





Write an equation to express the array and then find the number of shapes.



Answers

Ex.  $2 \times 3 = 6$

1.  $3 \times 5 = 15$

2.  $3 \times 3 = 9$

3.  $2 \times 5 = 10$

4.  $3 \times 2 = 6$

5.  $4 \times 3 = 12$

6.  $4 \times 4 = 16$

7.  $4 \times 2 = 8$

8.  $3 \times 4 = 12$

9.  $5 \times 5 = 25$

10.  $4 \times 5 = 20$

11.  $5 \times 2 = 10$

12.  $2 \times 4 = 8$

13.  $2 \times 2 = 4$

14.  $5 \times 4 = 20$

