

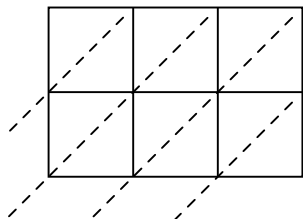


Use lattice multiplication to solve each problem.

1) $718 \times 14 =$



2) $428 \times 34 =$



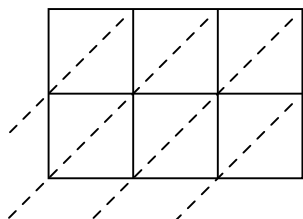
3) $823 \times 37 =$



4) $171 \times 34 =$



5) $745 \times 82 =$



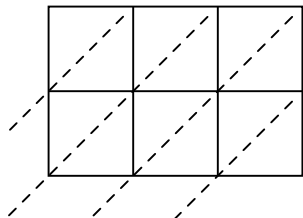
6) $314 \times 99 =$



7) $920 \times 70 =$



8) $664 \times 98 =$



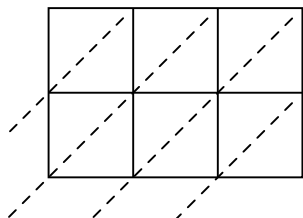
9) $281 \times 53 =$



10) $530 \times 53 =$



11) $104 \times 75 =$



12) $375 \times 51 =$



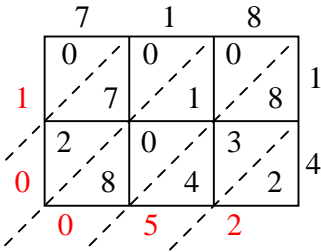
Answers

1. _____
2. _____
3. _____
4. _____
5. _____
6. _____
7. _____
8. _____
9. _____
10. _____
11. _____
12. _____

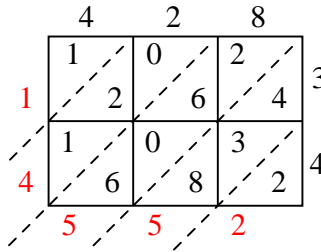


Use lattice multiplication to solve each problem.

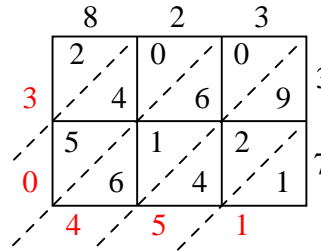
1) $718 \times 14 =$



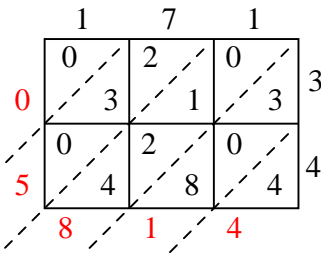
2) $428 \times 34 =$



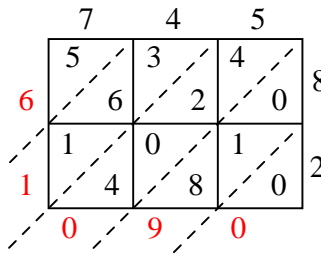
3) $823 \times 37 =$



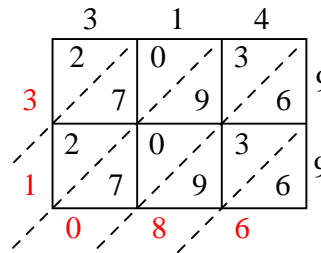
4) $171 \times 34 =$



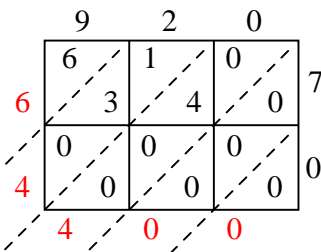
5) $745 \times 82 =$



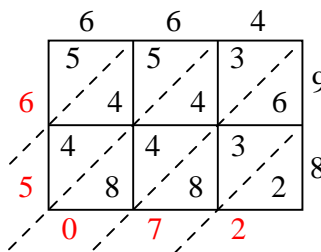
6) $314 \times 99 =$



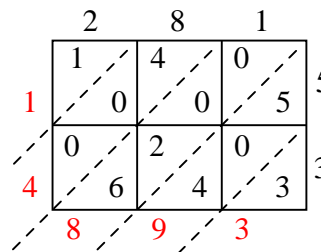
7) $920 \times 70 =$



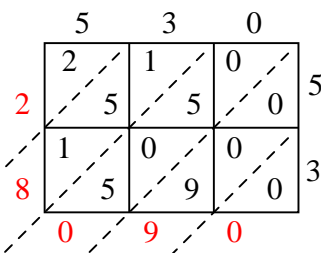
8) $664 \times 98 =$



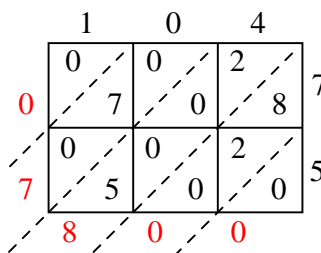
9) $281 \times 53 =$



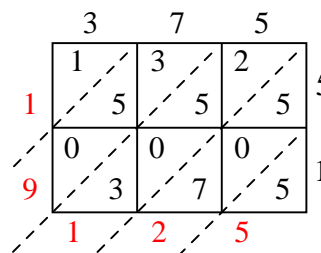
10) $530 \times 53 =$



11) $104 \times 75 =$



12) $375 \times 51 =$



Answers

1. **10,052**

2. **14,552**

3. **30,451**

4. **5,814**

5. **61,090**

6. **31,086**

7. **64,400**

8. **65,072**

9. **14,893**

10. **28,090**

11. **7,800**

12. **19,125**