




Write each array as an addition problem and solve.



Answers

Ex. 3+3=6

1. _____

2. _____

3. _____

4. _____

5. _____

6. _____

7. _____

8. _____

9. _____

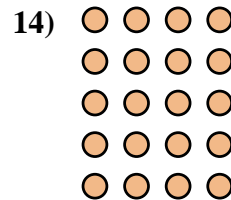
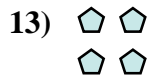
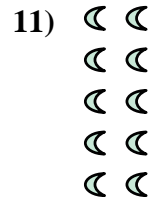


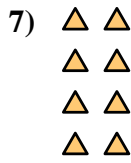
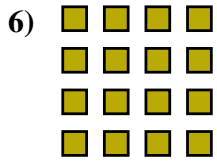
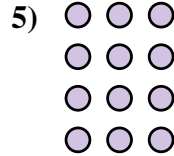

10. _____

11. _____

12. _____


13. _____

14. _____





Write each array as an addition problem and solve.



Answers

Ex. 3+3=6

1. 5+5+5=15

2. 3+3+3=9

3. 5+5=10

4. 2+2+2=6

5. 3+3+3+3=12

6. 4+4+4+4=16

7. 2+2+2+2=8

8. 4+4+4=12

9. 5+5+5+5+5=25

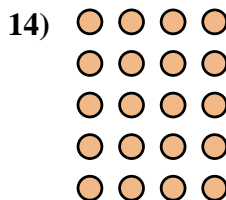
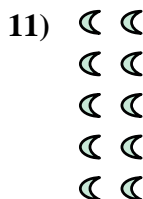


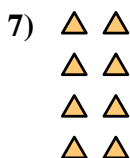
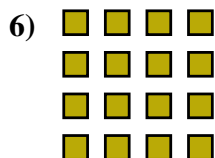
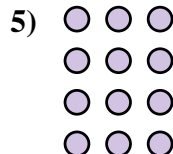

10. 5+5+5+5=20

11. 2+2+2+2+2=10

12. 4+4=8

13. 2+2=4

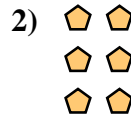
14. 4+4+4+4+4=20







Write each array as an addition problem and solve.

Answers



Ex. $2+2=4$



1. _____

2. _____


3. _____

4. _____

5. _____

6. _____

7. _____

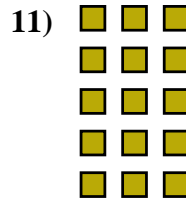



8. _____

9. _____

10. _____

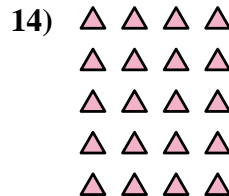
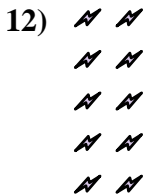
11. _____



12. _____

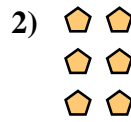
13. _____

14. _____





Write each array as an addition problem and solve.



Answers

Ex. 2+2=4

1. 3+3+3=9

2. 2+2+2=6

3. 3+3+3+3=12

4. 4+4+4=12

5. 2+2+2+2=8

6. 4+4+4+4=16

7. 5+5+5=15

8. 5+5+5+5=20

9. 4+4=8


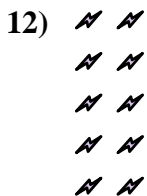
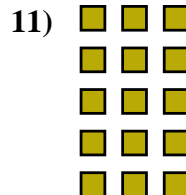
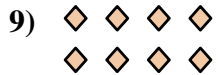



10. 3+3=6

11. 3+3+3+3+3=15

12. 2+2+2+2+2=10

13. 5+5=10

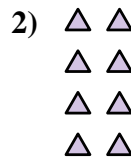
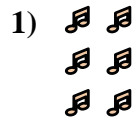
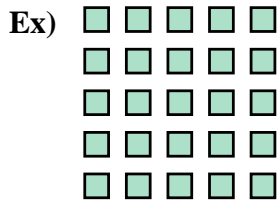
14. 4+4+4+4+4=20





Write each array as an addition problem and solve.

Answers



Ex. $5+5+5+5+5=25$

1. _____

2. _____

3. _____

4. _____

5. _____

6. _____

7. _____

8. _____

9. _____

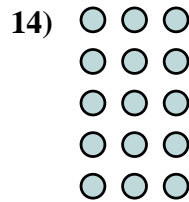
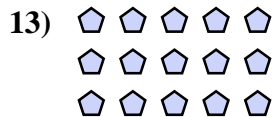
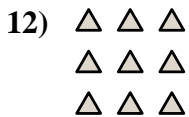
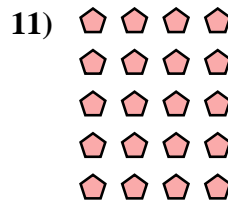
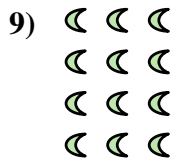


10. _____

11. _____

12. _____

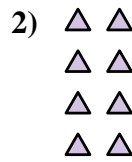
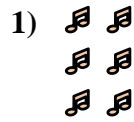
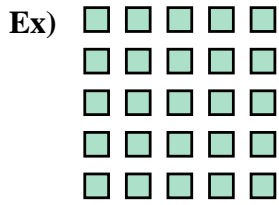
13. _____

14. _____





Write each array as an addition problem and solve.



Answers

Ex. $5+5+5+5+5=25$

1. $2+2+2=6$

2. $2+2+2+2=8$

3. $3+3=6$

4. $5+5+5+5=20$

5. $2+2+2+2+2=10$

6. $2+2=4$

7. $4+4+4=12$

8. $5+5=10$

9. $3+3+3+3=12$

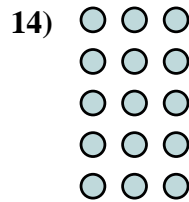
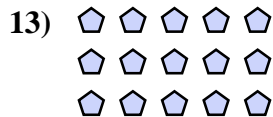
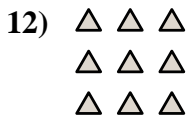
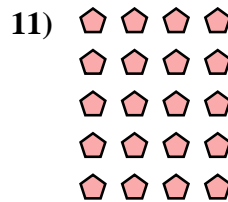
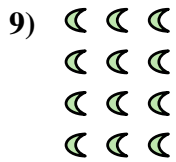


10. $4+4+4+4=16$

11. $4+4+4+4+4=20$

12. $3+3+3=9$

13. $5+5+5=15$

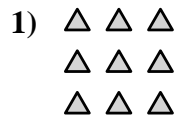
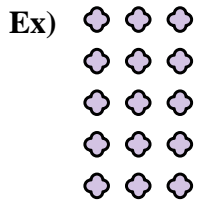
14. $3+3+3+3+3=15$





Write each array as an addition problem and solve.

Answers



Ex. 3+3+3+3+3=15

1. _____

2. _____

3. _____

4. _____

5. _____

6. _____

7. _____

8. _____

9. _____

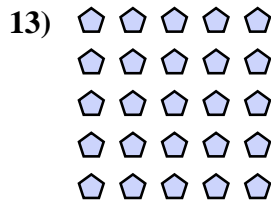

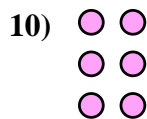
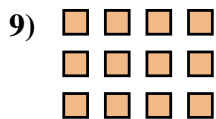

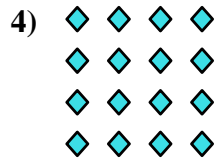

10. _____

11. _____

12. _____

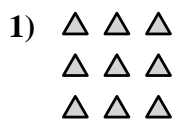
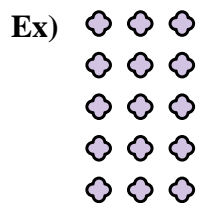
13. _____

14. _____





Write each array as an addition problem and solve.



Answers

Ex. 3+3+3+3+3=15

1. 3+3+3=9

2. 3+3=6

3. 2+2+2+2=8

4. 4+4+4+4=16

5. 5+5=10

6. 4+4=8

7. 3+3+3+3=12

8. 4+4+4+4+4=20

9. 4+4+4=12

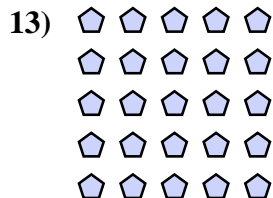

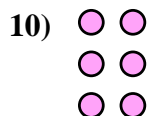
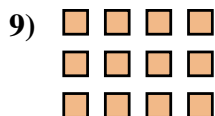



10. 2+2+2=6

11. 5+5+5=15

12. 5+5+5+5=20

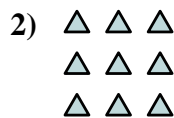

13. 5+5+5+5+5=25

14. 2+2=4





Write each array as an addition problem and solve.



Answers

Ex. $2+2=4$

1. _____

2. _____

3. _____

4. _____

5. _____

6. _____

7. _____

8. _____

9. _____

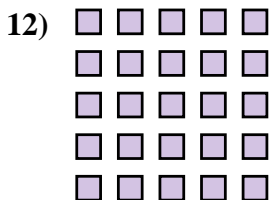
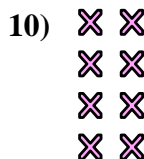
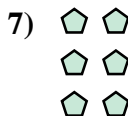

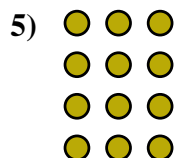
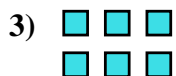
10. _____

11. _____

12. _____

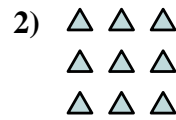

13. _____

14. _____





Write each array as an addition problem and solve.



Answers

Ex. 2+2=4

1. 2+2+2+2+2=10

2. 3+3+3=9

3. 3+3=6

4. 4+4+4=12

5. 3+3+3+3=12

6. 4+4+4+4+4=20

7. 2+2+2=6

8. 3+3+3+3+3=15

9. 5+5=10


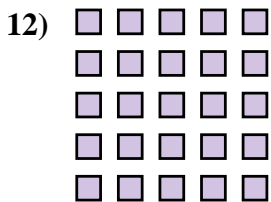

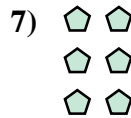

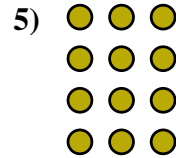
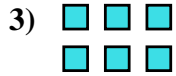
10. 2+2+2+2=8

11. 5+5+5=15

12. 5+5+5+5+5=25


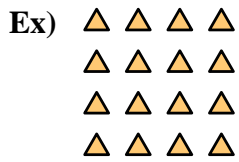
13. 4+4=8

14. 4+4+4+4=16





Write each array as an addition problem and solve.



Answers

Ex. $4+4+4+4=16$

1. _____

2. _____

3. _____

4. _____

5. _____

6. _____

7. _____

8. _____

9. _____


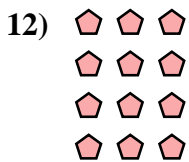


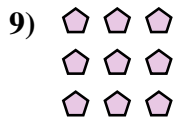
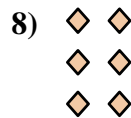

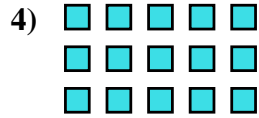
10. _____

11. _____

12. _____

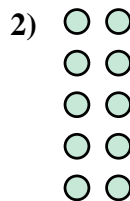
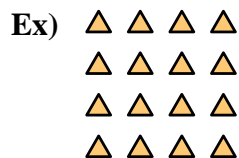
13. _____

14. _____





Write each array as an addition problem and solve.



Answers

Ex. 4+4+4+4=16

1. 4+4=8

2. 2+2+2+2+2=10

3. 4+4+4=12

4. 5+5+5=15

5. 3+3=6

6. 5+5+5+5=20

7. 3+3+3+3+3=15

8. 2+2+2=6

9. 3+3+3=9


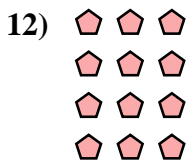


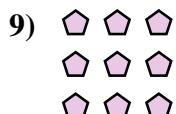
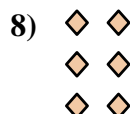


10. 5+5+5+5+5=25

11. 4+4+4+4+4=20

12. 3+3+3+3=12


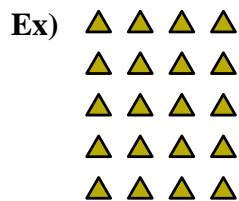
13. 2+2=4

14. 5+5=10





Write each array as an addition problem and solve.



Answers

Ex. 4+4+4+4+4=20

1. _____

2. _____

3. _____

4. _____

5. _____

6. _____

7. _____

8. _____

9. _____

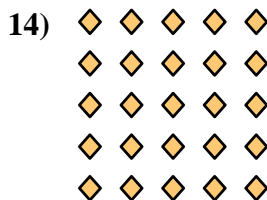



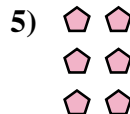
10. _____

11. _____

12. _____


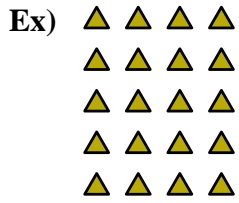
13. _____

14. _____





Write each array as an addition problem and solve.



Answers

Ex. 4+4+4+4+4=20

1. 2+2+2+2=8

2. 2+2=4

3. 3+3+3+3+3=15

4. 4+4+4+4=16

5. 2+2+2=6

6. 3+3+3+3=12

7. 2+2+2+2+2=10

8. 3+3+3=9

9. 3+3=6

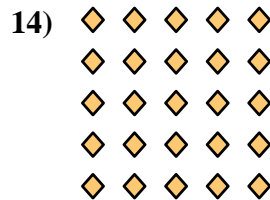
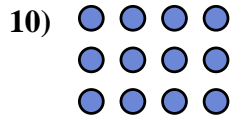


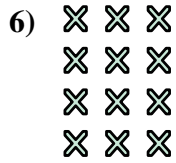
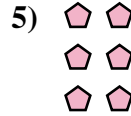
10. 4+4+4=12

11. 5+5=10

12. 4+4=8

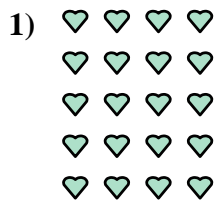

13. 5+5+5=15

14. 5+5+5+5+5=25





Write each array as an addition problem and solve.



Answers

Ex. $4+4+4+4=16$

1. _____

2. _____

3. _____

4. _____

5. _____

6. _____

7. _____

8. _____

9. _____


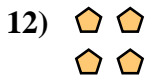

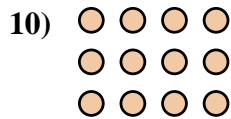
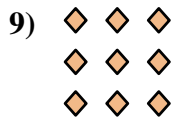
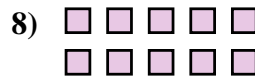
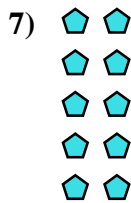
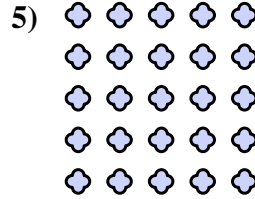
10. _____

11. _____

12. _____

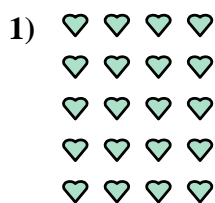

13. _____

14. _____





Write each array as an addition problem and solve.



Answers

Ex. 4+4+4+4=16

1. 4+4+4+4+4=20

2. 5+5+5+5=20

3. 3+3=6

4. 3+3+3+3=12

5. 5+5+5+5+5=25

6. 5+5+5=15

7. 2+2+2+2+2=10

8. 5+5=10

9. 3+3+3=9



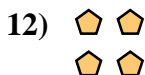

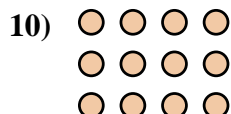
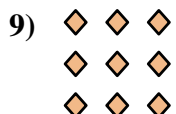
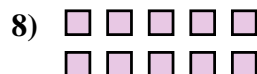


10. 4+4+4=12

11. 2+2+2+2=8

12. 2+2=4

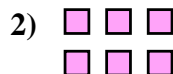

13. 2+2+2=6

14. 4+4=8





Write each array as an addition problem and solve.



Answers

Ex. $3+3+3+3=12$

1. _____

2. _____

3. _____

4. _____

5. _____

6. _____

7. _____

8. _____

9. _____




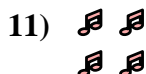
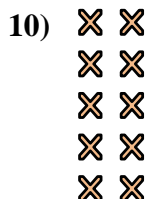

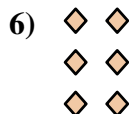

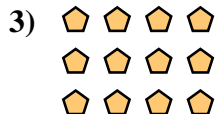
10. _____

11. _____

12. _____

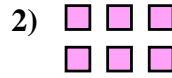
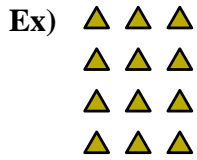
13. _____

14. _____





Write each array as an addition problem and solve.



Answers

Ex. 3+3+3+3=12

1. 3+3+3=9

2. 3+3=6

3. 4+4+4=12

4. 4+4+4+4+4=20

5. 5+5=10

6. 2+2+2=6

7. 4+4=8

8. 4+4+4+4=16

9. 3+3+3+3+3=15




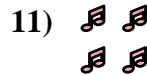
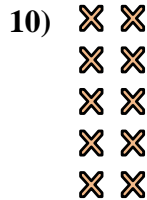
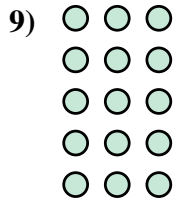

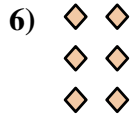
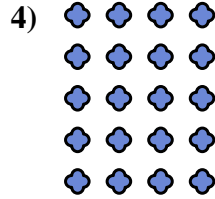

10. 2+2+2+2+2=10

11. 2+2=4

12. 5+5+5+5=20

13. 5+5+5=15

14. 2+2+2+2=8






Write each array as an addition problem and solve.



Answers

Ex. 4+4+4=12



1. _____

2. _____


3. _____

4. _____

5. _____

6. _____

7. _____

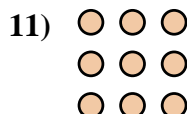




8. _____

9. _____

10. _____

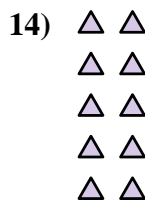
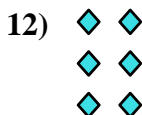
11. _____



12. _____


13. _____

14. _____





Write each array as an addition problem and solve.



Answers

Ex. 4+4+4=12

1. 5+5=10

2. 5+5+5=15

3. 5+5+5+5=20

4. 3+3+3+3=12

5. 3+3+3+3+3=15

6. 3+3=6

7. 5+5+5+5+5=25

8. 2+2=4

9. 4+4+4+4=16

10. 2+2+2+2=8

11. 3+3+3=9

12. 2+2+2=6

13. 4+4=8

14. 2+2+2+2+2=10

