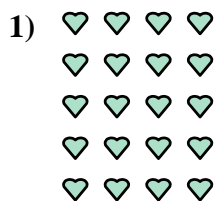




Write each array as an addition problem and solve.



Answers

Ex. $4+4+4+4=16$

1. _____

2. _____

3. _____

4. _____

5. _____

6. _____

7. _____

8. _____

9. _____




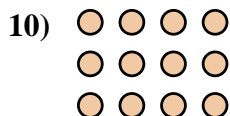
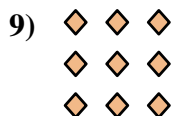
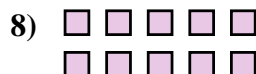


10. _____

11. _____

12. _____

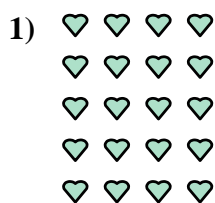

13. _____

14. _____





Write each array as an addition problem and solve.



Answers

Ex. 4+4+4+4=16

1. 4+4+4+4+4=20

2. 5+5+5+5=20

3. 3+3=6

4. 3+3+3+3=12

5. 5+5+5+5+5=25

6. 5+5+5=15

7. 2+2+2+2+2=10

8. 5+5=10

9. 3+3+3=9

10. 4+4+4=12

11. 2+2+2+2=8

12. 2+2=4

13. 2+2+2=6

14. 4+4=8

