



Determine which choice best describes the coins in the order shown.

Answers




- A. nickel, dime, quarter, penny
- B. penny, dime, quarter, nickel
- C. nickel, quarter, penny, dime
- D. nickel, quarter, dime, penny

1. \_\_\_\_\_



- A. quarter, nickel, penny, dime
- B. dime, nickel, quarter, penny
- C. penny, nickel, quarter, dime
- D. nickel, penny, quarter, dime

2. \_\_\_\_\_



- A. penny, dime, nickel, quarter
- B. quarter, dime, nickel, penny
- C. quarter, penny, nickel, dime
- D. penny, quarter, nickel, dime

3. \_\_\_\_\_



- A. quarter, penny, dime, nickel
- B. penny, nickel, quarter, dime
- C. quarter, penny, nickel, dime
- D. nickel, penny, dime, quarter

4. \_\_\_\_\_



- A. penny, dime, nickel, quarter
- B. dime, quarter, nickel, penny
- C. quarter, dime, penny, nickel
- D. penny, quarter, dime, nickel

5. \_\_\_\_\_



- A. dime, penny, quarter, nickel
- B. dime, quarter, nickel, penny
- C. penny, nickel, quarter, dime
- D. quarter, dime, penny, nickel

6. \_\_\_\_\_



- A. nickel, quarter, dime, penny
- B. quarter, penny, dime, nickel
- C. dime, nickel, quarter, penny
- D. dime, penny, nickel, quarter

7. \_\_\_\_\_



- A. penny, quarter, nickel, dime
- B. dime, nickel, quarter, penny
- C. quarter, nickel, penny, dime
- D. penny, nickel, quarter, dime

8. \_\_\_\_\_




Determine which choice best describes the coins in the order shown.



- A. nickel, dime, quarter, penny
- B. penny, dime, quarter, nickel
- C. nickel, quarter, penny, dime
- D. nickel, quarter, dime, penny



- A. quarter, nickel, penny, dime
- B. dime, nickel, quarter, penny
- C. penny, nickel, quarter, dime
- D. nickel, penny, quarter, dime



- A. penny, dime, nickel, quarter
- B. quarter, dime, nickel, penny
- C. quarter, penny, nickel, dime
- D. penny, quarter, nickel, dime



- A. quarter, penny, dime, nickel
- B. penny, nickel, quarter, dime
- C. quarter, penny, nickel, dime
- D. nickel, penny, dime, quarter



- A. penny, dime, nickel, quarter
- B. dime, quarter, nickel, penny
- C. quarter, dime, penny, nickel
- D. penny, quarter, dime, nickel



- A. dime, penny, quarter, nickel
- B. dime, quarter, nickel, penny
- C. penny, nickel, quarter, dime
- D. quarter, dime, penny, nickel



- A. nickel, quarter, dime, penny
- B. quarter, penny, dime, nickel
- C. dime, nickel, quarter, penny
- D. dime, penny, nickel, quarter



- A. penny, quarter, nickel, dime
- B. dime, nickel, quarter, penny
- C. quarter, nickel, penny, dime
- D. penny, nickel, quarter, dime

Answers

1.     **C**    

2.     **D**    

3.     **C**    

4.     **B**    

5.     **C**    

6.     **D**    

7.     **B**    

8.     **A**



Determine which choice best describes the coins in the order shown.

Answers



- A. penny, quarter, nickel, dime
- B. quarter, nickel, dime, penny
- C. dime, nickel, penny, quarter
- D. penny, nickel, quarter, dime

1. \_\_\_\_\_



- A. nickel, penny, quarter, dime
- B. nickel, quarter, dime, penny
- C. dime, nickel, quarter, penny
- D. dime, quarter, nickel, penny

2. \_\_\_\_\_

3. \_\_\_\_\_



- A. nickel, quarter, penny, dime
- B. nickel, dime, penny, quarter
- C. penny, quarter, dime, nickel
- D. dime, nickel, penny, quarter

4. \_\_\_\_\_

5. \_\_\_\_\_



- A. dime, nickel, quarter, penny
- B. penny, quarter, dime, nickel
- C. nickel, quarter, dime, penny
- D. quarter, nickel, penny, dime

6. \_\_\_\_\_

7. \_\_\_\_\_



- A. quarter, penny, dime, nickel
- B. penny, quarter, dime, nickel
- C. nickel, quarter, dime, penny
- D. penny, dime, quarter, nickel

8. \_\_\_\_\_



- A. quarter, dime, penny, nickel
- B. dime, nickel, quarter, penny
- C. dime, quarter, nickel, penny
- D. penny, nickel, dime, quarter



- A. quarter, penny, nickel, dime
- B. nickel, dime, penny, quarter
- C. nickel, penny, dime, quarter
- D. penny, nickel, quarter, dime



- A. dime, nickel, penny, quarter
- B. penny, nickel, quarter, dime
- C. nickel, dime, penny, quarter
- D. penny, dime, nickel, quarter



Determine which choice best describes the coins in the order shown.



- A. penny, quarter, nickel, dime
- B. quarter, nickel, dime, penny
- C. dime, nickel, penny, quarter
- D. penny, nickel, quarter, dime



- A. nickel, penny, quarter, dime
- B. nickel, quarter, dime, penny
- C. dime, nickel, quarter, penny
- D. dime, quarter, nickel, penny



- A. nickel, quarter, penny, dime
- B. nickel, dime, penny, quarter
- C. penny, quarter, dime, nickel
- D. dime, nickel, penny, quarter



- A. dime, nickel, quarter, penny
- B. penny, quarter, dime, nickel
- C. nickel, quarter, dime, penny
- D. quarter, nickel, penny, dime



- A. quarter, penny, dime, nickel
- B. penny, quarter, dime, nickel
- C. nickel, quarter, dime, penny
- D. penny, dime, quarter, nickel



- A. quarter, dime, penny, nickel
- B. dime, nickel, quarter, penny
- C. dime, quarter, nickel, penny
- D. penny, nickel, dime, quarter



- A. quarter, penny, nickel, dime
- B. nickel, dime, penny, quarter
- C. nickel, penny, dime, quarter
- D. penny, nickel, quarter, dime



- A. dime, nickel, penny, quarter
- B. penny, nickel, quarter, dime
- C. nickel, dime, penny, quarter
- D. penny, dime, nickel, quarter

Answers

1.     **D**    

2.     **A**    

3.     **D**    

4.     **B**    

5.     **D**    

6.     **A**    

7.     **D**    

8.     **B**



Determine which choice best describes the coins in the order shown.

Answers



- A. dime, nickel, penny, quarter
- B. penny, quarter, nickel, dime
- C. dime, penny, quarter, nickel
- D. quarter, nickel, penny, dime

1. \_\_\_\_\_



- A. quarter, dime, penny, nickel
- B. nickel, dime, penny, quarter
- C. penny, nickel, quarter, dime
- D. nickel, quarter, dime, penny

2. \_\_\_\_\_



- A. penny, quarter, dime, nickel
- B. dime, nickel, penny, quarter
- C. nickel, penny, dime, quarter
- D. dime, quarter, nickel, penny

3. \_\_\_\_\_



- A. penny, dime, nickel, quarter
- B. quarter, dime, nickel, penny
- C. dime, nickel, quarter, penny
- D. dime, penny, quarter, nickel

4. \_\_\_\_\_



- A. penny, dime, quarter, nickel
- B. nickel, dime, penny, quarter
- C. penny, nickel, dime, quarter
- D. nickel, quarter, dime, penny

5. \_\_\_\_\_



- A. quarter, nickel, dime, penny
- B. dime, quarter, penny, nickel
- C. dime, nickel, penny, quarter
- D. penny, nickel, quarter, dime

6. \_\_\_\_\_



- A. nickel, dime, penny, quarter
- B. nickel, quarter, penny, dime
- C. nickel, penny, quarter, dime
- D. penny, dime, quarter, nickel

7. \_\_\_\_\_



- A. penny, dime, nickel, quarter
- B. quarter, penny, nickel, dime
- C. penny, quarter, dime, nickel
- D. penny, nickel, quarter, dime

8. \_\_\_\_\_






Determine which choice best describes the coins in the order shown.



- A. dime, nickel, penny, quarter
- B. penny, quarter, nickel, dime
- C. dime, penny, quarter, nickel
- D. quarter, nickel, penny, dime



- A. quarter, dime, penny, nickel
- B. nickel, dime, penny, quarter
- C. penny, nickel, quarter, dime
- D. nickel, quarter, dime, penny



- A. penny, quarter, dime, nickel
- B. dime, nickel, penny, quarter
- C. nickel, penny, dime, quarter
- D. dime, quarter, nickel, penny



- A. penny, dime, nickel, quarter
- B. quarter, dime, nickel, penny
- C. dime, nickel, quarter, penny
- D. dime, penny, quarter, nickel



- A. penny, dime, quarter, nickel
- B. nickel, dime, penny, quarter
- C. penny, nickel, dime, quarter
- D. nickel, quarter, dime, penny



- A. quarter, nickel, dime, penny
- B. dime, quarter, penny, nickel
- C. dime, nickel, penny, quarter
- D. penny, nickel, quarter, dime



- A. nickel, dime, penny, quarter
- B. nickel, quarter, penny, dime
- C. nickel, penny, quarter, dime
- D. penny, dime, quarter, nickel



- A. penny, dime, nickel, quarter
- B. quarter, penny, nickel, dime
- C. penny, quarter, dime, nickel
- D. penny, nickel, quarter, dime

Answers

1.     **B**    

2.     **A**    

3.     **C**    

4.     **D**    

5.     **D**    

6.     **C**    

7.     **B**    

8.     **A**



Determine which choice best describes the coins in the order shown.

Answers

1)



- A. dime, nickel, quarter, penny
- B. nickel, quarter, penny, dime
- C. quarter, nickel, penny, dime
- D. penny, nickel, dime, quarter

1. \_\_\_\_\_

2)



- A. nickel, quarter, dime, penny
- B. dime, nickel, penny, quarter
- C. penny, nickel, quarter, dime
- D. penny, quarter, dime, nickel

2. \_\_\_\_\_

3)



- A. dime, nickel, penny, quarter
- B. quarter, penny, dime, nickel
- C. quarter, nickel, penny, dime
- D. dime, penny, quarter, nickel

3. \_\_\_\_\_

4)



- A. dime, nickel, quarter, penny
- B. dime, penny, quarter, nickel
- C. penny, dime, quarter, nickel
- D. penny, quarter, nickel, dime

4. \_\_\_\_\_

5)



- A. penny, quarter, dime, nickel
- B. penny, nickel, quarter, dime
- C. dime, quarter, penny, nickel
- D. quarter, penny, nickel, dime

5. \_\_\_\_\_

6)



- A. nickel, penny, quarter, dime
- B. penny, quarter, dime, nickel
- C. dime, nickel, quarter, penny
- D. nickel, dime, penny, quarter

6. \_\_\_\_\_

7)



- A. dime, penny, quarter, nickel
- B. quarter, penny, nickel, dime
- C. nickel, dime, penny, quarter
- D. penny, nickel, quarter, dime

7. \_\_\_\_\_

8)



- A. nickel, quarter, dime, penny
- B. penny, dime, nickel, quarter
- C. dime, penny, quarter, nickel
- D. quarter, dime, nickel, penny

8. \_\_\_\_\_



Determine which choice best describes the coins in the order shown.

1)



- A. dime, nickel, quarter, penny
- B. nickel, quarter, penny, dime
- C. quarter, nickel, penny, dime
- D. penny, nickel, dime, quarter

2)



- A. nickel, quarter, dime, penny
- B. dime, nickel, penny, quarter
- C. penny, nickel, quarter, dime
- D. penny, quarter, dime, nickel

3)



- A. dime, nickel, penny, quarter
- B. quarter, penny, dime, nickel
- C. quarter, nickel, penny, dime
- D. dime, penny, quarter, nickel

4)



- A. dime, nickel, quarter, penny
- B. dime, penny, quarter, nickel
- C. penny, dime, quarter, nickel
- D. penny, quarter, nickel, dime

5)



- A. penny, quarter, dime, nickel
- B. penny, nickel, quarter, dime
- C. dime, quarter, penny, nickel
- D. quarter, penny, nickel, dime

6)



- A. nickel, penny, quarter, dime
- B. penny, quarter, dime, nickel
- C. dime, nickel, quarter, penny
- D. nickel, dime, penny, quarter

7)



- A. dime, penny, quarter, nickel
- B. quarter, penny, nickel, dime
- C. nickel, dime, penny, quarter
- D. penny, nickel, quarter, dime

8)



- A. nickel, quarter, dime, penny
- B. penny, dime, nickel, quarter
- C. dime, penny, quarter, nickel
- D. quarter, dime, nickel, penny

Answers

1.     **C**    

2.     **B**    

3.     **D**    

4.     **B**    

5.     **A**    

6.     **D**    

7.     **C**    

8.     **A**






Determine which choice best describes the coins in the order shown.

Answers



- A. penny, dime, quarter, nickel
- B. dime, nickel, quarter, penny
- C. dime, quarter, nickel, penny
- D. penny, quarter, nickel, dime

1. \_\_\_\_\_



- A. penny, nickel, quarter, dime
- B. nickel, dime, penny, quarter
- C. quarter, penny, nickel, dime
- D. penny, nickel, dime, quarter

2. \_\_\_\_\_



- A. penny, nickel, dime, quarter
- B. dime, nickel, quarter, penny
- C. quarter, penny, dime, nickel
- D. quarter, penny, nickel, dime

3. \_\_\_\_\_



- A. nickel, quarter, dime, penny
- B. nickel, penny, quarter, dime
- C. dime, penny, nickel, quarter
- D. quarter, nickel, dime, penny

4. \_\_\_\_\_



- A. quarter, penny, nickel, dime
- B. nickel, penny, dime, quarter
- C. dime, quarter, penny, nickel
- D. penny, quarter, dime, nickel

5. \_\_\_\_\_



- A. quarter, dime, nickel, penny
- B. nickel, penny, quarter, dime
- C. nickel, dime, quarter, penny
- D. dime, nickel, quarter, penny

6. \_\_\_\_\_



- A. nickel, quarter, penny, dime
- B. dime, quarter, penny, nickel
- C. nickel, dime, quarter, penny
- D. dime, nickel, quarter, penny

7. \_\_\_\_\_



- A. quarter, dime, nickel, penny
- B. nickel, quarter, dime, penny
- C. nickel, quarter, penny, dime
- D. quarter, nickel, dime, penny

8. \_\_\_\_\_



Determine which choice best describes the coins in the order shown.



- A. penny, dime, quarter, nickel
- B. dime, nickel, quarter, penny
- C. dime, quarter, nickel, penny
- D. penny, quarter, nickel, dime



- A. penny, nickel, quarter, dime
- B. nickel, dime, penny, quarter
- C. quarter, penny, nickel, dime
- D. penny, nickel, dime, quarter



- A. penny, nickel, dime, quarter
- B. dime, nickel, quarter, penny
- C. quarter, penny, dime, nickel
- D. quarter, penny, nickel, dime



- A. nickel, quarter, dime, penny
- B. nickel, penny, quarter, dime
- C. dime, penny, nickel, quarter
- D. quarter, nickel, dime, penny



- A. quarter, penny, nickel, dime
- B. nickel, penny, dime, quarter
- C. dime, quarter, penny, nickel
- D. penny, quarter, dime, nickel



- A. quarter, dime, nickel, penny
- B. nickel, penny, quarter, dime
- C. nickel, dime, quarter, penny
- D. dime, nickel, quarter, penny



- A. nickel, quarter, penny, dime
- B. dime, quarter, penny, nickel
- C. nickel, dime, quarter, penny
- D. dime, nickel, quarter, penny



- A. quarter, dime, nickel, penny
- B. nickel, quarter, dime, penny
- C. nickel, quarter, penny, dime
- D. quarter, nickel, dime, penny

Answers

1.     **C**    

2.     **C**    

3.     **A**    

4.     **B**    

5.     **B**    

6.     **C**    

7.     **C**    

8.     **A**



Determine which choice best describes the coins in the order shown.

Answers



- A. nickel, penny, quarter, dime
- B. quarter, dime, nickel, penny
- C. penny, quarter, dime, nickel
- D. penny, nickel, dime, quarter

1. \_\_\_\_\_



- A. nickel, quarter, penny, dime
- B. dime, quarter, nickel, penny
- C. quarter, penny, dime, nickel
- D. penny, dime, quarter, nickel

2. \_\_\_\_\_



- A. quarter, nickel, penny, dime
- B. penny, nickel, quarter, dime
- C. quarter, dime, penny, nickel
- D. quarter, penny, nickel, dime

3. \_\_\_\_\_



- A. penny, nickel, quarter, dime
- B. dime, nickel, penny, quarter
- C. nickel, penny, dime, quarter
- D. penny, quarter, dime, nickel

4. \_\_\_\_\_



- A. dime, nickel, penny, quarter
- B. penny, nickel, dime, quarter
- C. nickel, dime, penny, quarter
- D. quarter, penny, dime, nickel

5. \_\_\_\_\_



- A. penny, quarter, nickel, dime
- B. nickel, quarter, dime, penny
- C. penny, dime, quarter, nickel
- D. penny, quarter, dime, nickel

6. \_\_\_\_\_



- A. quarter, nickel, dime, penny
- B. dime, quarter, nickel, penny
- C. penny, dime, quarter, nickel
- D. quarter, penny, dime, nickel

7. \_\_\_\_\_



- A. penny, quarter, dime, nickel
- B. penny, nickel, dime, quarter
- C. dime, nickel, quarter, penny
- D. dime, quarter, penny, nickel

8. \_\_\_\_\_



Determine which choice best describes the coins in the order shown.



- A. nickel, penny, quarter, dime
- B. quarter, dime, nickel, penny
- C. penny, quarter, dime, nickel
- D. penny, nickel, dime, quarter



- A. nickel, quarter, penny, dime
- B. dime, quarter, nickel, penny
- C. quarter, penny, dime, nickel
- D. penny, dime, quarter, nickel



- A. quarter, nickel, penny, dime
- B. penny, nickel, quarter, dime
- C. quarter, dime, penny, nickel
- D. quarter, penny, nickel, dime



- A. penny, nickel, quarter, dime
- B. dime, nickel, penny, quarter
- C. nickel, penny, dime, quarter
- D. penny, quarter, dime, nickel



- A. dime, nickel, penny, quarter
- B. penny, nickel, dime, quarter
- C. nickel, dime, penny, quarter
- D. quarter, penny, dime, nickel



- A. penny, quarter, nickel, dime
- B. nickel, quarter, dime, penny
- C. penny, dime, quarter, nickel
- D. penny, quarter, dime, nickel



- A. quarter, nickel, dime, penny
- B. dime, quarter, nickel, penny
- C. penny, dime, quarter, nickel
- D. quarter, penny, dime, nickel



- A. penny, quarter, dime, nickel
- B. penny, nickel, dime, quarter
- C. dime, nickel, quarter, penny
- D. dime, quarter, penny, nickel

Answers

1. **D**

2. **B**

3. **B**

4. **A**

5. **A**

6. **C**

7. **B**

8. **D**



Determine which choice best describes the coins in the order shown.

Answers



- A. quarter, nickel, penny, dime
- B. nickel, quarter, penny, dime
- C. quarter, penny, dime, nickel
- D. dime, quarter, penny, nickel

1. \_\_\_\_\_



- A. nickel, dime, penny, quarter
- B. nickel, quarter, dime, penny
- C. penny, quarter, dime, nickel
- D. quarter, dime, nickel, penny

2. \_\_\_\_\_

3. \_\_\_\_\_



- A. dime, nickel, quarter, penny
- B. penny, dime, quarter, nickel
- C. penny, dime, nickel, quarter
- D. nickel, dime, penny, quarter

4. \_\_\_\_\_

5. \_\_\_\_\_



- A. quarter, dime, penny, nickel
- B. nickel, dime, quarter, penny
- C. dime, quarter, nickel, penny
- D. nickel, quarter, dime, penny

6. \_\_\_\_\_

7. \_\_\_\_\_



- A. nickel, dime, penny, quarter
- B. penny, nickel, quarter, dime
- C. dime, quarter, nickel, penny
- D. penny, quarter, nickel, dime


8. \_\_\_\_\_



- A. dime, penny, quarter, nickel
- B. quarter, dime, penny, nickel
- C. nickel, quarter, dime, penny
- D. penny, nickel, quarter, dime



- A. quarter, penny, dime, nickel
- B. nickel, quarter, penny, dime
- C. dime, quarter, nickel, penny
- D. dime, nickel, penny, quarter



- A. dime, nickel, penny, quarter
- B. nickel, penny, dime, quarter
- C. quarter, dime, nickel, penny
- D. dime, nickel, quarter, penny





Determine which choice best describes the coins in the order shown.



- A. quarter, nickel, penny, dime
- B. nickel, quarter, penny, dime
- C. quarter, penny, dime, nickel
- D. dime, quarter, penny, nickel



- A. nickel, dime, penny, quarter
- B. nickel, quarter, dime, penny
- C. penny, quarter, dime, nickel
- D. quarter, dime, nickel, penny



- A. dime, nickel, quarter, penny
- B. penny, dime, quarter, nickel
- C. penny, dime, nickel, quarter
- D. nickel, dime, penny, quarter



- A. quarter, dime, penny, nickel
- B. nickel, dime, quarter, penny
- C. dime, quarter, nickel, penny
- D. nickel, quarter, dime, penny




- A. nickel, dime, penny, quarter
- B. penny, nickel, quarter, dime
- C. dime, quarter, nickel, penny
- D. penny, quarter, nickel, dime



- A. dime, penny, quarter, nickel
- B. quarter, dime, penny, nickel
- C. nickel, quarter, dime, penny
- D. penny, nickel, quarter, dime



- A. quarter, penny, dime, nickel
- B. nickel, quarter, penny, dime
- C. dime, quarter, nickel, penny
- D. dime, nickel, penny, quarter



- A. dime, nickel, penny, quarter
- B. nickel, penny, dime, quarter
- C. quarter, dime, nickel, penny
- D. dime, nickel, quarter, penny

Answers

1.     **C**    

2.     **A**    

3.     **A**    

4.     **B**    

5.     **B**    

6.     **B**    

7.     **D**    

8.     **B**



Determine which choice best describes the coins in the order shown.

Answers




- A. quarter, penny, nickel, dime
- B. dime, quarter, nickel, penny
- C. nickel, penny, dime, quarter
- D. quarter, nickel, penny, dime

1. \_\_\_\_\_



- A. quarter, dime, nickel, penny
- B. quarter, nickel, dime, penny
- C. dime, quarter, penny, nickel
- D. penny, quarter, nickel, dime

2. \_\_\_\_\_



- A. nickel, quarter, penny, dime
- B. nickel, penny, dime, quarter
- C. penny, dime, nickel, quarter
- D. dime, penny, nickel, quarter

3. \_\_\_\_\_



- A. dime, quarter, penny, nickel
- B. nickel, dime, quarter, penny
- C. penny, nickel, quarter, dime
- D. penny, dime, quarter, nickel

4. \_\_\_\_\_



- A. penny, dime, quarter, nickel
- B. dime, quarter, nickel, penny
- C. dime, penny, nickel, quarter
- D. quarter, penny, dime, nickel

5. \_\_\_\_\_




- A. penny, quarter, dime, nickel
- B. quarter, nickel, penny, dime
- C. nickel, quarter, dime, penny
- D. quarter, penny, dime, nickel

6. \_\_\_\_\_



- A. nickel, penny, quarter, dime
- B. quarter, nickel, penny, dime
- C. quarter, dime, penny, nickel
- D. dime, penny, nickel, quarter

7. \_\_\_\_\_



- A. nickel, penny, quarter, dime
- B. quarter, dime, nickel, penny
- C. nickel, dime, penny, quarter
- D. penny, dime, nickel, quarter

8. \_\_\_\_\_




Determine which choice best describes the coins in the order shown.



- A. quarter, penny, nickel, dime
- B. dime, quarter, nickel, penny
- C. nickel, penny, dime, quarter
- D. quarter, nickel, penny, dime



- A. quarter, dime, nickel, penny
- B. quarter, nickel, dime, penny
- C. dime, quarter, penny, nickel
- D. penny, quarter, nickel, dime



- A. nickel, quarter, penny, dime
- B. nickel, penny, dime, quarter
- C. penny, dime, nickel, quarter
- D. dime, penny, nickel, quarter



- A. dime, quarter, penny, nickel
- B. nickel, dime, quarter, penny
- C. penny, nickel, quarter, dime
- D. penny, dime, quarter, nickel



- A. penny, dime, quarter, nickel
- B. dime, quarter, nickel, penny
- C. dime, penny, nickel, quarter
- D. quarter, penny, dime, nickel



- A. penny, quarter, dime, nickel
- B. quarter, nickel, penny, dime
- C. nickel, quarter, dime, penny
- D. quarter, penny, dime, nickel



- A. nickel, penny, quarter, dime
- B. quarter, nickel, penny, dime
- C. quarter, dime, penny, nickel
- D. dime, penny, nickel, quarter



- A. nickel, penny, quarter, dime
- B. quarter, dime, nickel, penny
- C. nickel, dime, penny, quarter
- D. penny, dime, nickel, quarter

Answers

1. **B**

2. **C**

3. **D**

4. **A**

5. **B**

6. **C**

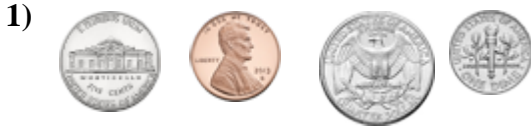
7. **D**

8. **C**



Determine which choice best describes the coins in the order shown.

Answers



- A. nickel, penny, quarter, dime
- B. penny, dime, nickel, quarter
- C. nickel, quarter, penny, dime
- D. penny, quarter, dime, nickel

1. \_\_\_\_\_



- A. nickel, dime, quarter, penny
- B. penny, quarter, nickel, dime
- C. nickel, penny, dime, quarter
- D. nickel, quarter, dime, penny

2. \_\_\_\_\_

3. \_\_\_\_\_



- A. nickel, penny, quarter, dime
- B. quarter, dime, penny, nickel
- C. dime, quarter, penny, nickel
- D. penny, nickel, quarter, dime

4. \_\_\_\_\_

5. \_\_\_\_\_

6. \_\_\_\_\_



- A. quarter, nickel, dime, penny
- B. quarter, nickel, penny, dime
- C. quarter, penny, nickel, dime
- D. dime, nickel, quarter, penny

7. \_\_\_\_\_

8. \_\_\_\_\_



- A. penny, dime, nickel, quarter
- B. nickel, dime, quarter, penny
- C. nickel, dime, penny, quarter
- D. quarter, nickel, dime, penny



- A. quarter, penny, nickel, dime
- B. nickel, penny, quarter, dime
- C. dime, penny, quarter, nickel
- D. penny, quarter, dime, nickel



- A. quarter, nickel, dime, penny
- B. nickel, quarter, dime, penny
- C. nickel, dime, penny, quarter
- D. dime, quarter, nickel, penny



- A. nickel, penny, quarter, dime
- B. nickel, penny, dime, quarter
- C. quarter, dime, penny, nickel
- D. penny, quarter, nickel, dime



Determine which choice best describes the coins in the order shown.



- A. nickel, penny, quarter, dime
- B. penny, dime, nickel, quarter
- C. nickel, quarter, penny, dime
- D. penny, quarter, dime, nickel



- A. nickel, dime, quarter, penny
- B. penny, quarter, nickel, dime
- C. nickel, penny, dime, quarter
- D. nickel, quarter, dime, penny



- A. nickel, penny, quarter, dime
- B. quarter, dime, penny, nickel
- C. dime, quarter, penny, nickel
- D. penny, nickel, quarter, dime



- A. quarter, nickel, dime, penny
- B. quarter, nickel, penny, dime
- C. quarter, penny, nickel, dime
- D. dime, nickel, quarter, penny



- A. penny, dime, nickel, quarter
- B. nickel, dime, quarter, penny
- C. nickel, dime, penny, quarter
- D. quarter, nickel, dime, penny



- A. quarter, penny, nickel, dime
- B. nickel, penny, quarter, dime
- C. dime, penny, quarter, nickel
- D. penny, quarter, dime, nickel



- A. quarter, nickel, dime, penny
- B. nickel, quarter, dime, penny
- C. nickel, dime, penny, quarter
- D. dime, quarter, nickel, penny



- A. nickel, penny, quarter, dime
- B. nickel, penny, dime, quarter
- C. quarter, dime, penny, nickel
- D. penny, quarter, nickel, dime

Answers

1.     **A**    

2.     **C**    

3.     **C**    

4.     **A**    

5.     **A**    

6.     **A**    

7.     **A**    

8.     **D**





Determine which choice best describes the coins in the order shown.

Answers



- A. penny, dime, nickel, quarter
- B. quarter, nickel, penny, dime
- C. penny, quarter, nickel, dime
- D. nickel, penny, dime, quarter

1. \_\_\_\_\_



- A. nickel, penny, quarter, dime
- B. penny, quarter, nickel, dime
- C. penny, nickel, quarter, dime
- D. dime, penny, quarter, nickel

2. \_\_\_\_\_

3. \_\_\_\_\_



- A. dime, quarter, penny, nickel
- B. nickel, penny, dime, quarter
- C. penny, dime, quarter, nickel
- D. quarter, dime, nickel, penny

4. \_\_\_\_\_

5. \_\_\_\_\_

6. \_\_\_\_\_



- A. dime, nickel, quarter, penny
- B. dime, quarter, penny, nickel
- C. dime, quarter, nickel, penny
- D. nickel, penny, dime, quarter

7. \_\_\_\_\_

8. \_\_\_\_\_



- A. quarter, dime, penny, nickel
- B. quarter, dime, nickel, penny
- C. nickel, dime, quarter, penny
- D. penny, nickel, dime, quarter



- A. nickel, quarter, dime, penny
- B. dime, penny, quarter, nickel
- C. dime, quarter, nickel, penny
- D. dime, nickel, penny, quarter



- A. quarter, nickel, dime, penny
- B. quarter, nickel, penny, dime
- C. nickel, dime, quarter, penny
- D. dime, quarter, nickel, penny



- A. quarter, dime, penny, nickel
- B. nickel, quarter, dime, penny
- C. penny, dime, nickel, quarter
- D. nickel, penny, dime, quarter



Determine which choice best describes the coins in the order shown.



- A. penny, dime, nickel, quarter
- B. quarter, nickel, penny, dime
- C. penny, quarter, nickel, dime
- D. nickel, penny, dime, quarter



- A. nickel, penny, quarter, dime
- B. penny, quarter, nickel, dime
- C. penny, nickel, quarter, dime
- D. dime, penny, quarter, nickel



- A. dime, quarter, penny, nickel
- B. nickel, penny, dime, quarter
- C. penny, dime, quarter, nickel
- D. quarter, dime, nickel, penny



- A. dime, nickel, quarter, penny
- B. dime, quarter, penny, nickel
- C. dime, quarter, nickel, penny
- D. nickel, penny, dime, quarter



- A. quarter, dime, penny, nickel
- B. quarter, dime, nickel, penny
- C. nickel, dime, quarter, penny
- D. penny, nickel, dime, quarter



- A. nickel, quarter, dime, penny
- B. dime, penny, quarter, nickel
- C. dime, quarter, nickel, penny
- D. dime, nickel, penny, quarter



- A. quarter, nickel, dime, penny
- B. quarter, nickel, penny, dime
- C. nickel, dime, quarter, penny
- D. dime, quarter, nickel, penny



- A. quarter, dime, penny, nickel
- B. nickel, quarter, dime, penny
- C. penny, dime, nickel, quarter
- D. nickel, penny, dime, quarter

Answers

1. **D**

2. **A**

3. **C**

4. **B**

5. **A**

6. **D**

7. **A**

8. **B**