




Determine which choice best describes the coins in the order shown.

Answers



- A. penny, dime, quarter, nickel
- B. dime, nickel, quarter, penny
- C. dime, quarter, nickel, penny
- D. penny, quarter, nickel, dime

1. _____



- A. penny, nickel, quarter, dime
- B. nickel, dime, penny, quarter
- C. quarter, penny, nickel, dime
- D. penny, nickel, dime, quarter

2. _____



- A. penny, nickel, dime, quarter
- B. dime, nickel, quarter, penny
- C. quarter, penny, dime, nickel
- D. quarter, penny, nickel, dime

3. _____



- A. nickel, quarter, dime, penny
- B. nickel, penny, quarter, dime
- C. dime, penny, nickel, quarter
- D. quarter, nickel, dime, penny

4. _____



- A. quarter, penny, nickel, dime
- B. nickel, penny, dime, quarter
- C. dime, quarter, penny, nickel
- D. penny, quarter, dime, nickel

5. _____



- A. quarter, dime, nickel, penny
- B. nickel, penny, quarter, dime
- C. nickel, dime, quarter, penny
- D. dime, nickel, quarter, penny

6. _____



- A. nickel, quarter, penny, dime
- B. dime, quarter, penny, nickel
- C. nickel, dime, quarter, penny
- D. dime, nickel, quarter, penny

7. _____



- A. quarter, dime, nickel, penny
- B. nickel, quarter, dime, penny
- C. nickel, quarter, penny, dime
- D. quarter, nickel, dime, penny


8. _____



Determine which choice best describes the coins in the order shown.



- A. penny, dime, quarter, nickel
- B. dime, nickel, quarter, penny
- C. dime, quarter, nickel, penny
- D. penny, quarter, nickel, dime




- A. penny, nickel, quarter, dime
- B. nickel, dime, penny, quarter
- C. quarter, penny, nickel, dime
- D. penny, nickel, dime, quarter



- A. penny, nickel, dime, quarter
- B. dime, nickel, quarter, penny
- C. quarter, penny, dime, nickel
- D. quarter, penny, nickel, dime



- A. nickel, quarter, dime, penny
- B. nickel, penny, quarter, dime
- C. dime, penny, nickel, quarter
- D. quarter, nickel, dime, penny



- A. quarter, penny, nickel, dime
- B. nickel, penny, dime, quarter
- C. dime, quarter, penny, nickel
- D. penny, quarter, dime, nickel



- A. quarter, dime, nickel, penny
- B. nickel, penny, quarter, dime
- C. nickel, dime, quarter, penny
- D. dime, nickel, quarter, penny



- A. nickel, quarter, penny, dime
- B. dime, quarter, penny, nickel
- C. nickel, dime, quarter, penny
- D. dime, nickel, quarter, penny



- A. quarter, dime, nickel, penny
- B. nickel, quarter, dime, penny
- C. nickel, quarter, penny, dime
- D. quarter, nickel, dime, penny

Answers

1. **C**

2. **C**

3. **A**

4. **B**

5. **B**

6. **C**

7. **C**

8. **A**