




Count the number of quarters (25¢), dimes(10¢), nickels(5¢) and pennies(1¢).

Answers

Ex)




Ex. 3 2 2 2

1)



1. \_\_\_\_\_

2)



2. \_\_\_\_\_

3)



3. \_\_\_\_\_

4)



4. \_\_\_\_\_

5)



5. \_\_\_\_\_

6)



6. \_\_\_\_\_

7)




7. \_\_\_\_\_

8)



8. \_\_\_\_\_

9)



9. \_\_\_\_\_

10)



10. \_\_\_\_\_



Count the number of quarters (25¢), dimes(10¢), nickels(5¢) and pennies(1¢).

Ex)

1)

2)

3)

4)

5)

6)

7)

8)

9)

10)

Answers

Ex.	<u>3</u>	<u>2</u>	<u>2</u>	<u>2</u>
1.	<u>2</u>	<u>2</u>	<u>3</u>	<u>2</u>
2.	<u>2</u>	<u>2</u>	<u>2</u>	<u>3</u>
3.	<u>2</u>	<u>5</u>	<u>1</u>	<u>1</u>
4.	<u>2</u>	<u>3</u>	<u>2</u>	<u>2</u>
5.	<u>2</u>	<u>2</u>	<u>2</u>	<u>3</u>
6.	<u>2</u>	<u>4</u>	<u>1</u>	<u>2</u>
7.	<u>3</u>	<u>1</u>	<u>1</u>	<u>4</u>
8.	<u>3</u>	<u>2</u>	<u>2</u>	<u>2</u>
9.	<u>3</u>	<u>2</u>	<u>1</u>	<u>3</u>
10.	<u>1</u>	<u>2</u>	<u>2</u>	<u>4</u>