



Determine the amount of money shown.

Answers

1)



1. _____

2. _____

3. _____

4. _____

5. _____

2)



3)



4)



5)





Determine the amount of money shown.



Answers

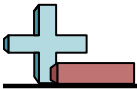
1. \$56.93

2. \$63.67

3. \$51.98

4. \$30.53

5. \$70.03



Determine the amount of money shown.

Answers

1)



1. _____

2. _____

3. _____

4. _____

5. _____

2)



3)



4)



5)





Determine the amount of money shown.



Answers

1. \$47.85

2. \$28.55

3. \$5.59

4. \$64.52

5. \$53.78



Determine the amount of money shown.

Answers



1. _____

2. _____

3. _____

4. _____

5. _____





Determine the amount of money shown.



Answers

1. \$35.56

2. \$61.80

3. \$17.97

4. \$71.35

5. \$75.52



Determine the amount of money shown.

Answers



1. _____

2. _____

3. _____

4. _____

5. _____





Determine the amount of money shown.



Answers

1. \$47.27

2. \$22.22

3. \$55.00

4. \$73.99

5. \$52.43



Determine the amount of money shown.

Answers



1. _____

2. _____

3. _____

4. _____

5. _____





Determine the amount of money shown.



Answers

1. \$68.27

2. \$41.34

3. \$30.32

4. \$58.43

5. \$8.62



Determine the amount of money shown.

Answers



1. _____

2. _____

3. _____

4. _____

5. _____





Determine the amount of money shown.



Answers

1. \$28.26

2. \$63.27

3. \$53.28

4. \$65.32

5. \$25.32



Determine the amount of money shown.

Answers

1)



1. _____


2. _____

3. _____

4. _____

5. _____

2)



3)



4)



5)





Determine the amount of money shown.


Answers

1)



1. \$97.62

2)



2. \$15.69

3. \$83.32

4. \$98.13

5. \$52.33

3)

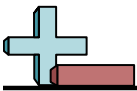


4)



5)





Determine the amount of money shown.

Answers



1. _____

2. _____

3. _____

4. _____

5. _____





Determine the amount of money shown.



Answers

1. \$92.02

2. \$71.22

3. \$63.89

4. \$67.29

5. \$90.57



Determine the amount of money shown.

Answers



1. _____

2. _____

3. _____

4. _____

5. _____





Determine the amount of money shown.

1)

2)

3)

4)

5)

Answers

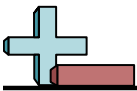
1. \$46.99

2. \$69.85

3. \$60.38

4. \$99.38

5. \$40.12



Determine the amount of money shown.

Answers



1. _____

2. _____

3. _____

4. _____

5. _____





Determine the amount of money shown.



Answers

1. \$36.22

2. \$66.88

3. \$79.35

4. \$64.81

5. \$68.28