



Determine the amount of money shown.

Answers



1. _____



2. _____



3. _____

4. _____




5. _____

6. _____




7. _____

8. _____




9. _____

10. _____





Determine the amount of money shown.



Answers

1. \$0.82

2. \$0.95

3. \$0.77

4. \$0.97

5. \$0.96

6. \$0.97

7. \$0.96

8. \$0.98

9. \$0.88

10. \$0.78