







Use the units provided to measure the width of each of the bars.









Answers

- 1. _____
- 2. _____
- 3. _____
- 4. _____
- 5. _____
- 6. _____
- 7. _____
- 8. _____
- 9. _____
- 10. _____



Use the units provided to measure the width of each of the bars.



Answers

1. 10

2. 1

3. 4

4. 3

5. 6

6. 8

7. 9

8. 11

9. 5

10. 13