




Use the units provided to measure the width of each of the bars.

Answers



1. \_\_\_\_\_



2. \_\_\_\_\_



3. \_\_\_\_\_



4. \_\_\_\_\_



5. \_\_\_\_\_



6. \_\_\_\_\_



7. \_\_\_\_\_



8. \_\_\_\_\_





9. \_\_\_\_\_



10. \_\_\_\_\_



Use the units provided to measure the width of each of the bars.



Answers

1. 10

2. 1

3. 9

4. 2

5. 4

6. 3

7. 12

8. 7

9. 11

10. 6